



Resuelve cada problema.

1)  $5 + 0 = \underline{\quad}$

2)  $4 + 0 = \underline{\quad}$

3)  $2 + 0 = \underline{\quad}$

4)  $1 + 1 = \underline{\quad}$

5)  $4 + 1 = \underline{\quad}$

6)  $1 + 4 = \underline{\quad}$

7)  $1 + 2 = \underline{\quad}$

8)  $2 + 3 = \underline{\quad}$

9)  $4 - 4 = \underline{\quad}$

10)  $5 - 5 = \underline{\quad}$

11)  $2 - 2 = \underline{\quad}$

12)  $5 - 3 = \underline{\quad}$

13)  $5 - 4 = \underline{\quad}$

14)  $3 - 3 = \underline{\quad}$

15)  $4 - 1 = \underline{\quad}$

16)  $3 - 2 = \underline{\quad}$

**Respuestas**

1. \_\_\_\_\_

2. \_\_\_\_\_

3. \_\_\_\_\_

4. \_\_\_\_\_

5. \_\_\_\_\_

6. \_\_\_\_\_

7. \_\_\_\_\_

8. \_\_\_\_\_

9. \_\_\_\_\_

10. \_\_\_\_\_

11. \_\_\_\_\_

12. \_\_\_\_\_

13. \_\_\_\_\_

14. \_\_\_\_\_

15. \_\_\_\_\_

16. \_\_\_\_\_



Resuelve cada problema.

1)  $5 + 0 = \underline{5}$

2)  $4 + 0 = \underline{4}$

3)  $2 + 0 = \underline{2}$

4)  $1 + 1 = \underline{2}$

5)  $4 + 1 = \underline{5}$

6)  $1 + 4 = \underline{5}$

7)  $1 + 2 = \underline{3}$

8)  $2 + 3 = \underline{5}$

9)  $4 - 4 = \underline{0}$

10)  $5 - 5 = \underline{0}$

11)  $2 - 2 = \underline{0}$

12)  $5 - 3 = \underline{2}$

13)  $5 - 4 = \underline{1}$

14)  $3 - 3 = \underline{0}$

15)  $4 - 1 = \underline{3}$

16)  $3 - 2 = \underline{1}$

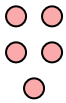
**Respuestas**1. 52. 43. 24. 25. 56. 57. 38. 59. 010. 011. 012. 213. 114. 015. 316. 1




Resuelve cada problema.

**Respuestas**


1)  $5 + 0 = \underline{\quad}$





2)  $4 + 0 = \underline{\quad}$





3)  $2 + 0 = \underline{\quad}$





4)  $1 + 1 = \underline{\quad}$



5)  $4 + 1 = \underline{\quad}$



6)  $1 + 4 = \underline{\quad}$

7)  $1 + 2 = \underline{\quad}$



8)  $2 + 3 = \underline{\quad}$



9)  $4 - 4 = \underline{\quad}$






10)  $5 - 5 = \underline{\quad}$



11)  $2 - 2 = \underline{\quad}$



12)  $5 - 3 = \underline{\quad}$



13)  $5 - 4 = \underline{\quad}$



14)  $3 - 3 = \underline{\quad}$

15)  $4 - 1 = \underline{\quad}$

16)  $3 - 2 = \underline{\quad}$

1. \_\_\_\_\_
2. \_\_\_\_\_
3. \_\_\_\_\_
4. \_\_\_\_\_
5. \_\_\_\_\_
6. \_\_\_\_\_
7. \_\_\_\_\_
8. \_\_\_\_\_
9. \_\_\_\_\_
10. \_\_\_\_\_
11. \_\_\_\_\_
12. \_\_\_\_\_
13. \_\_\_\_\_
14. \_\_\_\_\_
15. \_\_\_\_\_
16. \_\_\_\_\_