



Resuelve cada problema.

Respuestas

1) $3 + 2 = \underline{\quad}$

2) $5 + 0 = \underline{\quad}$

3) $2 + 1 = \underline{\quad}$

4) $2 + 3 = \underline{\quad}$

5) $1 + 2 = \underline{\quad}$

6) $3 + 0 = \underline{\quad}$

7) $4 + 0 = \underline{\quad}$

8) $2 + 0 = \underline{\quad}$

9) $1 - 1 = \underline{\quad}$

10) $5 - 4 = \underline{\quad}$

11) $5 - 5 = \underline{\quad}$

12) $3 - 1 = \underline{\quad}$

13) $2 - 2 = \underline{\quad}$

14) $4 - 4 = \underline{\quad}$

15) $5 - 2 = \underline{\quad}$

16) $5 - 1 = \underline{\quad}$

1. _____
2. _____
3. _____
4. _____
5. _____
6. _____
7. _____
8. _____
9. _____
10. _____
11. _____
12. _____
13. _____
14. _____
15. _____
16. _____



Resuelve cada problema.

1) $3 + 2 = \underline{5}$

2) $5 + 0 = \underline{5}$

3) $2 + 1 = \underline{3}$

4) $2 + 3 = \underline{5}$

5) $1 + 2 = \underline{3}$

6) $3 + 0 = \underline{3}$

7) $4 + 0 = \underline{4}$

8) $2 + 0 = \underline{2}$

9) $1 - 1 = \underline{0}$

10) $5 - 4 = \underline{1}$

11) $5 - 5 = \underline{0}$

12) $3 - 1 = \underline{2}$

13) $2 - 2 = \underline{0}$

14) $4 - 4 = \underline{0}$

15) $5 - 2 = \underline{3}$

16) $5 - 1 = \underline{4}$


Respuestas1. 52. 53. 34. 55. 36. 37. 48. 29. 010. 111. 012. 213. 014. 015. 316. 4




Resuelve cada problema.

Respuestas


1) $3 + 2 = \underline{\quad}$




2) $5 + 0 = \underline{\quad}$



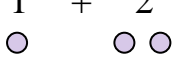
3) $2 + 1 = \underline{\quad}$




4) $2 + 3 = \underline{\quad}$




5) $1 + 2 = \underline{\quad}$




6) $3 + 0 = \underline{\quad}$




7) $4 + 0 = \underline{\quad}$



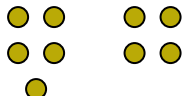
8) $2 + 0 = \underline{\quad}$



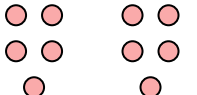
9) $1 - 1 = \underline{\quad}$




10) $5 - 4 = \underline{\quad}$




11) $5 - 5 = \underline{\quad}$




12) $3 - 1 = \underline{\quad}$



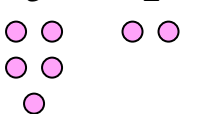
13) $2 - 2 = \underline{\quad}$




14) $4 - 4 = \underline{\quad}$



15) $5 - 2 = \underline{\quad}$



16) $5 - 1 = \underline{\quad}$



1. _____
2. _____
3. _____
4. _____
5. _____
6. _____
7. _____
8. _____
9. _____
10. _____
11. _____
12. _____
13. _____
14. _____
15. _____
16. _____