



Resuelve cada problema.

**Respuestas**

1)  $1 + 1 = \underline{\quad}$

2)  $2 + 1 = \underline{\quad}$

1. \_\_\_\_\_

3)  $1 + 4 = \underline{\quad}$

4)  $3 + 0 = \underline{\quad}$

2. \_\_\_\_\_

5)  $3 + 2 = \underline{\quad}$

6)  $4 + 0 = \underline{\quad}$

3. \_\_\_\_\_

4. \_\_\_\_\_

5. \_\_\_\_\_

7)  $1 + 2 = \underline{\quad}$

8)  $5 + 0 = \underline{\quad}$

6. \_\_\_\_\_

7. \_\_\_\_\_

9)  $5 - 2 = \underline{\quad}$

10)  $4 - 4 = \underline{\quad}$

8. \_\_\_\_\_

9. \_\_\_\_\_

10. \_\_\_\_\_

11)  $5 - 5 = \underline{\quad}$

12)  $2 - 2 = \underline{\quad}$

11. \_\_\_\_\_

12. \_\_\_\_\_

13. \_\_\_\_\_

13)  $3 - 3 = \underline{\quad}$

14)  $4 - 2 = \underline{\quad}$

14. \_\_\_\_\_

15. \_\_\_\_\_

16. \_\_\_\_\_

15)  $5 - 3 = \underline{\quad}$

16)  $2 - 1 = \underline{\quad}$



Resuelve cada problema.

1)  $1 + 1 = \underline{2}$

2)  $2 + 1 = \underline{3}$

3)  $1 + 4 = \underline{5}$

4)  $3 + 0 = \underline{3}$

5)  $3 + 2 = \underline{5}$

6)  $4 + 0 = \underline{4}$

7)  $1 + 2 = \underline{3}$

8)  $5 + 0 = \underline{5}$

9)  $5 - 2 = \underline{3}$

10)  $4 - 4 = \underline{0}$

11)  $5 - 5 = \underline{0}$

12)  $2 - 2 = \underline{0}$

13)  $3 - 3 = \underline{0}$

14)  $4 - 2 = \underline{2}$

15)  $5 - 3 = \underline{2}$

16)  $2 - 1 = \underline{1}$

**Respuestas**1. 22. 33. 54. 35. 56. 47. 38. 59. 310. 011. 012. 013. 014. 215. 216. 1



Resuelve cada problema.

**Respuestas**

1) 1 + 1 = \_\_\_\_\_  
 +

2) 2 + 1 = \_\_\_\_\_  
 +

3) 1 + 4 = \_\_\_\_\_  
 +

4) 3 + 0 = \_\_\_\_\_

5) 3 + 2 = \_\_\_\_\_  
 +

6) 4 + 0 = \_\_\_\_\_

7) 1 + 2 = \_\_\_\_\_  
 +

8) 5 + 0 = \_\_\_\_\_

9) 5 - 2 = \_\_\_\_\_  
 -

10) 4 - 4 = \_\_\_\_\_  
 -

11) 5 - 5 = \_\_\_\_\_  
 -

12) 2 - 2 = \_\_\_\_\_  
 -

13) 3 - 3 = \_\_\_\_\_  
 -

14) 4 - 2 = \_\_\_\_\_  
 -

15) 5 - 3 = \_\_\_\_\_  
 -

16) 2 - 1 = \_\_\_\_\_  
 -

1. \_\_\_\_\_
2. \_\_\_\_\_
3. \_\_\_\_\_
4. \_\_\_\_\_
5. \_\_\_\_\_
6. \_\_\_\_\_
7. \_\_\_\_\_
8. \_\_\_\_\_
9. \_\_\_\_\_
10. \_\_\_\_\_
11. \_\_\_\_\_
12. \_\_\_\_\_
13. \_\_\_\_\_
14. \_\_\_\_\_
15. \_\_\_\_\_
16. \_\_\_\_\_



Resuelve cada problema.

**Respuestas**

1)  $5 + 0 = \underline{\quad}$

2)  $4 + 0 = \underline{\quad}$

3)  $2 + 0 = \underline{\quad}$

4)  $1 + 1 = \underline{\quad}$

5)  $4 + 1 = \underline{\quad}$

6)  $1 + 4 = \underline{\quad}$

7)  $1 + 2 = \underline{\quad}$

8)  $2 + 3 = \underline{\quad}$

9)  $4 - 4 = \underline{\quad}$

10)  $5 - 5 = \underline{\quad}$

11)  $2 - 2 = \underline{\quad}$

12)  $5 - 3 = \underline{\quad}$

13)  $5 - 4 = \underline{\quad}$

14)  $3 - 3 = \underline{\quad}$

15)  $4 - 1 = \underline{\quad}$

16)  $3 - 2 = \underline{\quad}$

- 1. \_\_\_\_\_
- 2. \_\_\_\_\_
- 3. \_\_\_\_\_
- 4. \_\_\_\_\_
- 5. \_\_\_\_\_
- 6. \_\_\_\_\_
- 7. \_\_\_\_\_
- 8. \_\_\_\_\_
- 9. \_\_\_\_\_
- 10. \_\_\_\_\_
- 11. \_\_\_\_\_
- 12. \_\_\_\_\_
- 13. \_\_\_\_\_
- 14. \_\_\_\_\_
- 15. \_\_\_\_\_
- 16. \_\_\_\_\_



Resuelve cada problema.

1)  $5 + 0 = \underline{5}$

2)  $4 + 0 = \underline{4}$

3)  $2 + 0 = \underline{2}$

4)  $1 + 1 = \underline{2}$

5)  $4 + 1 = \underline{5}$

6)  $1 + 4 = \underline{5}$

7)  $1 + 2 = \underline{3}$

8)  $2 + 3 = \underline{5}$

9)  $4 - 4 = \underline{0}$

10)  $5 - 5 = \underline{0}$

11)  $2 - 2 = \underline{0}$

12)  $5 - 3 = \underline{2}$

13)  $5 - 4 = \underline{1}$

14)  $3 - 3 = \underline{0}$

15)  $4 - 1 = \underline{3}$

16)  $3 - 2 = \underline{1}$

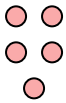
**Respuestas**1. 52. 43. 24. 25. 56. 57. 38. 59. 010. 011. 012. 213. 114. 015. 316. 1




Resuelve cada problema.

**Respuestas**


1)  $5 + 0 = \underline{\quad}$





2)  $4 + 0 = \underline{\quad}$





3)  $2 + 0 = \underline{\quad}$





4)  $1 + 1 = \underline{\quad}$



5)  $4 + 1 = \underline{\quad}$



6)  $1 + 4 = \underline{\quad}$


7)  $1 + 2 = \underline{\quad}$



8)  $2 + 3 = \underline{\quad}$



9)  $4 - 4 = \underline{\quad}$






10)  $5 - 5 = \underline{\quad}$



11)  $2 - 2 = \underline{\quad}$



12)  $5 - 3 = \underline{\quad}$



13)  $5 - 4 = \underline{\quad}$



14)  $3 - 3 = \underline{\quad}$

15)  $4 - 1 = \underline{\quad}$

16)  $3 - 2 = \underline{\quad}$

1. \_\_\_\_\_
2. \_\_\_\_\_
3. \_\_\_\_\_
4. \_\_\_\_\_
5. \_\_\_\_\_
6. \_\_\_\_\_
7. \_\_\_\_\_
8. \_\_\_\_\_
9. \_\_\_\_\_
10. \_\_\_\_\_
11. \_\_\_\_\_
12. \_\_\_\_\_
13. \_\_\_\_\_
14. \_\_\_\_\_
15. \_\_\_\_\_
16. \_\_\_\_\_



Resuelve cada problema.

**Respuestas**

1)  $3 + 2 = \underline{\quad}$

2)  $5 + 0 = \underline{\quad}$

3)  $2 + 1 = \underline{\quad}$

4)  $2 + 3 = \underline{\quad}$

5)  $1 + 2 = \underline{\quad}$

6)  $3 + 0 = \underline{\quad}$

7)  $4 + 0 = \underline{\quad}$

8)  $2 + 0 = \underline{\quad}$

9)  $1 - 1 = \underline{\quad}$

10)  $5 - 4 = \underline{\quad}$

11)  $5 - 5 = \underline{\quad}$

12)  $3 - 1 = \underline{\quad}$

13)  $2 - 2 = \underline{\quad}$

14)  $4 - 4 = \underline{\quad}$

15)  $5 - 2 = \underline{\quad}$

16)  $5 - 1 = \underline{\quad}$

1. \_\_\_\_\_
2. \_\_\_\_\_
3. \_\_\_\_\_
4. \_\_\_\_\_
5. \_\_\_\_\_
6. \_\_\_\_\_
7. \_\_\_\_\_
8. \_\_\_\_\_
9. \_\_\_\_\_
10. \_\_\_\_\_
11. \_\_\_\_\_
12. \_\_\_\_\_
13. \_\_\_\_\_
14. \_\_\_\_\_
15. \_\_\_\_\_
16. \_\_\_\_\_



Resuelve cada problema.

1)  $3 + 2 = \underline{5}$

2)  $5 + 0 = \underline{5}$

3)  $2 + 1 = \underline{3}$

4)  $2 + 3 = \underline{5}$

5)  $1 + 2 = \underline{3}$

6)  $3 + 0 = \underline{3}$

7)  $4 + 0 = \underline{4}$

8)  $2 + 0 = \underline{2}$

9)  $1 - 1 = \underline{0}$

10)  $5 - 4 = \underline{1}$

11)  $5 - 5 = \underline{0}$

12)  $3 - 1 = \underline{2}$

13)  $2 - 2 = \underline{0}$

14)  $4 - 4 = \underline{0}$

15)  $5 - 2 = \underline{3}$

16)  $5 - 1 = \underline{4}$

**Respuestas**1. 52. 53. 34. 55. 36. 37. 48. 29. 010. 111. 012. 213. 014. 015. 316. 4







Resuelve cada problema.

**Respuestas**


1)  $3 + 2 = \underline{\quad}$




2)  $5 + 0 = \underline{\quad}$




3)  $2 + 1 = \underline{\quad}$




4)  $2 + 3 = \underline{\quad}$




5)  $1 + 2 = \underline{\quad}$




6)  $3 + 0 = \underline{\quad}$




7)  $4 + 0 = \underline{\quad}$



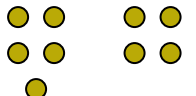
8)  $2 + 0 = \underline{\quad}$



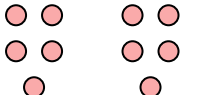
9)  $1 - 1 = \underline{\quad}$




10)  $5 - 4 = \underline{\quad}$




11)  $5 - 5 = \underline{\quad}$



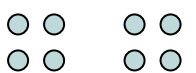
12)  $3 - 1 = \underline{\quad}$



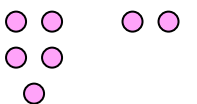
13)  $2 - 2 = \underline{\quad}$



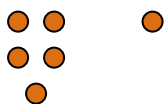
14)  $4 - 4 = \underline{\quad}$



15)  $5 - 2 = \underline{\quad}$



16)  $5 - 1 = \underline{\quad}$



1. \_\_\_\_\_
2. \_\_\_\_\_
3. \_\_\_\_\_
4. \_\_\_\_\_
5. \_\_\_\_\_
6. \_\_\_\_\_
7. \_\_\_\_\_
8. \_\_\_\_\_
9. \_\_\_\_\_
10. \_\_\_\_\_
11. \_\_\_\_\_
12. \_\_\_\_\_
13. \_\_\_\_\_
14. \_\_\_\_\_
15. \_\_\_\_\_
16. \_\_\_\_\_



Resuelve cada problema.

**Respuestas**

1)  $2 + 1 = \underline{\quad}$

2)  $4 + 1 = \underline{\quad}$

1. \_\_\_\_\_

3)  $2 + 0 = \underline{\quad}$

4)  $2 + 2 = \underline{\quad}$

2. \_\_\_\_\_

5)  $1 + 1 = \underline{\quad}$

6)  $3 + 0 = \underline{\quad}$

3. \_\_\_\_\_

4. \_\_\_\_\_

5. \_\_\_\_\_

7)  $3 + 2 = \underline{\quad}$

8)  $1 + 3 = \underline{\quad}$

6. \_\_\_\_\_

7. \_\_\_\_\_

9)  $3 - 2 = \underline{\quad}$

10)  $5 - 5 = \underline{\quad}$

8. \_\_\_\_\_

9. \_\_\_\_\_

10. \_\_\_\_\_

11. \_\_\_\_\_

12. \_\_\_\_\_

11)  $5 - 4 = \underline{\quad}$

12)  $5 - 3 = \underline{\quad}$

13. \_\_\_\_\_

14. \_\_\_\_\_

15. \_\_\_\_\_

13)  $4 - 4 = \underline{\quad}$

14)  $2 - 1 = \underline{\quad}$

16. \_\_\_\_\_

15)  $3 - 1 = \underline{\quad}$

16)  $2 - 2 = \underline{\quad}$



Resuelve cada problema.

1)  $2 + 1 = \underline{3}$

2)  $4 + 1 = \underline{5}$

3)  $2 + 0 = \underline{2}$

4)  $2 + 2 = \underline{4}$

5)  $1 + 1 = \underline{2}$

6)  $3 + 0 = \underline{3}$

7)  $3 + 2 = \underline{5}$

8)  $1 + 3 = \underline{4}$

9)  $3 - 2 = \underline{1}$

10)  $5 - 5 = \underline{0}$

11)  $5 - 4 = \underline{1}$

12)  $5 - 3 = \underline{2}$

13)  $4 - 4 = \underline{0}$

14)  $2 - 1 = \underline{1}$

15)  $3 - 1 = \underline{2}$



16)  $2 - 2 = \underline{0}$



**Respuestas**1. 32. 53. 24. 45. 26. 37. 58. 49. 110. 011. 112. 213. 014. 115. 216. 0






Resuelve cada problema.



**Respuestas**


1)  $2 + 1 = \underline{\quad}$   
 + 



2)  $4 + 1 = \underline{\quad}$   
 + 



3)  $2 + 0 = \underline{\quad}$   




4)  $2 + 2 = \underline{\quad}$   
 + 



5)  $1 + 1 = \underline{\quad}$   
 + 

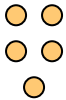

6)  $3 + 0 = \underline{\quad}$   




7)  $3 + 2 = \underline{\quad}$   
 + 



8)  $1 + 3 = \underline{\quad}$   
 + 



9)  $3 - 2 = \underline{\quad}$   
 - 



10)  $5 - 5 = \underline{\quad}$   
 - 



11)  $5 - 4 = \underline{\quad}$   
 - 

12)  $5 - 3 = \underline{\quad}$   
 - 

13)  $4 - 4 = \underline{\quad}$   
 - 

14)  $2 - 1 = \underline{\quad}$   
 - 

15)  $3 - 1 = \underline{\quad}$   
 - 

16)  $2 - 2 = \underline{\quad}$   
 - 

1. \_\_\_\_\_
2. \_\_\_\_\_
3. \_\_\_\_\_
4. \_\_\_\_\_
5. \_\_\_\_\_
6. \_\_\_\_\_
7. \_\_\_\_\_
8. \_\_\_\_\_
9. \_\_\_\_\_
10. \_\_\_\_\_
11. \_\_\_\_\_
12. \_\_\_\_\_
13. \_\_\_\_\_
14. \_\_\_\_\_
15. \_\_\_\_\_
16. \_\_\_\_\_



Resuelve cada problema.

**Respuestas**

1)  $3 + 2 = \underline{\quad}$

2)  $5 + 0 = \underline{\quad}$

1. \_\_\_\_\_

3)  $3 + 1 = \underline{\quad}$

4)  $3 + 0 = \underline{\quad}$

2. \_\_\_\_\_

5)  $2 + 0 = \underline{\quad}$

6)  $4 + 0 = \underline{\quad}$

3. \_\_\_\_\_

4. \_\_\_\_\_

5. \_\_\_\_\_

7)  $1 + 3 = \underline{\quad}$

8)  $1 + 4 = \underline{\quad}$

6. \_\_\_\_\_

7. \_\_\_\_\_

8. \_\_\_\_\_

9)  $3 - 3 = \underline{\quad}$

10)  $4 - 3 = \underline{\quad}$

9. \_\_\_\_\_

10. \_\_\_\_\_

11. \_\_\_\_\_

12. \_\_\_\_\_

11)  $5 - 2 = \underline{\quad}$

12)  $4 - 1 = \underline{\quad}$

13. \_\_\_\_\_

14. \_\_\_\_\_

15. \_\_\_\_\_

13)  $5 - 4 = \underline{\quad}$

14)  $5 - 3 = \underline{\quad}$

16. \_\_\_\_\_

15)  $4 - 2 = \underline{\quad}$

16)  $3 - 2 = \underline{\quad}$



Resuelve cada problema.

1)  $3 + 2 = \underline{5}$

2)  $5 + 0 = \underline{5}$

3)  $3 + 1 = \underline{4}$

4)  $3 + 0 = \underline{3}$

5)  $2 + 0 = \underline{2}$

6)  $4 + 0 = \underline{4}$

7)  $1 + 3 = \underline{4}$

8)  $1 + 4 = \underline{5}$

9)  $3 - 3 = \underline{0}$

10)  $4 - 3 = \underline{1}$

11)  $5 - 2 = \underline{3}$

12)  $4 - 1 = \underline{3}$

13)  $5 - 4 = \underline{1}$

14)  $5 - 3 = \underline{2}$

15)  $4 - 2 = \underline{2}$

16)  $3 - 2 = \underline{1}$


**Respuestas**1. 52. 53. 44. 35. 26. 47. 48. 59. 010. 111. 312. 313. 114. 215. 216. 1



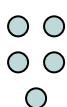
Resuelve cada problema.

**Respuestas**


1)  $3 + 2 = \underline{\quad}$




2)  $5 + 0 = \underline{\quad}$




3)  $3 + 1 = \underline{\quad}$




4)  $3 + 0 = \underline{\quad}$




5)  $2 + 0 = \underline{\quad}$



6)  $4 + 0 = \underline{\quad}$




7)  $1 + 3 = \underline{\quad}$




8)  $1 + 4 = \underline{\quad}$



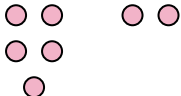
9)  $3 - 3 = \underline{\quad}$




10)  $4 - 3 = \underline{\quad}$



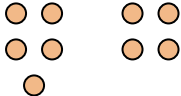
11)  $5 - 2 = \underline{\quad}$



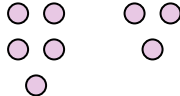
12)  $4 - 1 = \underline{\quad}$




13)  $5 - 4 = \underline{\quad}$




14)  $5 - 3 = \underline{\quad}$



15)  $4 - 2 = \underline{\quad}$



16)  $3 - 2 = \underline{\quad}$



1. \_\_\_\_\_
2. \_\_\_\_\_
3. \_\_\_\_\_
4. \_\_\_\_\_
5. \_\_\_\_\_
6. \_\_\_\_\_
7. \_\_\_\_\_
8. \_\_\_\_\_
9. \_\_\_\_\_
10. \_\_\_\_\_
11. \_\_\_\_\_
12. \_\_\_\_\_
13. \_\_\_\_\_
14. \_\_\_\_\_
15. \_\_\_\_\_
16. \_\_\_\_\_



Resuelve cada problema.

**Respuestas**

1)  $2 + 2 = \underline{\quad}$

2)  $5 + 0 = \underline{\quad}$

1. \_\_\_\_\_

3)  $3 + 0 = \underline{\quad}$

4)  $1 + 1 = \underline{\quad}$

2. \_\_\_\_\_

5)  $4 + 1 = \underline{\quad}$

6)  $2 + 3 = \underline{\quad}$

3. \_\_\_\_\_

4. \_\_\_\_\_

5. \_\_\_\_\_

7)  $1 + 4 = \underline{\quad}$

8)  $1 + 3 = \underline{\quad}$

6. \_\_\_\_\_

7. \_\_\_\_\_

8. \_\_\_\_\_

9)  $5 - 5 = \underline{\quad}$

10)  $5 - 1 = \underline{\quad}$

9. \_\_\_\_\_

10. \_\_\_\_\_

11. \_\_\_\_\_

12. \_\_\_\_\_

11)  $5 - 4 = \underline{\quad}$

12)  $5 - 3 = \underline{\quad}$

13. \_\_\_\_\_

14. \_\_\_\_\_

15. \_\_\_\_\_

13)  $5 - 2 = \underline{\quad}$

14)  $4 - 4 = \underline{\quad}$

16. \_\_\_\_\_

15)  $3 - 3 = \underline{\quad}$

16)  $3 - 1 = \underline{\quad}$





Resuelve cada problema.

1)  $2 + 2 = \underline{4}$

2)  $5 + 0 = \underline{5}$

3)  $3 + 0 = \underline{3}$

4)  $1 + 1 = \underline{2}$

5)  $4 + 1 = \underline{5}$

6)  $2 + 3 = \underline{5}$

7)  $1 + 4 = \underline{5}$

8)  $1 + 3 = \underline{4}$

9)  $5 - 5 = \underline{0}$

10)  $5 - 1 = \underline{4}$

11)  $5 - 4 = \underline{1}$

12)  $5 - 3 = \underline{2}$

13)  $5 - 2 = \underline{3}$

14)  $4 - 4 = \underline{0}$

15)  $3 - 3 = \underline{0}$


16)  $3 - 1 = \underline{2}$


**Respuestas**1. 42. 53. 34. 25. 56. 57. 58. 49. 010. 411. 112. 213. 314. 015. 016. 2





Resuelve cada problema.


**Respuestas**


1)  $2 + 2 = \underline{\quad}$   



2)  $5 + 0 = \underline{\quad}$   



3)  $3 + 0 = \underline{\quad}$   


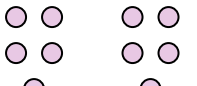
4)  $1 + 1 = \underline{\quad}$   



5)  $4 + 1 = \underline{\quad}$   


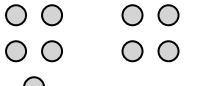
6)  $2 + 3 = \underline{\quad}$   


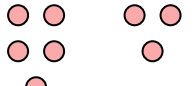
7)  $1 + 4 = \underline{\quad}$   


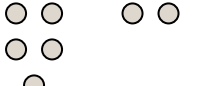
8)  $1 + 3 = \underline{\quad}$   


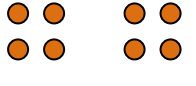
9)  $5 - 5 = \underline{\quad}$   



10)  $5 - 1 = \underline{\quad}$   



11)  $5 - 4 = \underline{\quad}$   


12)  $5 - 3 = \underline{\quad}$   


13)  $5 - 2 = \underline{\quad}$   


14)  $4 - 4 = \underline{\quad}$   


15)  $3 - 3 = \underline{\quad}$   


16)  $3 - 1 = \underline{\quad}$   


1. \_\_\_\_\_
2. \_\_\_\_\_
3. \_\_\_\_\_
4. \_\_\_\_\_
5. \_\_\_\_\_
6. \_\_\_\_\_
7. \_\_\_\_\_
8. \_\_\_\_\_
9. \_\_\_\_\_
10. \_\_\_\_\_
11. \_\_\_\_\_
12. \_\_\_\_\_
13. \_\_\_\_\_
14. \_\_\_\_\_
15. \_\_\_\_\_
16. \_\_\_\_\_



Resuelve cada problema.

**Respuestas**

1)  $4 + 0 = \underline{\quad}$

2)  $5 + 0 = \underline{\quad}$

3)  $4 + 1 = \underline{\quad}$

4)  $2 + 2 = \underline{\quad}$

5)  $1 + 2 = \underline{\quad}$

6)  $3 + 1 = \underline{\quad}$

7)  $1 + 0 = \underline{\quad}$

8)  $1 + 1 = \underline{\quad}$

9)  $3 - 2 = \underline{\quad}$

10)  $4 - 1 = \underline{\quad}$

11)  $5 - 5 = \underline{\quad}$

12)  $2 - 1 = \underline{\quad}$

13)  $5 - 4 = \underline{\quad}$

14)  $5 - 1 = \underline{\quad}$

15)  $4 - 3 = \underline{\quad}$

16)  $4 - 4 = \underline{\quad}$

1. \_\_\_\_\_
2. \_\_\_\_\_
3. \_\_\_\_\_
4. \_\_\_\_\_
5. \_\_\_\_\_
6. \_\_\_\_\_
7. \_\_\_\_\_
8. \_\_\_\_\_
9. \_\_\_\_\_
10. \_\_\_\_\_
11. \_\_\_\_\_
12. \_\_\_\_\_
13. \_\_\_\_\_
14. \_\_\_\_\_
15. \_\_\_\_\_
16. \_\_\_\_\_



Resuelve cada problema.

1)  $4 + 0 = \underline{4}$

2)  $5 + 0 = \underline{5}$

3)  $4 + 1 = \underline{5}$

4)  $2 + 2 = \underline{4}$

5)  $1 + 2 = \underline{3}$

6)  $3 + 1 = \underline{4}$

7)  $1 + 0 = \underline{1}$

8)  $1 + 1 = \underline{2}$

9)  $3 - 2 = \underline{1}$

10)  $4 - 1 = \underline{3}$

11)  $5 - 5 = \underline{0}$

12)  $2 - 1 = \underline{1}$

13)  $5 - 4 = \underline{1}$

14)  $5 - 1 = \underline{4}$

15)  $4 - 3 = \underline{1}$

16)  $4 - 4 = \underline{0}$


**Respuestas**1. 42. 53. 54. 45. 36. 47. 18. 29. 110. 311. 012. 113. 114. 415. 116. 0




Resuelve cada problema.

**Respuestas**

1)  $4 + 0 = \underline{\quad}$




2)  $5 + 0 = \underline{\quad}$




1. \_\_\_\_\_

2. \_\_\_\_\_

3)  $4 + 1 = \underline{\quad}$




4)  $2 + 2 = \underline{\quad}$




3. \_\_\_\_\_

4. \_\_\_\_\_

5)  $1 + 2 = \underline{\quad}$




6)  $3 + 1 = \underline{\quad}$




5. \_\_\_\_\_

6. \_\_\_\_\_

7)  $1 + 0 = \underline{\quad}$




8)  $1 + 1 = \underline{\quad}$




7. \_\_\_\_\_

8. \_\_\_\_\_

9)  $3 - 2 = \underline{\quad}$



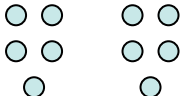
10)  $4 - 1 = \underline{\quad}$




9. \_\_\_\_\_

10. \_\_\_\_\_

11)  $5 - 5 = \underline{\quad}$



12)  $2 - 1 = \underline{\quad}$

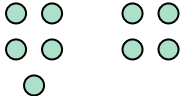


11. \_\_\_\_\_

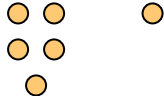
12. \_\_\_\_\_

13. \_\_\_\_\_

13)  $5 - 4 = \underline{\quad}$



14)  $5 - 1 = \underline{\quad}$




14. \_\_\_\_\_


15. \_\_\_\_\_

16. \_\_\_\_\_

15)  $4 - 3 = \underline{\quad}$



16)  $4 - 4 = \underline{\quad}$





Resuelve cada problema.

1)  $2 + 2 = \underline{\quad}$

2)  $3 + 2 = \underline{\quad}$

3)  $5 + 0 = \underline{\quad}$

4)  $4 + 1 = \underline{\quad}$

5)  $1 + 3 = \underline{\quad}$

6)  $2 + 3 = \underline{\quad}$

7)  $2 + 1 = \underline{\quad}$

8)  $3 + 1 = \underline{\quad}$

9)  $4 - 3 = \underline{\quad}$

10)  $5 - 5 = \underline{\quad}$

11)  $4 - 4 = \underline{\quad}$

12)  $3 - 3 = \underline{\quad}$

13)  $5 - 4 = \underline{\quad}$

14)  $5 - 2 = \underline{\quad}$

15)  $4 - 2 = \underline{\quad}$

16)  $3 - 2 = \underline{\quad}$

**Respuestas**

1. \_\_\_\_\_

2. \_\_\_\_\_

3. \_\_\_\_\_

4. \_\_\_\_\_

5. \_\_\_\_\_

6. \_\_\_\_\_

7. \_\_\_\_\_

8. \_\_\_\_\_

9. \_\_\_\_\_

10. \_\_\_\_\_

11. \_\_\_\_\_

12. \_\_\_\_\_

13. \_\_\_\_\_

14. \_\_\_\_\_

15. \_\_\_\_\_

16. \_\_\_\_\_



Resuelve cada problema.

1)  $2 + 2 = \underline{4}$

2)  $3 + 2 = \underline{5}$

3)  $5 + 0 = \underline{5}$

4)  $4 + 1 = \underline{5}$

5)  $1 + 3 = \underline{4}$

6)  $2 + 3 = \underline{5}$

7)  $2 + 1 = \underline{3}$

8)  $3 + 1 = \underline{4}$

9)  $4 - 3 = \underline{1}$

10)  $5 - 5 = \underline{0}$

11)  $4 - 4 = \underline{0}$

12)  $3 - 3 = \underline{0}$

13)  $5 - 4 = \underline{1}$

14)  $5 - 2 = \underline{3}$

15)  $4 - 2 = \underline{2}$


16)  $3 - 2 = \underline{1}$


**Respuestas**1. 42. 53. 54. 55. 46. 57. 38. 49. 110. 011. 012. 013. 114. 315. 216. 1





Resuelve cada problema.


**Respuestas**

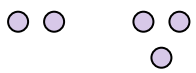
1)  $2 + 2 = \underline{\quad}$   



2)  $3 + 2 = \underline{\quad}$   



3)  $5 + 0 = \underline{\quad}$   



4)  $4 + 1 = \underline{\quad}$   


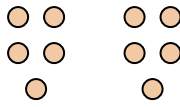
5)  $1 + 3 = \underline{\quad}$   



6)  $2 + 3 = \underline{\quad}$   



7)  $2 + 1 = \underline{\quad}$   


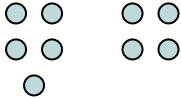
8)  $3 + 1 = \underline{\quad}$   


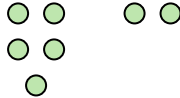
9)  $4 - 3 = \underline{\quad}$   



10)  $5 - 5 = \underline{\quad}$   



11)  $4 - 4 = \underline{\quad}$   


12)  $3 - 3 = \underline{\quad}$   


13)  $5 - 4 = \underline{\quad}$   


14)  $5 - 2 = \underline{\quad}$   


15)  $4 - 2 = \underline{\quad}$   


16)  $3 - 2 = \underline{\quad}$   


1. \_\_\_\_\_
2. \_\_\_\_\_
3. \_\_\_\_\_
4. \_\_\_\_\_
5. \_\_\_\_\_
6. \_\_\_\_\_
7. \_\_\_\_\_
8. \_\_\_\_\_
9. \_\_\_\_\_
10. \_\_\_\_\_
11. \_\_\_\_\_
12. \_\_\_\_\_
13. \_\_\_\_\_
14. \_\_\_\_\_
15. \_\_\_\_\_
16. \_\_\_\_\_





Resuelve cada problema.

1)  $4 + 1 = \underline{\quad}$

2)  $1 + 3 = \underline{\quad}$

3)  $3 + 2 = \underline{\quad}$

4)  $4 + 0 = \underline{\quad}$

5)  $1 + 2 = \underline{\quad}$

6)  $5 + 0 = \underline{\quad}$

7)  $2 + 2 = \underline{\quad}$

8)  $2 + 0 = \underline{\quad}$

9)  $5 - 4 = \underline{\quad}$

10)  $5 - 5 = \underline{\quad}$

11)  $4 - 2 = \underline{\quad}$

12)  $4 - 3 = \underline{\quad}$

13)  $3 - 2 = \underline{\quad}$

14)  $1 - 1 = \underline{\quad}$

15)  $3 - 1 = \underline{\quad}$

16)  $5 - 2 = \underline{\quad}$

**Respuestas**

1. \_\_\_\_\_

2. \_\_\_\_\_

3. \_\_\_\_\_

4. \_\_\_\_\_

5. \_\_\_\_\_

6. \_\_\_\_\_

7. \_\_\_\_\_

8. \_\_\_\_\_

9. \_\_\_\_\_

10. \_\_\_\_\_

11. \_\_\_\_\_

12. \_\_\_\_\_

13. \_\_\_\_\_

14. \_\_\_\_\_

15. \_\_\_\_\_

16. \_\_\_\_\_



Resuelve cada problema.

1)  $4 + 1 = \underline{5}$

2)  $1 + 3 = \underline{4}$

3)  $3 + 2 = \underline{5}$

4)  $4 + 0 = \underline{4}$

5)  $1 + 2 = \underline{3}$

6)  $5 + 0 = \underline{5}$

7)  $2 + 2 = \underline{4}$

8)  $2 + 0 = \underline{2}$

9)  $5 - 4 = \underline{1}$

10)  $5 - 5 = \underline{0}$

11)  $4 - 2 = \underline{2}$

12)  $4 - 3 = \underline{1}$

13)  $3 - 2 = \underline{1}$

14)  $1 - 1 = \underline{0}$

15)  $3 - 1 = \underline{2}$

16)  $5 - 2 = \underline{3}$


**Respuestas**1. 52. 43. 54. 45. 36. 57. 48. 29. 110. 011. 212. 113. 114. 015. 216. 3




Resuelve cada problema.

**Respuestas**


1)  $4 + 1 = \underline{\quad}$




2)  $1 + 3 = \underline{\quad}$




3)  $3 + 2 = \underline{\quad}$




4)  $4 + 0 = \underline{\quad}$




5)  $1 + 2 = \underline{\quad}$




6)  $5 + 0 = \underline{\quad}$



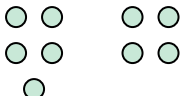
7)  $2 + 2 = \underline{\quad}$



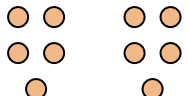
8)  $2 + 0 = \underline{\quad}$




9)  $5 - 4 = \underline{\quad}$




10)  $5 - 5 = \underline{\quad}$




11)  $4 - 2 = \underline{\quad}$




12)  $4 - 3 = \underline{\quad}$




13)  $3 - 2 = \underline{\quad}$




14)  $1 - 1 = \underline{\quad}$



15)  $3 - 1 = \underline{\quad}$



16)  $5 - 2 = \underline{\quad}$



1. \_\_\_\_\_
2. \_\_\_\_\_
3. \_\_\_\_\_
4. \_\_\_\_\_
5. \_\_\_\_\_
6. \_\_\_\_\_
7. \_\_\_\_\_
8. \_\_\_\_\_
9. \_\_\_\_\_
10. \_\_\_\_\_
11. \_\_\_\_\_
12. \_\_\_\_\_
13. \_\_\_\_\_
14. \_\_\_\_\_
15. \_\_\_\_\_
16. \_\_\_\_\_



Resuelve cada problema.

**Respuestas**

1)  $4 + 1 = \underline{\quad}$

2)  $2 + 2 = \underline{\quad}$

3)  $2 + 3 = \underline{\quad}$

4)  $3 + 2 = \underline{\quad}$

5)  $1 + 4 = \underline{\quad}$

6)  $5 + 0 = \underline{\quad}$

7)  $1 + 3 = \underline{\quad}$

8)  $3 + 1 = \underline{\quad}$

9)  $5 - 3 = \underline{\quad}$

10)  $5 - 5 = \underline{\quad}$

11)  $5 - 4 = \underline{\quad}$

12)  $4 - 4 = \underline{\quad}$

13)  $2 - 1 = \underline{\quad}$

14)  $4 - 2 = \underline{\quad}$

15)  $3 - 1 = \underline{\quad}$

16)  $4 - 3 = \underline{\quad}$

1. \_\_\_\_\_
2. \_\_\_\_\_
3. \_\_\_\_\_
4. \_\_\_\_\_
5. \_\_\_\_\_
6. \_\_\_\_\_
7. \_\_\_\_\_
8. \_\_\_\_\_
9. \_\_\_\_\_
10. \_\_\_\_\_
11. \_\_\_\_\_
12. \_\_\_\_\_
13. \_\_\_\_\_
14. \_\_\_\_\_
15. \_\_\_\_\_
16. \_\_\_\_\_



Resuelve cada problema.

1)  $4 + 1 = \underline{5}$

2)  $2 + 2 = \underline{4}$

3)  $2 + 3 = \underline{5}$

4)  $3 + 2 = \underline{5}$

5)  $1 + 4 = \underline{5}$

6)  $5 + 0 = \underline{5}$

7)  $1 + 3 = \underline{4}$

8)  $3 + 1 = \underline{4}$

9)  $5 - 3 = \underline{2}$

10)  $5 - 5 = \underline{0}$

11)  $5 - 4 = \underline{1}$

12)  $4 - 4 = \underline{0}$

13)  $2 - 1 = \underline{1}$

14)  $4 - 2 = \underline{2}$

15)  $3 - 1 = \underline{2}$

16)  $4 - 3 = \underline{1}$


**Respuestas**1. 52. 43. 54. 55. 56. 57. 48. 49. 210. 011. 112. 013. 114. 215. 216. 1




Resuelve cada problema.

**Respuestas**


1)  $4 + 1 = \underline{\quad}$




2)  $2 + 2 = \underline{\quad}$




3)  $2 + 3 = \underline{\quad}$




4)  $3 + 2 = \underline{\quad}$




5)  $1 + 4 = \underline{\quad}$




6)  $5 + 0 = \underline{\quad}$



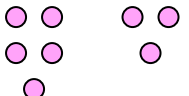
7)  $1 + 3 = \underline{\quad}$



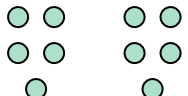
8)  $3 + 1 = \underline{\quad}$



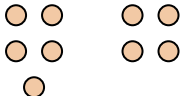
9)  $5 - 3 = \underline{\quad}$




10)  $5 - 5 = \underline{\quad}$




11)  $5 - 4 = \underline{\quad}$




12)  $4 - 4 = \underline{\quad}$




13)  $2 - 1 = \underline{\quad}$



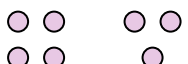
14)  $4 - 2 = \underline{\quad}$



15)  $3 - 1 = \underline{\quad}$



16)  $4 - 3 = \underline{\quad}$



1. \_\_\_\_\_
2. \_\_\_\_\_
3. \_\_\_\_\_
4. \_\_\_\_\_
5. \_\_\_\_\_
6. \_\_\_\_\_
7. \_\_\_\_\_
8. \_\_\_\_\_
9. \_\_\_\_\_
10. \_\_\_\_\_
11. \_\_\_\_\_
12. \_\_\_\_\_
13. \_\_\_\_\_
14. \_\_\_\_\_
15. \_\_\_\_\_
16. \_\_\_\_\_