



Resuelve cada problema.

**Respuestas**

1)  $2 + 1 = \underline{\quad}$

2)  $4 + 0 = \underline{\quad}$

3)  $3 + 0 = \underline{\quad}$

4)  $2 + 0 = \underline{\quad}$

5)  $5 + 0 = \underline{\quad}$

6)  $1 + 0 = \underline{\quad}$

7)  $1 + 3 = \underline{\quad}$

8)  $3 + 2 = \underline{\quad}$

9)  $5 - 2 = \underline{\quad}$

10)  $5 - 3 = \underline{\quad}$

11)  $2 - 1 = \underline{\quad}$

12)  $4 - 3 = \underline{\quad}$

13)  $5 - 4 = \underline{\quad}$

14)  $1 - 1 = \underline{\quad}$

15)  $5 - 5 = \underline{\quad}$

16)  $4 - 2 = \underline{\quad}$

1. \_\_\_\_\_

2. \_\_\_\_\_

3. \_\_\_\_\_

4. \_\_\_\_\_

5. \_\_\_\_\_

6. \_\_\_\_\_

7. \_\_\_\_\_

8. \_\_\_\_\_

9. \_\_\_\_\_

10. \_\_\_\_\_

11. \_\_\_\_\_

12. \_\_\_\_\_

13. \_\_\_\_\_

14. \_\_\_\_\_

15. \_\_\_\_\_

16. \_\_\_\_\_



Resuelve cada problema.

1)  $2 + 1 = \underline{3}$

2)  $4 + 0 = \underline{4}$

3)  $3 + 0 = \underline{3}$

4)  $2 + 0 = \underline{2}$

5)  $5 + 0 = \underline{5}$

6)  $1 + 0 = \underline{1}$

7)  $1 + 3 = \underline{4}$

8)  $3 + 2 = \underline{5}$

9)  $5 - 2 = \underline{3}$

10)  $5 - 3 = \underline{2}$

11)  $2 - 1 = \underline{1}$

12)  $4 - 3 = \underline{1}$

13)  $5 - 4 = \underline{1}$

14)  $1 - 1 = \underline{0}$


15)  $5 - 5 = \underline{0}$


16)  $4 - 2 = \underline{2}$


**Respuestas**1. 32. 43. 34. 25. 56. 17. 48. 59. 310. 211. 112. 113. 114. 015. 016. 2





Resuelve cada problema.


1)  $2 + 1 = \underline{\quad}$   



2)  $4 + 0 = \underline{\quad}$   



3)  $3 + 0 = \underline{\quad}$   


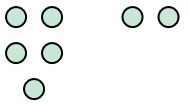
4)  $2 + 0 = \underline{\quad}$   


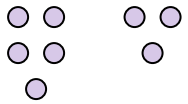
5)  $5 + 0 = \underline{\quad}$   



6)  $1 + 0 = \underline{\quad}$   



7)  $1 + 3 = \underline{\quad}$   


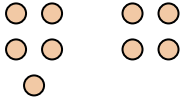
8)  $3 + 2 = \underline{\quad}$   



9)  $5 - 2 = \underline{\quad}$   


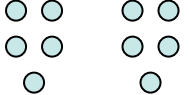
10)  $5 - 3 = \underline{\quad}$   



11)  $2 - 1 = \underline{\quad}$   


12)  $4 - 3 = \underline{\quad}$   


13)  $5 - 4 = \underline{\quad}$   


14)  $1 - 1 = \underline{\quad}$   


15)  $5 - 5 = \underline{\quad}$   


16)  $4 - 2 = \underline{\quad}$   


**Respuestas**

1. \_\_\_\_\_
2. \_\_\_\_\_
3. \_\_\_\_\_
4. \_\_\_\_\_
5. \_\_\_\_\_
6. \_\_\_\_\_
7. \_\_\_\_\_
8. \_\_\_\_\_
9. \_\_\_\_\_
10. \_\_\_\_\_
11. \_\_\_\_\_
12. \_\_\_\_\_
13. \_\_\_\_\_
14. \_\_\_\_\_
15. \_\_\_\_\_
16. \_\_\_\_\_