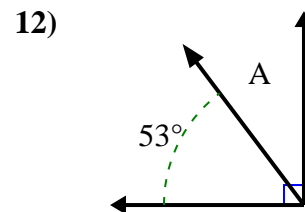
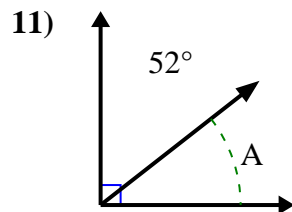
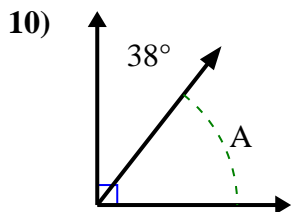
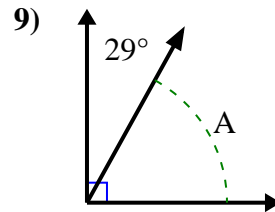
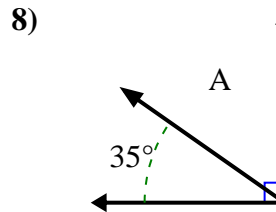
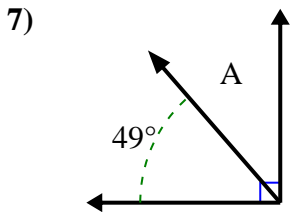
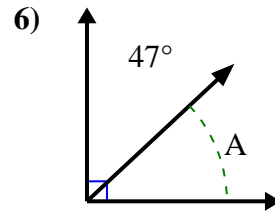
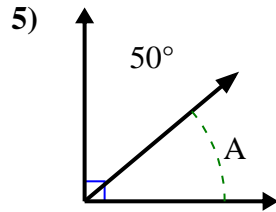
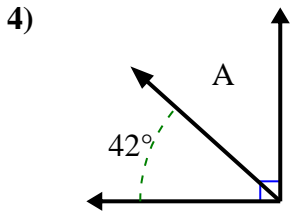
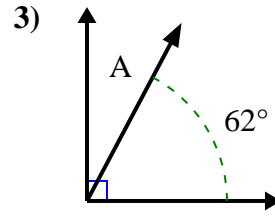
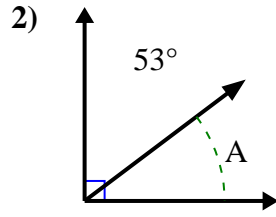
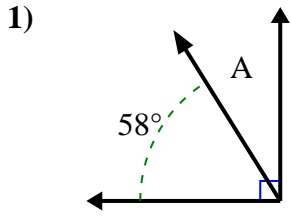




Encuentra el valor de 'A' en el conjunto de ángulos complementarios.

**Respuestas**

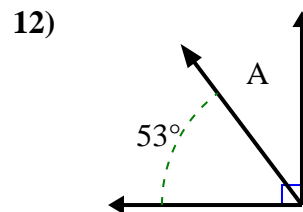
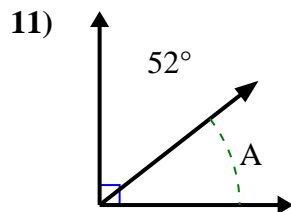
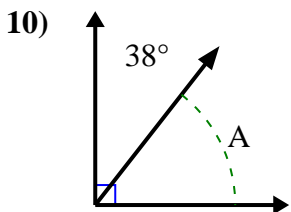
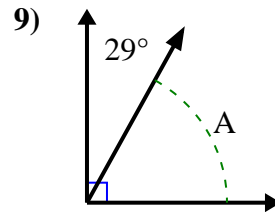
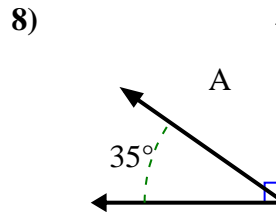
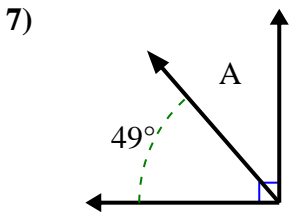
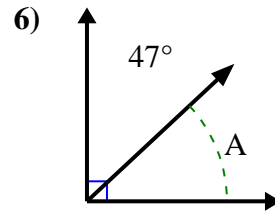
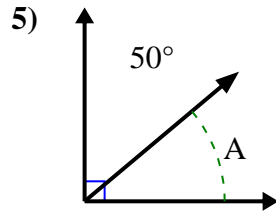
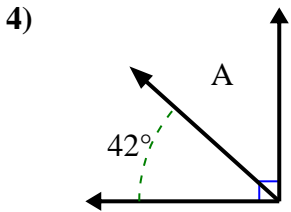
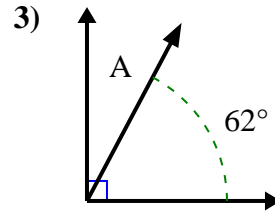
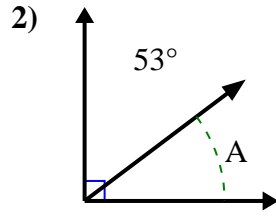
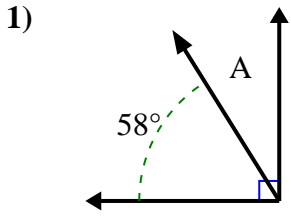


1. \_\_\_\_\_
2. \_\_\_\_\_
3. \_\_\_\_\_
4. \_\_\_\_\_
5. \_\_\_\_\_
6. \_\_\_\_\_
7. \_\_\_\_\_
8. \_\_\_\_\_
9. \_\_\_\_\_
10. \_\_\_\_\_
11. \_\_\_\_\_
12. \_\_\_\_\_



Encuentra el valor de 'A' en el conjunto de ángulos complementarios.

**Respuestas**



1. 32°

2. 37°

3. 28°

4. 48°

5. 40°

6. 43°

7. 41°

8. 55°

9. 61°

10. 52°

11. 38°

12. 37°