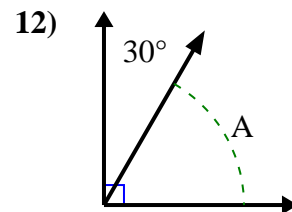
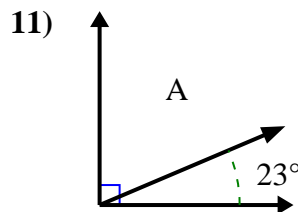
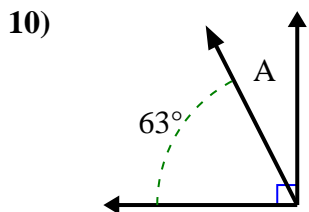
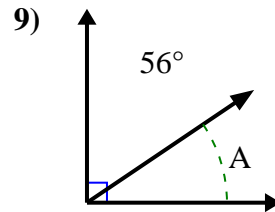
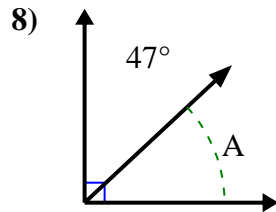
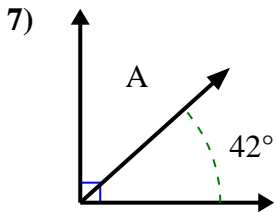
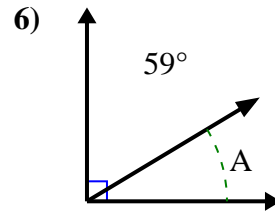
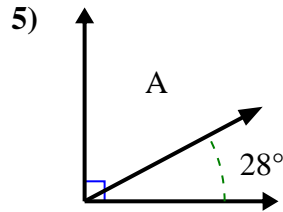
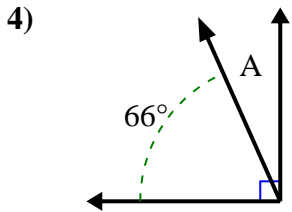
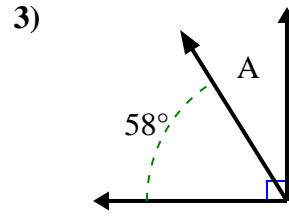
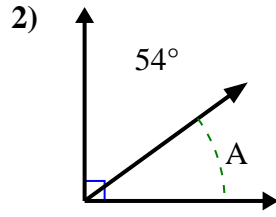
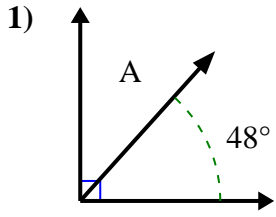




Encuentra el valor de 'A' en el conjunto de ángulos complementarios.

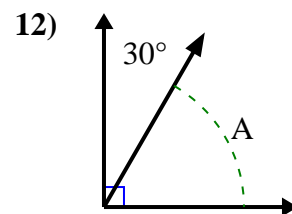
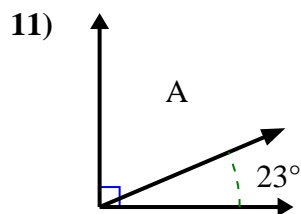
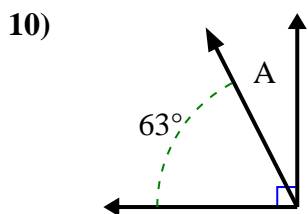
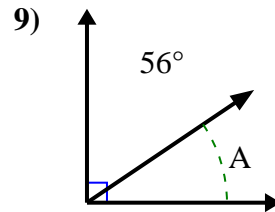
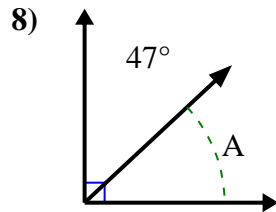
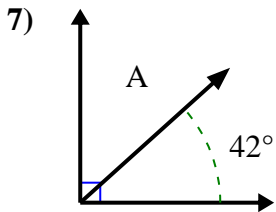
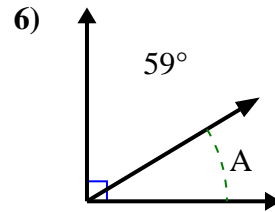
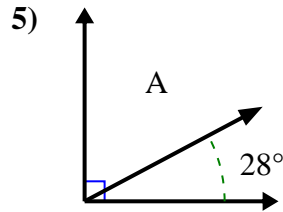
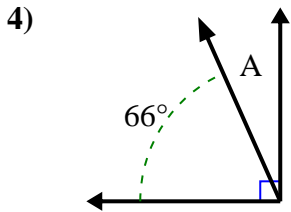
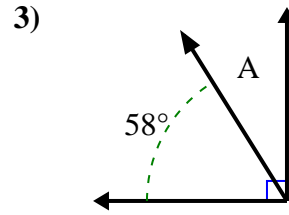
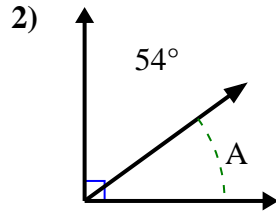
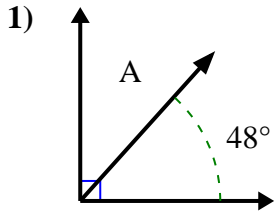
**Respuestas**



1. \_\_\_\_\_
2. \_\_\_\_\_
3. \_\_\_\_\_
4. \_\_\_\_\_
5. \_\_\_\_\_
6. \_\_\_\_\_
7. \_\_\_\_\_
8. \_\_\_\_\_
9. \_\_\_\_\_
10. \_\_\_\_\_
11. \_\_\_\_\_
12. \_\_\_\_\_



Encuentra el valor de 'A' en el conjunto de ángulos complementarios.

**Respuestas**1. 42°2. 36°3. 32°4. 24°5. 62°6. 31°7. 48°8. 43°9. 34°10. 27°11. 67°12. 60°