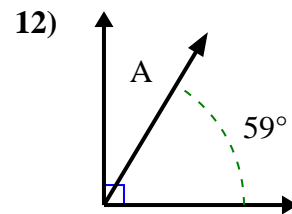
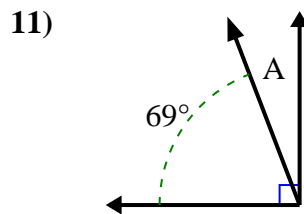
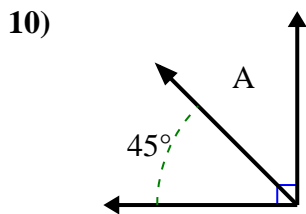
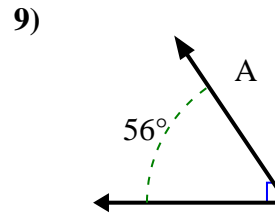
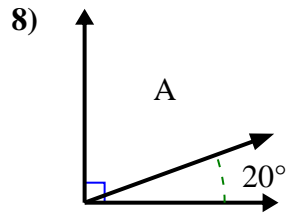
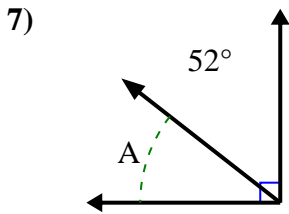
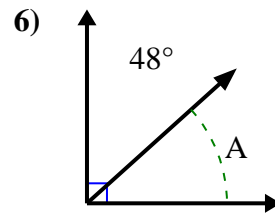
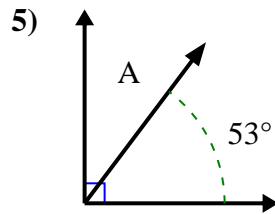
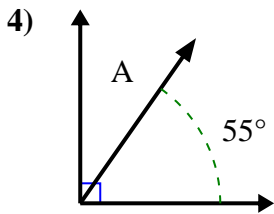
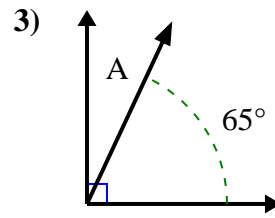
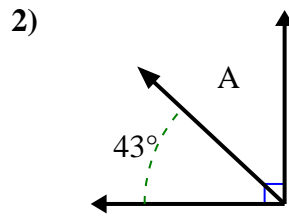
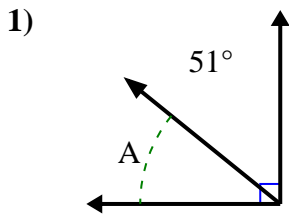




Encuentra el valor de 'A' en el conjunto de ángulos complementarios.

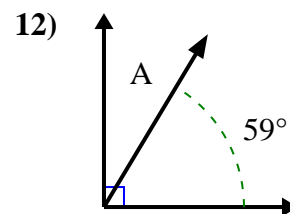
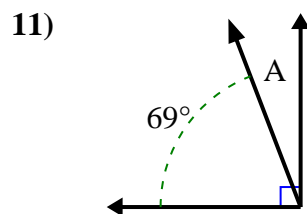
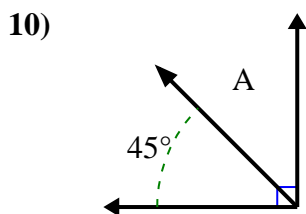
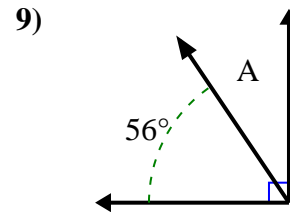
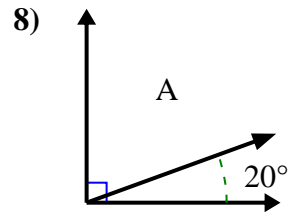
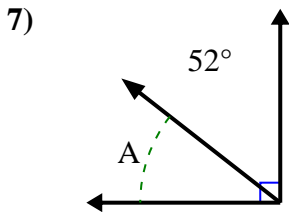
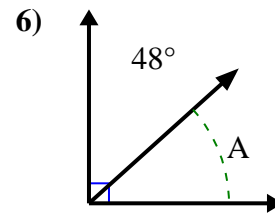
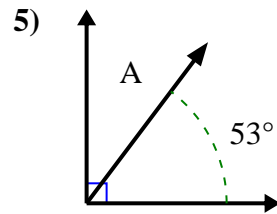
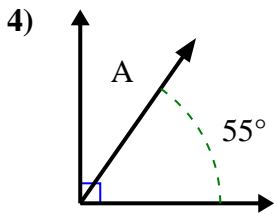
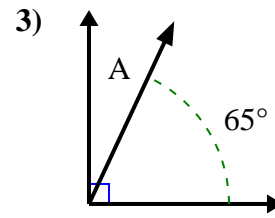
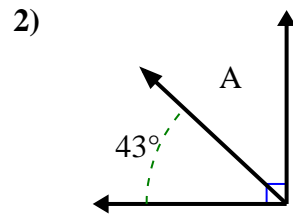
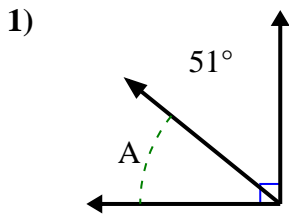
**Respuestas**



1. \_\_\_\_\_
2. \_\_\_\_\_
3. \_\_\_\_\_
4. \_\_\_\_\_
5. \_\_\_\_\_
6. \_\_\_\_\_
7. \_\_\_\_\_
8. \_\_\_\_\_
9. \_\_\_\_\_
10. \_\_\_\_\_
11. \_\_\_\_\_
12. \_\_\_\_\_



Encuentra el valor de 'A' en el conjunto de ángulos complementarios.

**Respuestas**1. 39°2. 47°3. 25°4. 35°5. 37°6. 42°7. 38°8. 70°9. 34°10. 45°11. 21°12. 31°