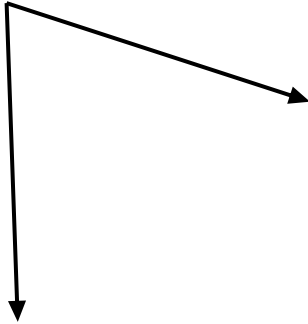
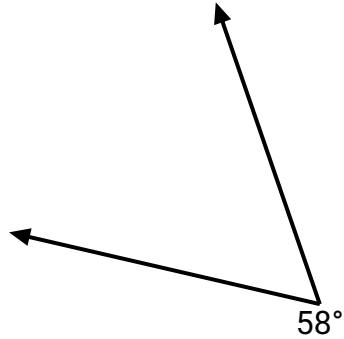




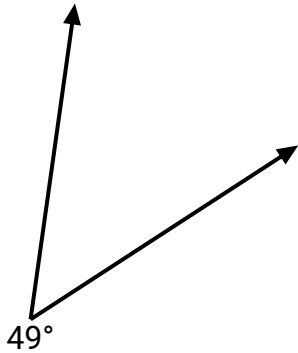
Utiliza un transportador para crear un triángulo a partir de la figura que se muestra. Responde con los ángulos que faltan. Las respuestas variarán.

1)  $70^\circ$ 

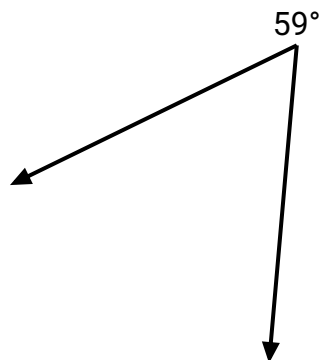
2)



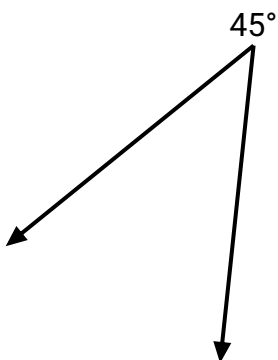
3)



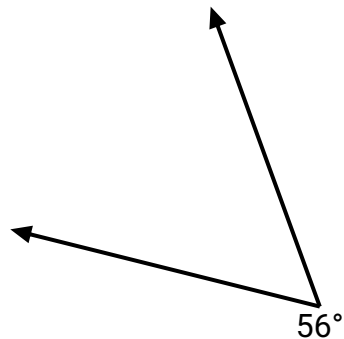
4)



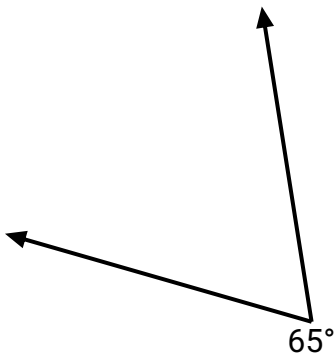
5)



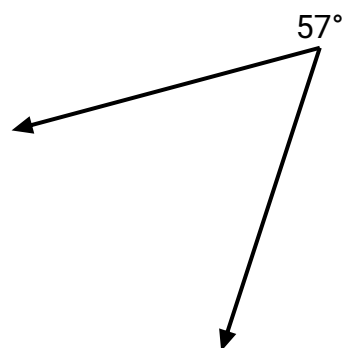
6)



7)



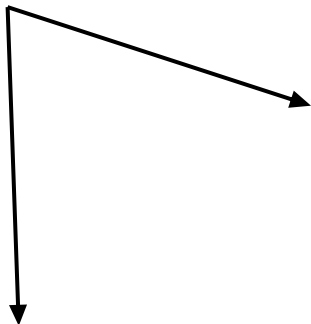
8)

**Respuestas**

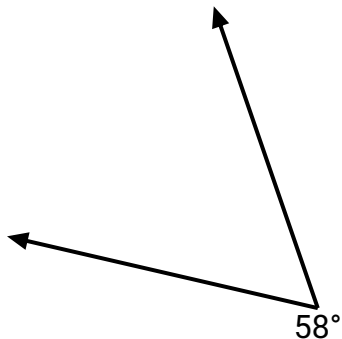
1. \_\_\_\_\_
2. \_\_\_\_\_
3. \_\_\_\_\_
4. \_\_\_\_\_
5. \_\_\_\_\_
6. \_\_\_\_\_
7. \_\_\_\_\_
8. \_\_\_\_\_



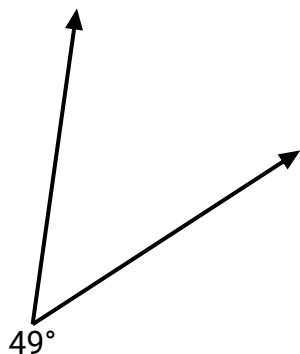
Utiliza un transportador para crear un triángulo a partir de la figura que se muestra. Responde con los ángulos que faltan. Las respuestas variarán.

1)  $70^\circ$ 

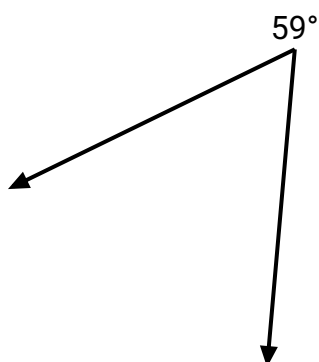
2)



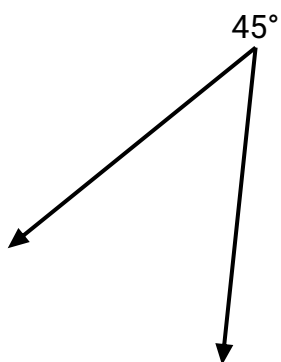
3)



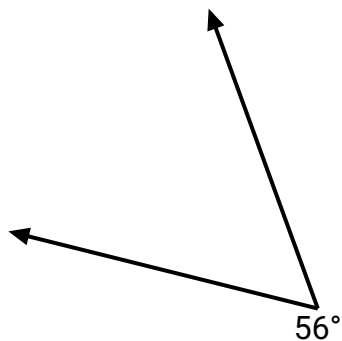
4)



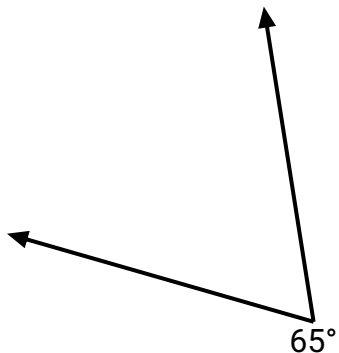
5)



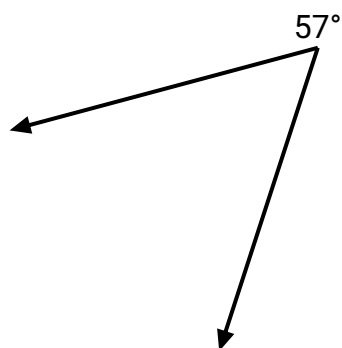
6)



7)



8)

**Respuestas**1. **=110**2. **=122**3. **=131**4. **=121**5. **=135**6. **=124**7. **=115**8. **=123**