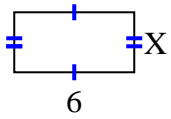


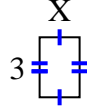


Encuentra el valor de X para cada figura. Cada figura está en centímetros (cm). No a escala.

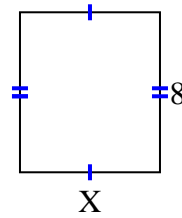
1) area = 18 cm^2



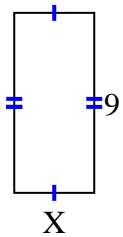
2) area = 6 cm^2



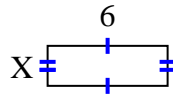
3) area = 56 cm^2



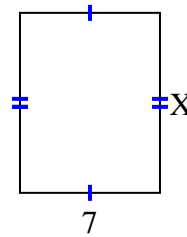
4) area = 36 cm^2



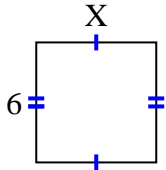
5) area = 12 cm^2



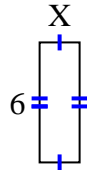
6) area = 63 cm^2



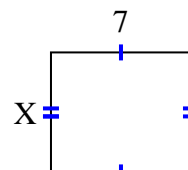
7) area = 36 cm^2



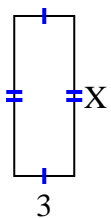
8) area = 12 cm^2



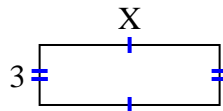
9) area = 42 cm^2



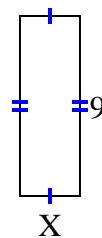
10) area = 24 cm^2



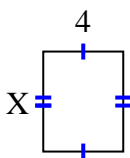
11) area = 27 cm^2



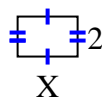
12) area = 27 cm^2



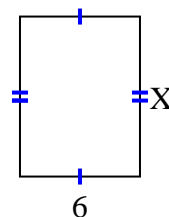
13) area = 20 cm^2



14) area = 6 cm^2



15) area = 48 cm^2



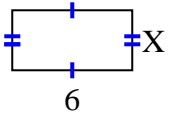
Respuestas

1. _____
2. _____
3. _____
4. _____
5. _____
6. _____
7. _____
8. _____
9. _____
10. _____
11. _____
12. _____
13. _____
14. _____
15. _____

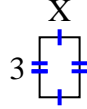


Encuentra el valor de X para cada figura. Cada figura está en centímetros (cm). No a escala.

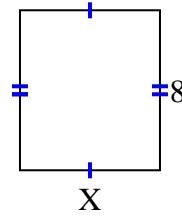
1) area = 18 cm^2



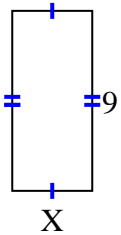
2) area = 6 cm^2



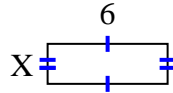
3) area = 56 cm^2



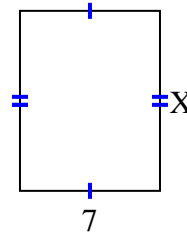
4) area = 36 cm^2



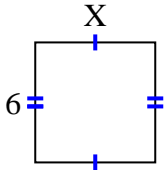
5) area = 12 cm^2



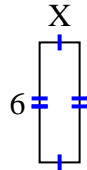
6) area = 63 cm^2



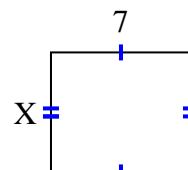
7) area = 36 cm^2



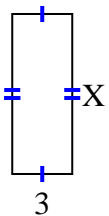
8) area = 12 cm^2



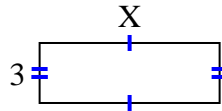
9) area = 42 cm^2



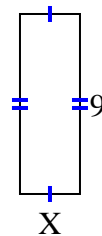
10) area = 24 cm^2



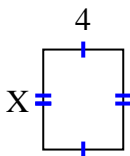
11) area = 27 cm^2



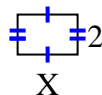
12) area = 27 cm^2



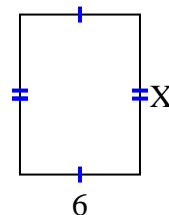
13) area = 20 cm^2



14) area = 6 cm^2



15) area = 48 cm^2

**Respuestas**1. 32. 23. 74. 45. 26. 97. 68. 29. 610. 811. 912. 313. 514. 315. 8