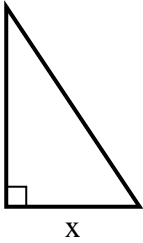


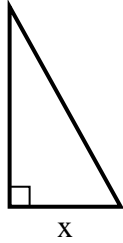


Encuentra el valor de X.

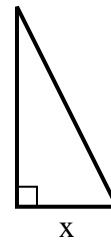
1) $\text{area} = 27 \text{ u}^2$



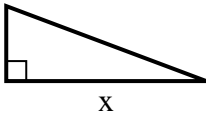
2) $\text{area} = 22.5 \text{ u}^2$



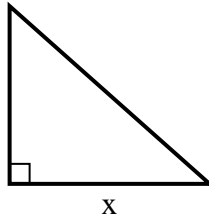
3) $\text{area} = 9 \text{ u}^2$



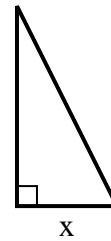
4) $\text{area} = 12 \text{ u}^2$



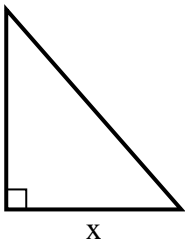
5) $\text{area} = 36 \text{ u}^2$



6) $\text{area} = 4 \text{ u}^2$



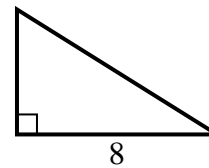
7) $\text{area} = 28 \text{ u}^2$



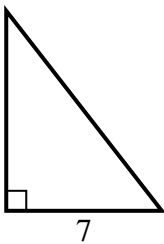
8) $\text{area} = 6 \text{ u}^2$



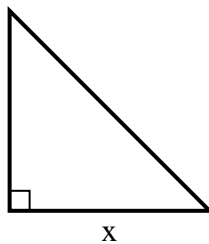
9) $\text{area} = 20 \text{ u}^2$



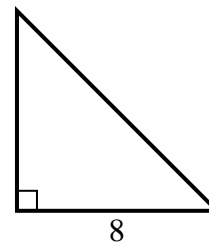
10) $\text{area} = 31.5 \text{ u}^2$



11) $\text{area} = 2 \text{ u}^2$



12) $\text{area} = 32 \text{ u}^2$



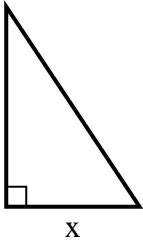
Respuestas

1. _____
2. _____
3. _____
4. _____
5. _____
6. _____
7. _____
8. _____
9. _____
10. _____
11. _____
12. _____

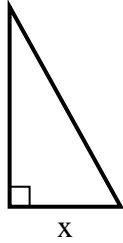


Encuentra el valor de X.

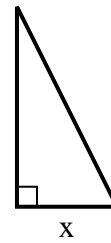
1) area = $27 u^2$



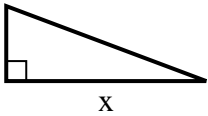
2) area = $22.5 u^2$



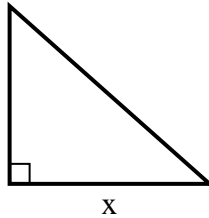
3) area = $9 u^2$



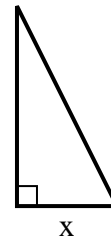
4) area = $12 u^2$



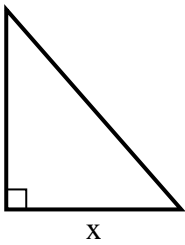
5) area = $36 u^2$



6) area = $4 u^2$



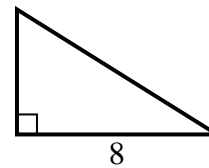
7) area = $28 u^2$



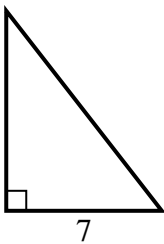
8) area = $6 u^2$



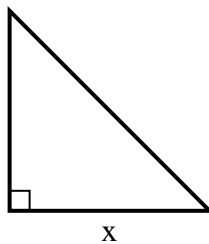
9) area = $20 u^2$



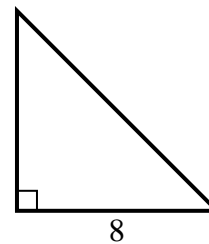
10) area = $31.5 u^2$



11) area = $2 u^2$



12) area = $32 u^2$



Respuestas

1. 6

2. 5

3. 3

4. 8

5. 9

6. 2

7. 7

8. 2

9. 5

10. 9

11. 2

12. 8