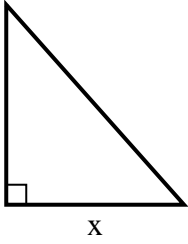




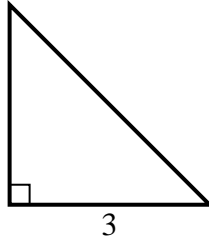


**Encuentra el valor de X.**

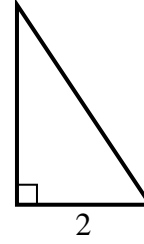
1) area =  $36 u^2$



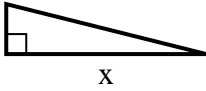
2) area =  $4.5 u^2$



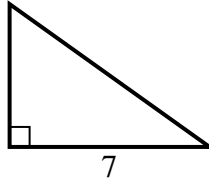
3) area =  $3 u^2$



4) area =  $8 u^2$



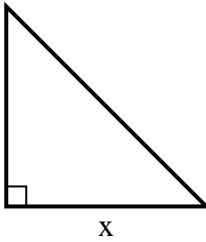
5) area =  $17.5 u^2$



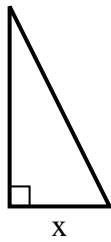
6) area =  $12 u^2$



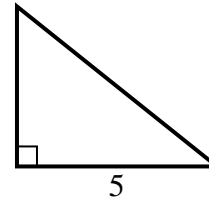
7) area =  $32 u^2$



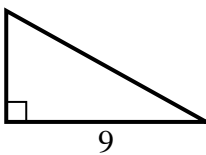
8) area =  $4 u^2$



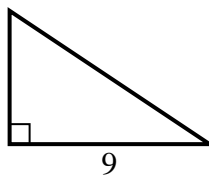
9) area =  $10 u^2$



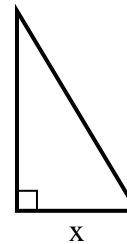
10) area =  $22.5 u^2$



11) area =  $27 u^2$



12) area =  $7.5 u^2$



**Respuestas**

1. 8

2. 3

3. 3

4. 8

5. 5

6. 8

7. 8

8. 2

9. 4

10. 5

11. 6

12. 3