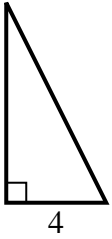


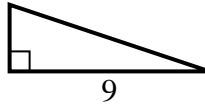


Encuentra el valor de X.

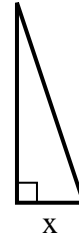
1) area = $16 u^2$



2) area = $13.5 u^2$



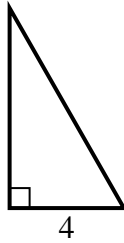
3) area = $6 u^2$



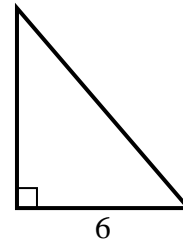
4) area = $8 u^2$



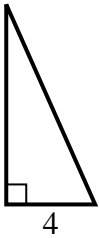
5) area = $14 u^2$



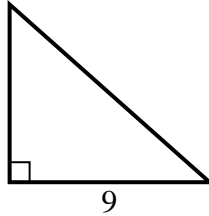
6) area = $21 u^2$



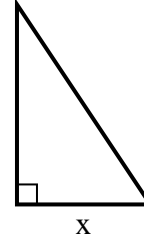
7) area = $18 u^2$



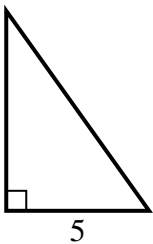
8) area = $36 u^2$



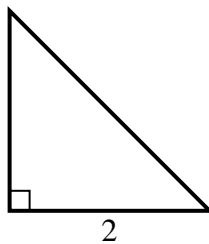
9) area = $27 u^2$



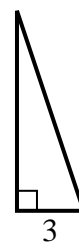
10) area = $17.5 u^2$



11) area = $2 u^2$



12) area = $13.5 u^2$

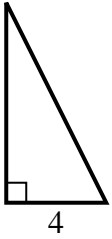


Respuestas

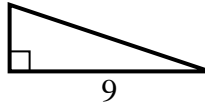
1. _____
2. _____
3. _____
4. _____
5. _____
6. _____
7. _____
8. _____
9. _____
10. _____
11. _____
12. _____

**Encuentra el valor de X.**

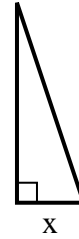
1) $\text{area} = 16 \text{ u}^2$



2) $\text{area} = 13.5 \text{ u}^2$



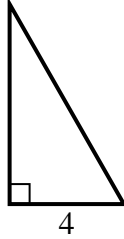
3) $\text{area} = 6 \text{ u}^2$



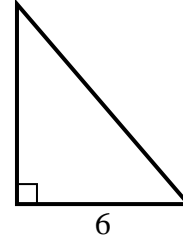
4) $\text{area} = 8 \text{ u}^2$



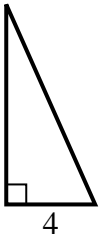
5) $\text{area} = 14 \text{ u}^2$



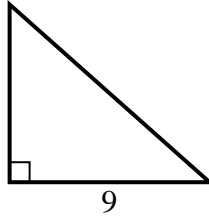
6) $\text{area} = 21 \text{ u}^2$



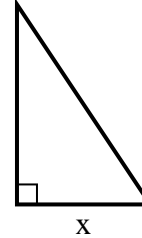
7) $\text{area} = 18 \text{ u}^2$



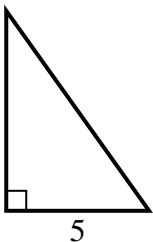
8) $\text{area} = 36 \text{ u}^2$



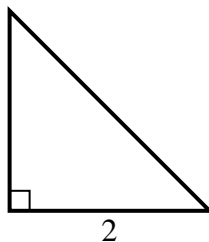
9) $\text{area} = 27 \text{ u}^2$



10) $\text{area} = 17.5 \text{ u}^2$



11) $\text{area} = 2 \text{ u}^2$



12) $\text{area} = 13.5 \text{ u}^2$

**Respuestas**1. 82. 33. 24. 25. 76. 77. 98. 89. 610. 711. 212. 9