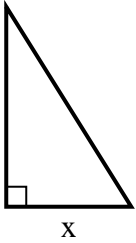


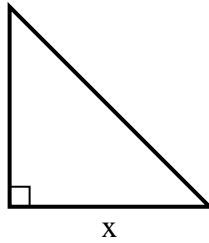


Encuentra el valor de X.

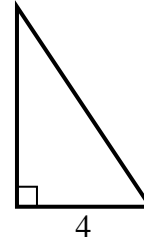
1) area = $20 u^2$



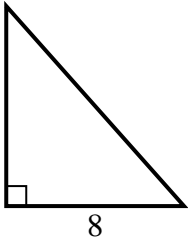
2) area = $32 u^2$



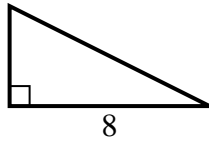
3) area = $12 u^2$



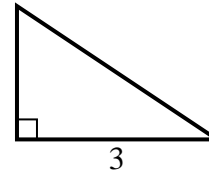
4) area = $36 u^2$



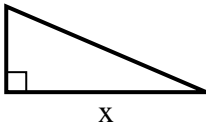
5) area = $16 u^2$



6) area = $3 u^2$



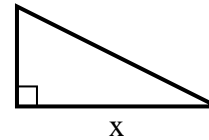
7) area = $10.5 u^2$



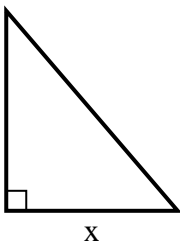
8) area = $18 u^2$



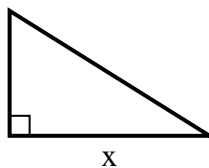
9) area = $4 u^2$



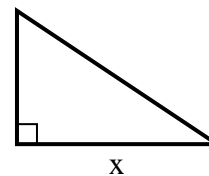
10) area = $21 u^2$



11) area = $20 u^2$



12) area = $12 u^2$



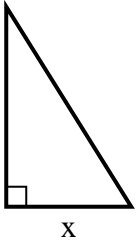
Respuestas

1. _____
2. _____
3. _____
4. _____
5. _____
6. _____
7. _____
8. _____
9. _____
10. _____
11. _____
12. _____

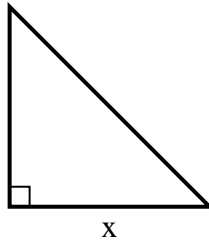


Encuentra el valor de X.

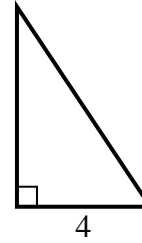
1) area = 20 u^2



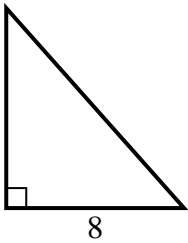
2) area = 32 u^2



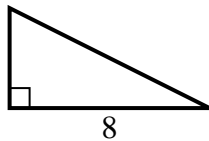
3) area = 12 u^2



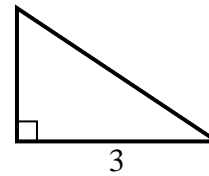
4) area = 36 u^2



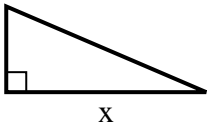
5) area = 16 u^2



6) area = 3 u^2



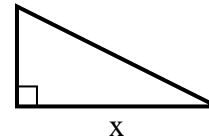
7) area = 10.5 u^2



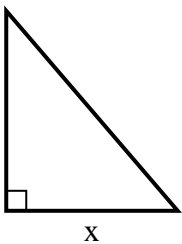
8) area = 18 u^2



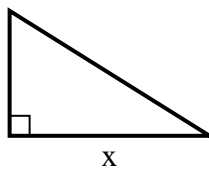
9) area = 4 u^2



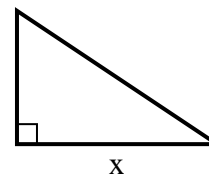
10) area = 21 u^2



11) area = 20 u^2



12) area = 12 u^2



Respuestas

1. 5

2. 8

3. 6

4. 9

5. 4

6. 2

7. 7

8. 9

9. 4

10. 6

11. 8

12. 6