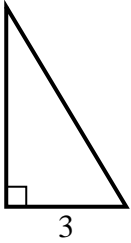


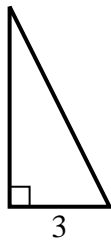


Encuentra el valor de X.

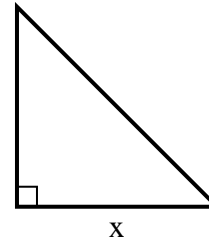
1) area = $7.5 u^2$



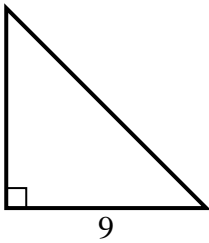
2) area = $9 u^2$



3) area = $32 u^2$



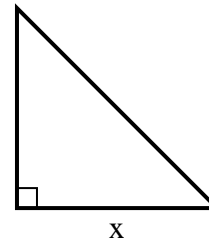
4) area = $40.5 u^2$



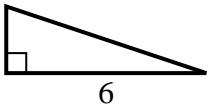
5) area = $9 u^2$



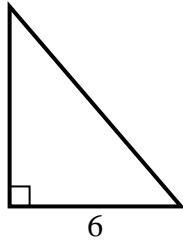
6) area = $24.5 u^2$



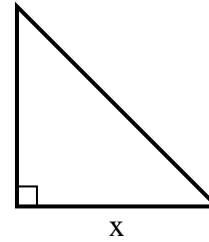
7) area = $6 u^2$



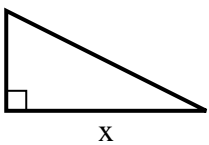
8) area = $21 u^2$



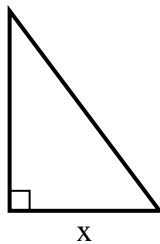
9) area = $18 u^2$



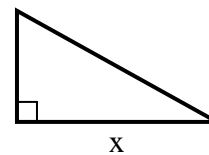
10) area = $16 u^2$



11) area = $6 u^2$



12) area = $22.5 u^2$



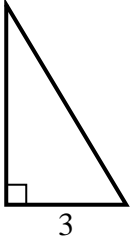
Respuestas

1. _____
2. _____
3. _____
4. _____
5. _____
6. _____
7. _____
8. _____
9. _____
10. _____
11. _____
12. _____

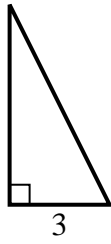


Encuentra el valor de X.

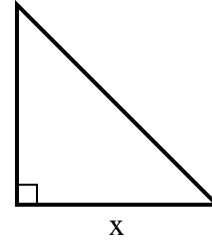
1) area = $7.5 u^2$



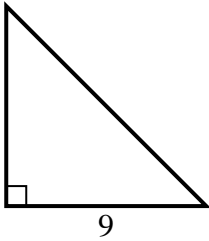
2) area = $9 u^2$



3) area = $32 u^2$



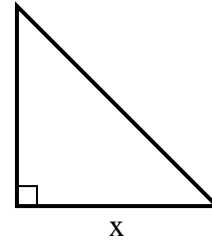
4) area = $40.5 u^2$



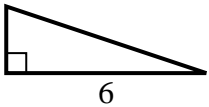
5) area = $9 u^2$



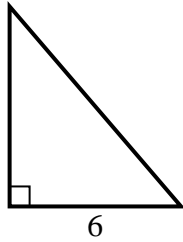
6) area = $24.5 u^2$



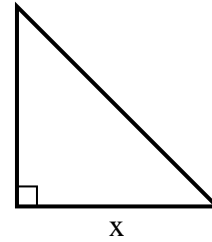
7) area = $6 u^2$



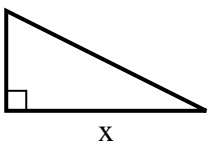
8) area = $21 u^2$



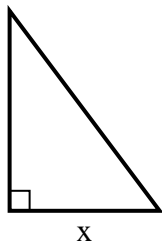
9) area = $18 u^2$



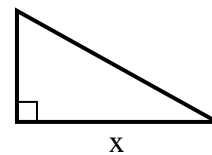
10) area = $16 u^2$



11) area = $6 u^2$



12) area = $22.5 u^2$



Respuestas

1. 5

2. 6

3. 8

4. 9

5. 9

6. 7

7. 2

8. 7

9. 6

10. 8

11. 3

12. 9