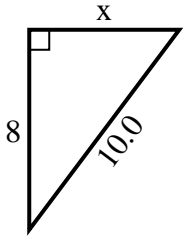




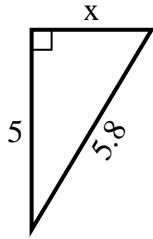
SPANISH_INSTRUCTIONS

Respuestas

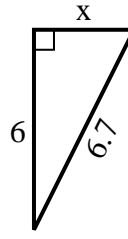
1) perímetro = 24 u



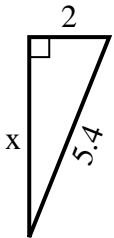
2) perímetro = 13.8 u



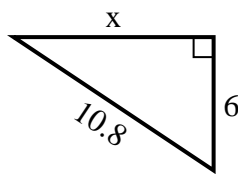
3) perímetro = 15.7 u



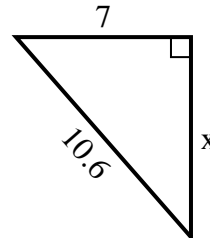
4) perímetro = 12.4 u



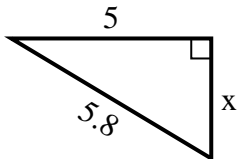
5) perímetro = 25.8 u



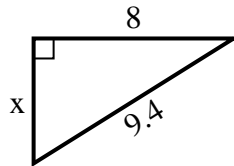
6) perímetro = 25.6 u



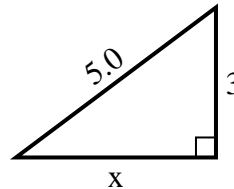
7) perímetro = 13.8 u



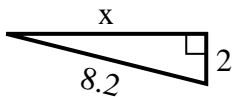
8) perímetro = 22.4 u



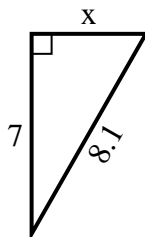
9) perímetro = 12 u



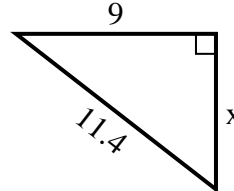
10) perímetro = 18.2 u



11) perímetro = 19.1 u



12) perímetro = 27.4 u



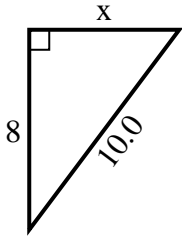
1. _____
2. _____
3. _____
4. _____
5. _____
6. _____
7. _____
8. _____
9. _____
10. _____
11. _____
12. _____



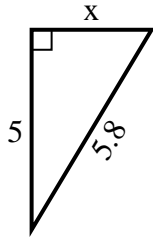
SPANISH_INSTRUCTIONS

Respuestas

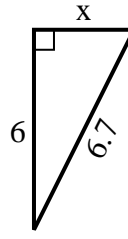
1) perímetro = 24 u



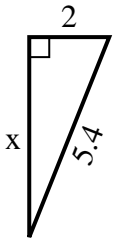
2) perímetro = 13.8 u



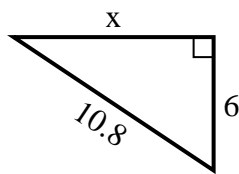
3) perímetro = 15.7 u



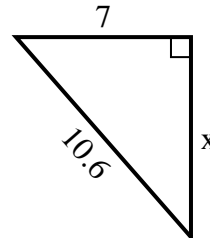
4) perímetro = 12.4 u



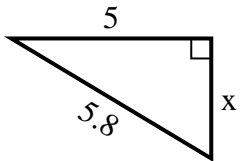
5) perímetro = 25.8 u



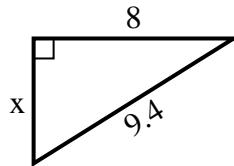
6) perímetro = 25.6 u



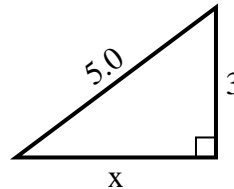
7) perímetro = 13.8 u



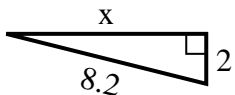
8) perímetro = 22.4 u



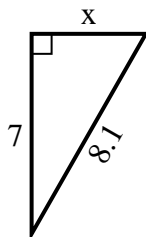
9) perímetro = 12 u



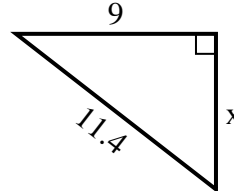
10) perímetro = 18.2 u



11) perímetro = 19.1 u



12) perímetro = 27.4 u



1. 6
2. 3
3. 3
4. 5
5. 9
6. 8
7. 3
8. 5
9. 4
10. 8
11. 4
12. 7