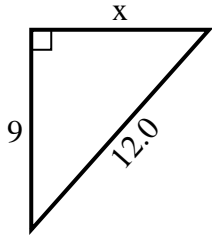




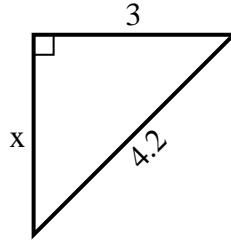
SPANISH_INSTRUCTIONS

Respuestas

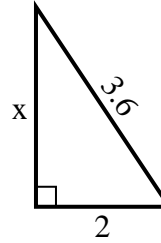
1) perímetro = 29 u



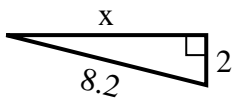
2) perímetro = 10.2 u



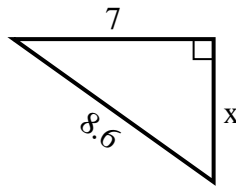
3) perímetro = 8.6 u



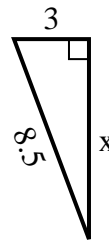
4) perímetro = 18.2 u



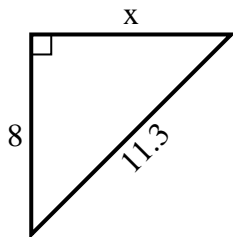
5) perímetro = 20.6 u



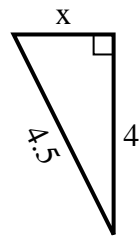
6) perímetro = 19.5 u



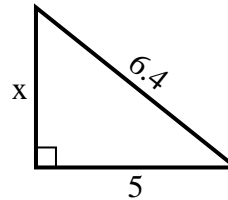
7) perímetro = 27.3 u



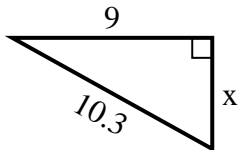
8) perímetro = 10.5 u



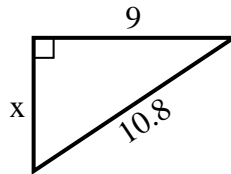
9) perímetro = 15.4 u



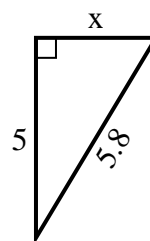
10) perímetro = 24.3 u



11) perímetro = 25.8 u



12) perímetro = 13.8 u



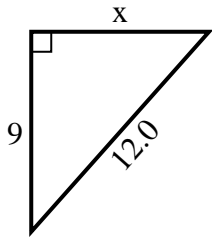
1. _____
2. _____
3. _____
4. _____
5. _____
6. _____
7. _____
8. _____
9. _____
10. _____
11. _____
12. _____



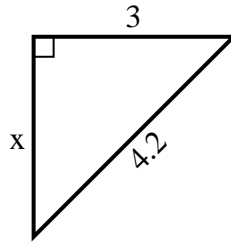
SPANISH_INSTRUCTIONS

Respuestas

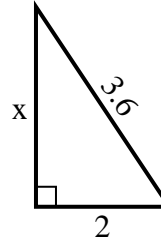
1) perímetro = 29 u



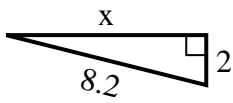
2) perímetro = 10.2 u



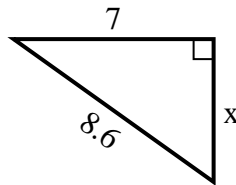
3) perímetro = 8.6 u



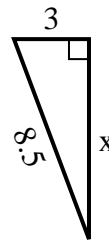
4) perímetro = 18.2 u



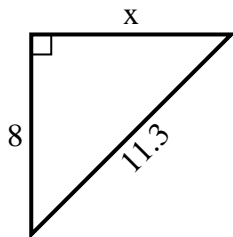
5) perímetro = 20.6 u



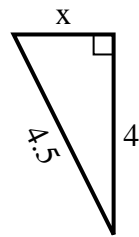
6) perímetro = 19.5 u



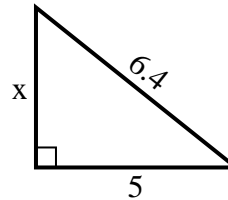
7) perímetro = 27.3 u



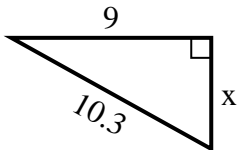
8) perímetro = 10.5 u



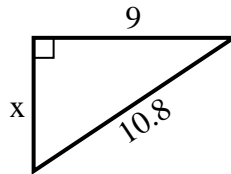
9) perímetro = 15.4 u



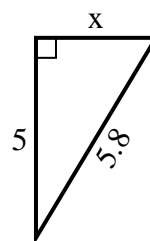
10) perímetro = 24.3 u



11) perímetro = 25.8 u



12) perímetro = 13.8 u



- 1. 8
- 2. 3
- 3. 3
- 4. 8
- 5. 5
- 6. 8
- 7. 8
- 8. 2
- 9. 4
- 10. 5
- 11. 6
- 12. 3