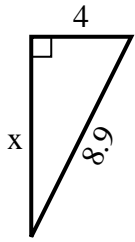




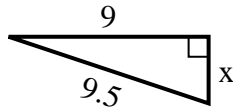
SPANISH_INSTRUCTIONS

Respuestas

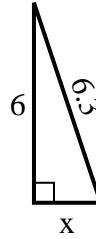
1) perímetro = 20.9 u



2) perímetro = 21.5 u



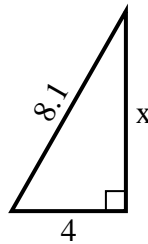
3) perímetro = 14.3 u



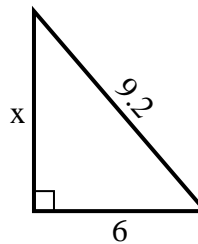
4) perímetro = 18.2 u



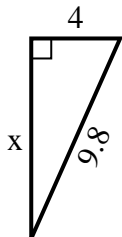
5) perímetro = 19.1 u



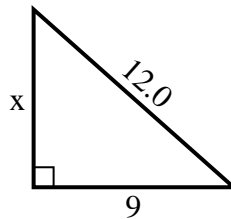
6) perímetro = 22.2 u



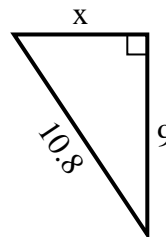
7) perímetro = 22.8 u



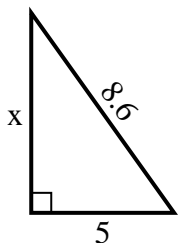
8) perímetro = 29 u



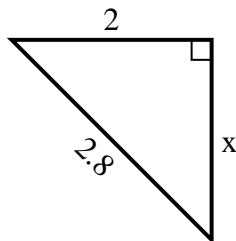
9) perímetro = 25.8 u



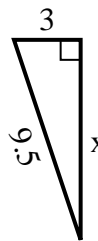
10) perímetro = 20.6 u



11) perímetro = 6.8 u



12) perímetro = 21.5 u



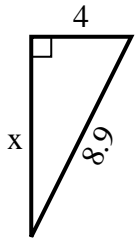
1. _____
2. _____
3. _____
4. _____
5. _____
6. _____
7. _____
8. _____
9. _____
10. _____
11. _____
12. _____



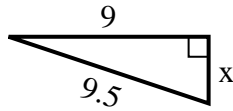
SPANISH_INSTRUCTIONS

Respuestas

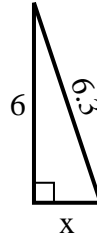
1) perímetro = 20.9 u



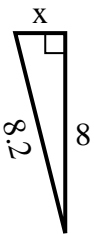
2) perímetro = 21.5 u



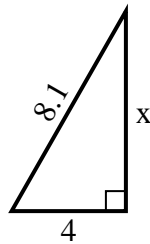
3) perímetro = 14.3 u



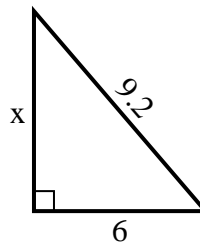
4) perímetro = 18.2 u



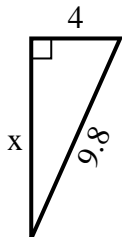
5) perímetro = 19.1 u



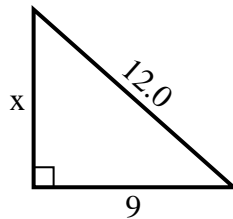
6) perímetro = 22.2 u



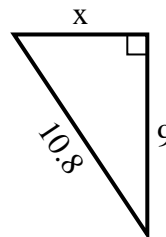
7) perímetro = 22.8 u



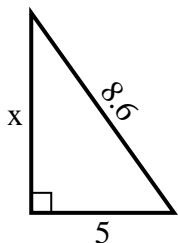
8) perímetro = 29 u



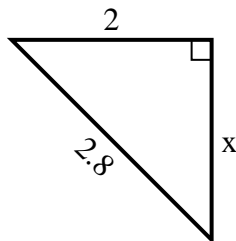
9) perímetro = 25.8 u



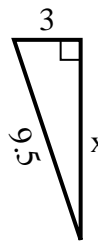
10) perímetro = 20.6 u



11) perímetro = 6.8 u



12) perímetro = 21.5 u



1. 8
2. 3
3. 2
4. 2
5. 7
6. 7
7. 9
8. 8
9. 6
10. 7
11. 2
12. 9