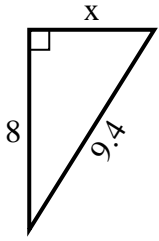




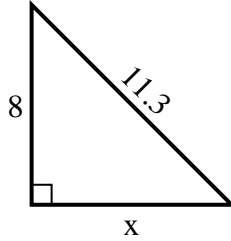
**SPANISH\_INSTRUCTIONS**

**Respuestas**

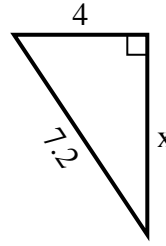
1) perímetro = 22.4 u



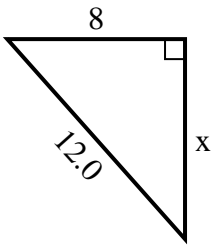
2) perímetro = 27.3 u



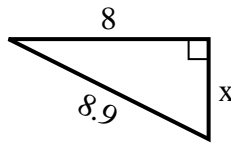
3) perímetro = 17.2 u



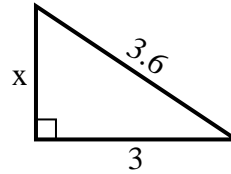
4) perímetro = 29 u



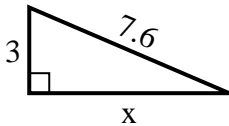
5) perímetro = 20.9 u



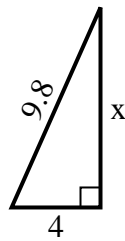
6) perímetro = 8.6 u



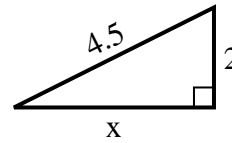
7) perímetro = 17.6 u



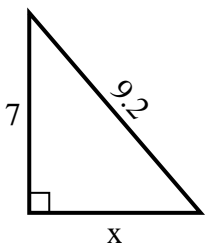
8) perímetro = 22.8 u



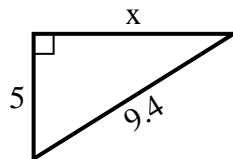
9) perímetro = 10.5 u



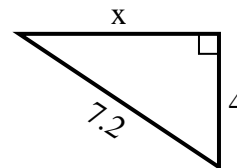
10) perímetro = 22.2 u



11) perímetro = 22.4 u



12) perímetro = 17.2 u



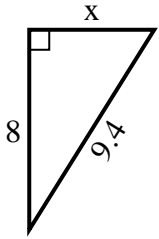
1. \_\_\_\_\_
2. \_\_\_\_\_
3. \_\_\_\_\_
4. \_\_\_\_\_
5. \_\_\_\_\_
6. \_\_\_\_\_
7. \_\_\_\_\_
8. \_\_\_\_\_
9. \_\_\_\_\_
10. \_\_\_\_\_
11. \_\_\_\_\_
12. \_\_\_\_\_



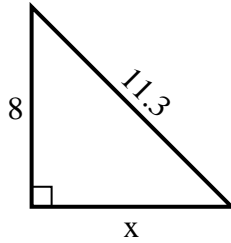
**SPANISH\_INSTRUCTIONS**

**Respuestas**

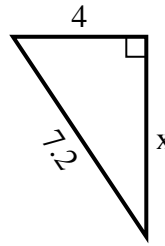
1) perímetro = 22.4 u



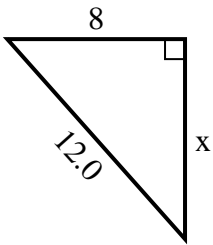
2) perímetro = 27.3 u



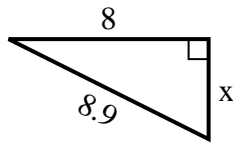
3) perímetro = 17.2 u



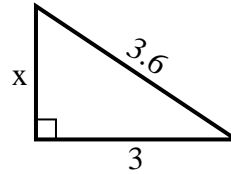
4) perímetro = 29 u



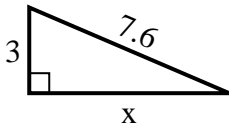
5) perímetro = 20.9 u



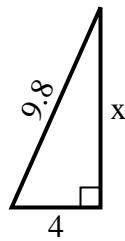
6) perímetro = 8.6 u



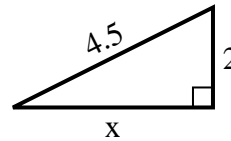
7) perímetro = 17.6 u



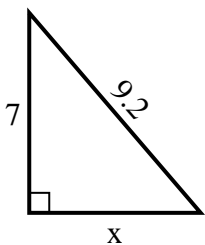
8) perímetro = 22.8 u



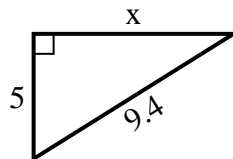
9) perímetro = 10.5 u



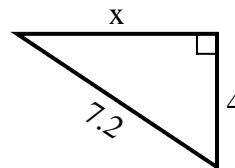
10) perímetro = 22.2 u



11) perímetro = 22.4 u



12) perímetro = 17.2 u



1. 5
2. 8
3. 6
4. 9
5. 4
6. 2
7. 7
8. 9
9. 4
10. 6
11. 8
12. 6