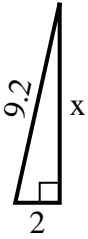




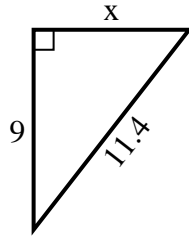
**SPANISH\_INSTRUCTIONS**

**Respuestas**

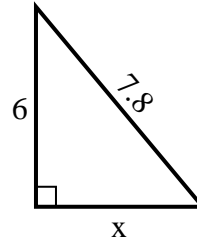
1) perímetro = 20.2 u



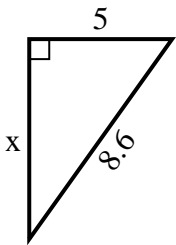
2) perímetro = 27.4 u



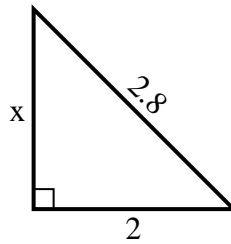
3) perímetro = 18.8 u



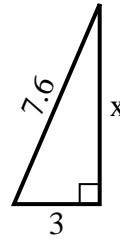
4) perímetro = 20.6 u



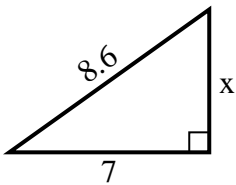
5) perímetro = 6.8 u



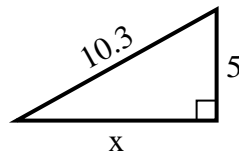
6) perímetro = 17.6 u



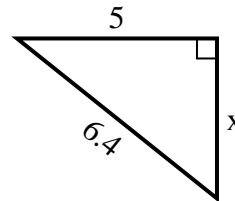
7) perímetro = 20.6 u



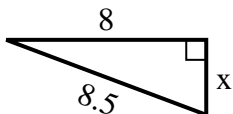
8) perímetro = 24.3 u



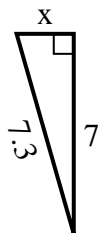
9) perímetro = 15.4 u



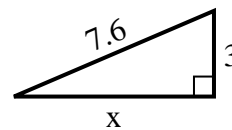
10) perímetro = 19.5 u



11) perímetro = 16.3 u



12) perímetro = 17.6 u



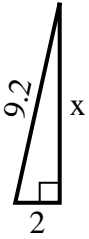
1. \_\_\_\_\_
2. \_\_\_\_\_
3. \_\_\_\_\_
4. \_\_\_\_\_
5. \_\_\_\_\_
6. \_\_\_\_\_
7. \_\_\_\_\_
8. \_\_\_\_\_
9. \_\_\_\_\_
10. \_\_\_\_\_
11. \_\_\_\_\_
12. \_\_\_\_\_



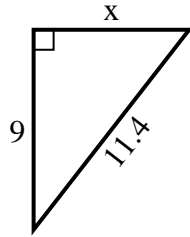
**SPANISH\_INSTRUCTIONS**

**Respuestas**

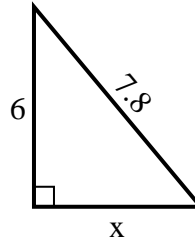
1) perímetro = 20.2 u



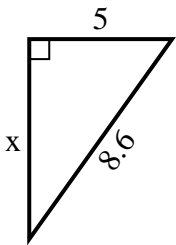
2) perímetro = 27.4 u



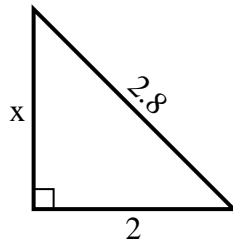
3) perímetro = 18.8 u



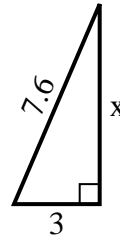
4) perímetro = 20.6 u



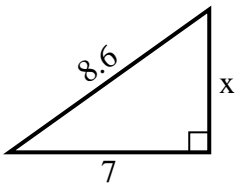
5) perímetro = 6.8 u



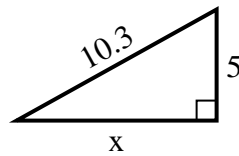
6) perímetro = 17.6 u



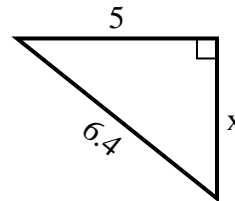
7) perímetro = 20.6 u



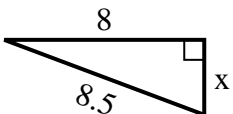
8) perímetro = 24.3 u



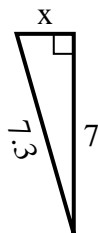
9) perímetro = 15.4 u



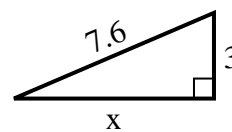
10) perímetro = 19.5 u



11) perímetro = 16.3 u



12) perímetro = 17.6 u



1. 9

2. 7

3. 5

4. 7

5. 2

6. 7

7. 5

8. 9

9. 4

10. 3

11. 2

12. 7