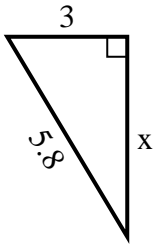




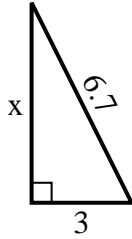
**SPANISH\_INSTRUCTIONS**

**Respuestas**

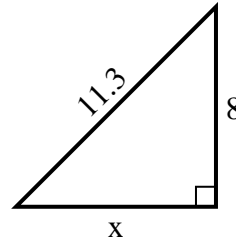
1) perímetro = 13.8 u



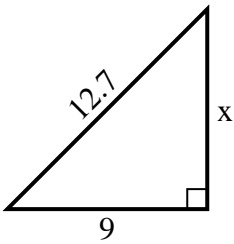
2) perímetro = 15.7 u



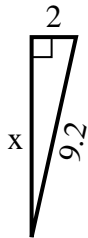
3) perímetro = 27.3 u



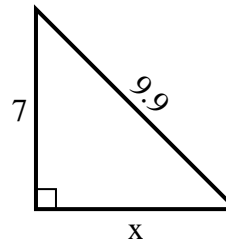
4) perímetro = 30.7 u



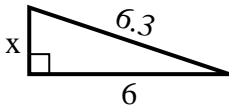
5) perímetro = 20.2 u



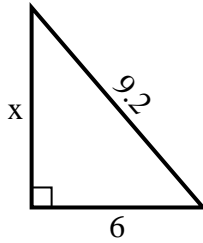
6) perímetro = 23.9 u



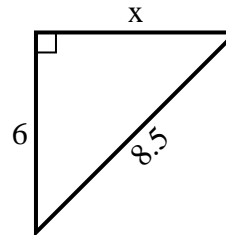
7) perímetro = 14.3 u



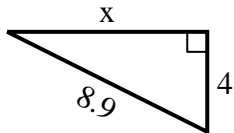
8) perímetro = 22.2 u



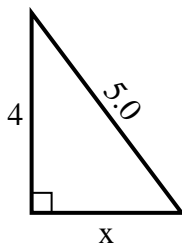
9) perímetro = 20.5 u



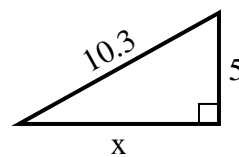
10) perímetro = 20.9 u



11) perímetro = 12 u



12) perímetro = 24.3 u



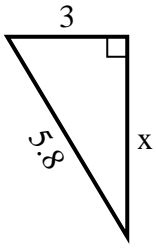
1. \_\_\_\_\_
2. \_\_\_\_\_
3. \_\_\_\_\_
4. \_\_\_\_\_
5. \_\_\_\_\_
6. \_\_\_\_\_
7. \_\_\_\_\_
8. \_\_\_\_\_
9. \_\_\_\_\_
10. \_\_\_\_\_
11. \_\_\_\_\_
12. \_\_\_\_\_



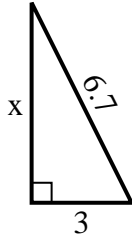
**SPANISH\_INSTRUCTIONS**

**Respuestas**

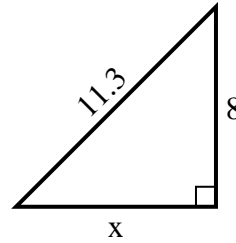
1) perímetro = 13.8 u



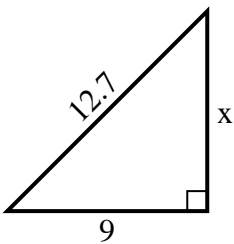
2) perímetro = 15.7 u



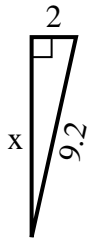
3) perímetro = 27.3 u



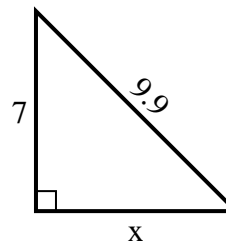
4) perímetro = 30.7 u



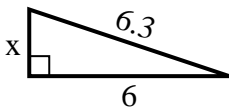
5) perímetro = 20.2 u



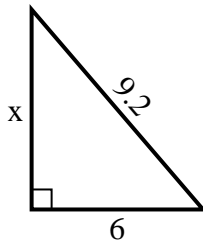
6) perímetro = 23.9 u



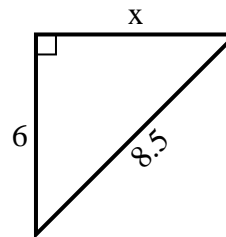
7) perímetro = 14.3 u



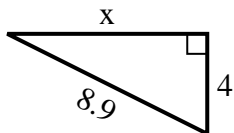
8) perímetro = 22.2 u



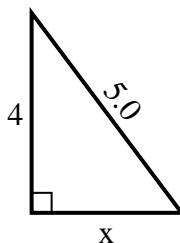
9) perímetro = 20.5 u



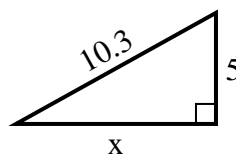
10) perímetro = 20.9 u



11) perímetro = 12 u



12) perímetro = 24.3 u



1. 5
2. 6
3. 8
4. 9
5. 9
6. 7
7. 2
8. 7
9. 6
10. 8
11. 3
12. 9