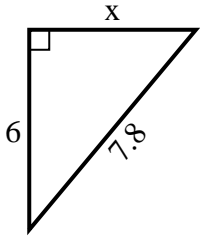




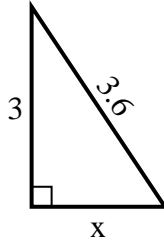
**SPANISH\_INSTRUCTIONS**

**Respuestas**

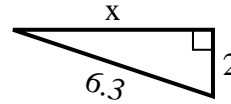
1) perímetro = 18.8 u



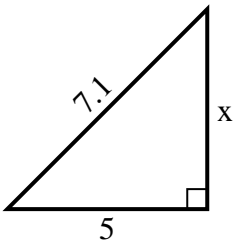
2) perímetro = 8.6 u



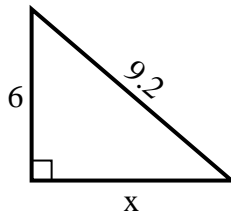
3) perímetro = 14.3 u



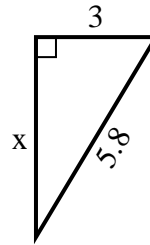
4) perímetro = 17.1 u



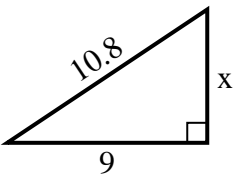
5) perímetro = 22.2 u



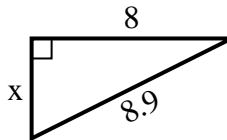
6) perímetro = 13.8 u



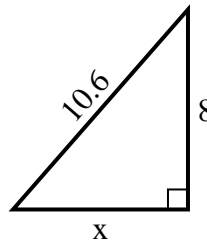
7) perímetro = 25.8 u



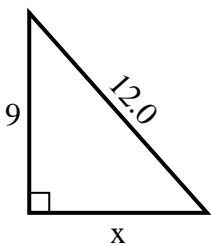
8) perímetro = 20.9 u



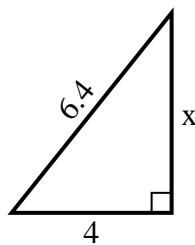
9) perímetro = 25.6 u



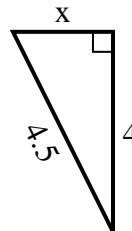
10) perímetro = 29 u



11) perímetro = 15.4 u



12) perímetro = 10.5 u



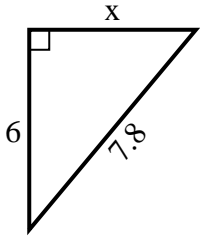
1. \_\_\_\_\_
2. \_\_\_\_\_
3. \_\_\_\_\_
4. \_\_\_\_\_
5. \_\_\_\_\_
6. \_\_\_\_\_
7. \_\_\_\_\_
8. \_\_\_\_\_
9. \_\_\_\_\_
10. \_\_\_\_\_
11. \_\_\_\_\_
12. \_\_\_\_\_



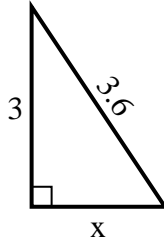
**SPANISH\_INSTRUCTIONS**

**Respuestas**

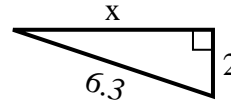
1) perímetro = 18.8 u



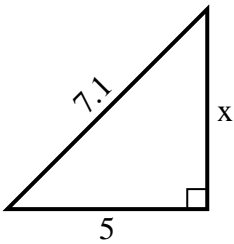
2) perímetro = 8.6 u



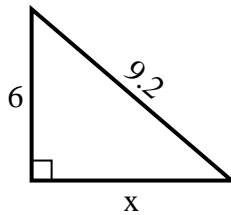
3) perímetro = 14.3 u



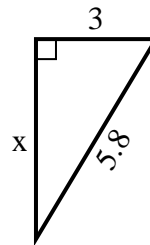
4) perímetro = 17.1 u



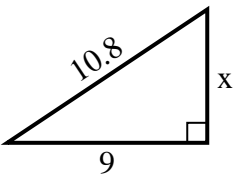
5) perímetro = 22.2 u



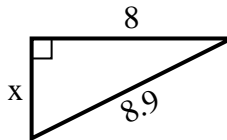
6) perímetro = 13.8 u



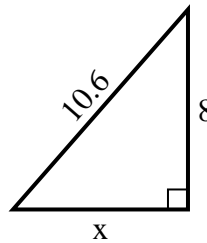
7) perímetro = 25.8 u



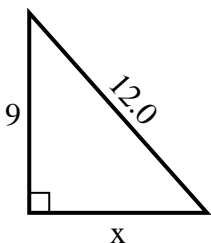
8) perímetro = 20.9 u



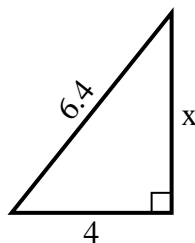
9) perímetro = 25.6 u



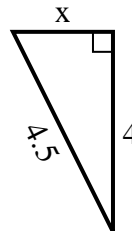
10) perímetro = 29 u



11) perímetro = 15.4 u



12) perímetro = 10.5 u



1. 5
2. 2
3. 6
4. 5
5. 7
6. 5
7. 6
8. 4
9. 7
10. 8
11. 5
12. 2