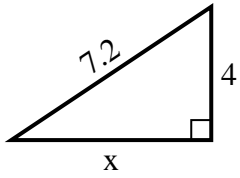




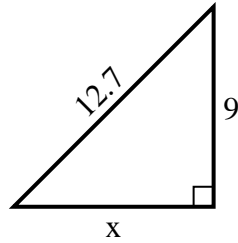
SPANISH_INSTRUCTIONS

Respuestas

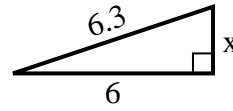
1) perímetro = 17.2 u



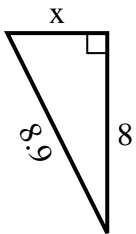
2) perímetro = 30.7 u



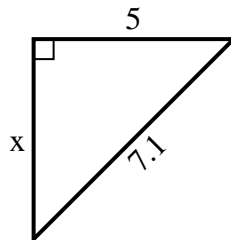
3) perímetro = 14.3 u



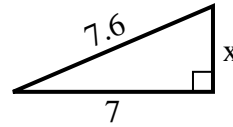
4) perímetro = 20.9 u



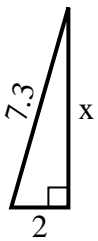
5) perímetro = 17.1 u



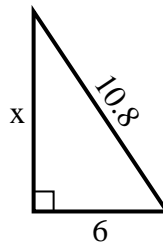
6) perímetro = 17.6 u



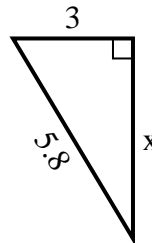
7) perímetro = 16.3 u



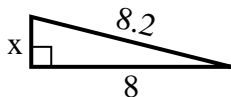
8) perímetro = 25.8 u



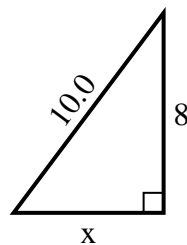
9) perímetro = 13.8 u



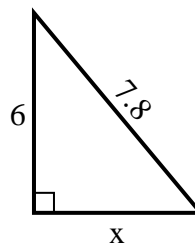
10) perímetro = 18.2 u



11) perímetro = 24 u



12) perímetro = 18.8 u



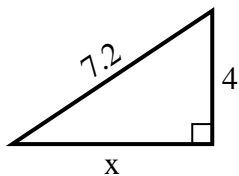
1. _____
2. _____
3. _____
4. _____
5. _____
6. _____
7. _____
8. _____
9. _____
10. _____
11. _____
12. _____



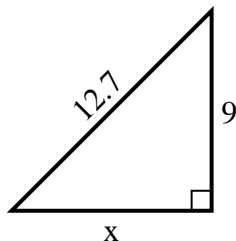
SPANISH_INSTRUCTIONS

Respuestas

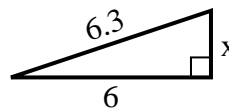
1) perímetro = 17.2 u



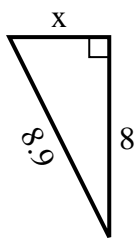
2) perímetro = 30.7 u



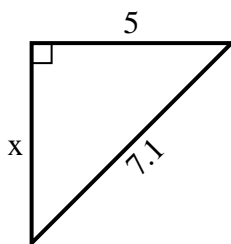
3) perímetro = 14.3 u



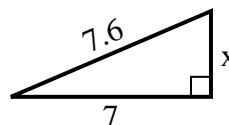
4) perímetro = 20.9 u



5) perímetro = 17.1 u



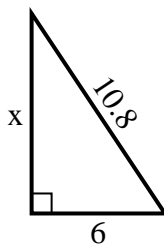
6) perímetro = 17.6 u



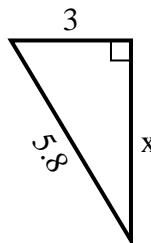
7) perímetro = 16.3 u



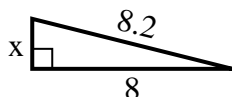
8) perímetro = 25.8 u



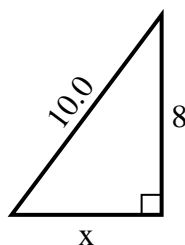
9) perímetro = 13.8 u



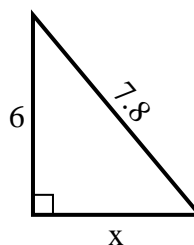
10) perímetro = 18.2 u



11) perímetro = 24 u



12) perímetro = 18.8 u



1. 6

2. 9

3. 2

4. 4

5. 5

6. 3

7. 7

8. 9

9. 5

10. 2

11. 6

12. 5