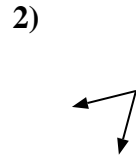
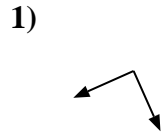
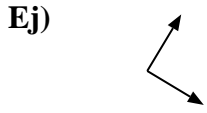




Determina si el ángulo mostrado es 'mayor', 'menor' o 'igual' a 90°.

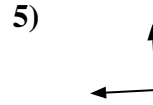
**Respuestas**



Ej. igual

1. \_\_\_\_\_

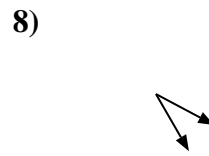
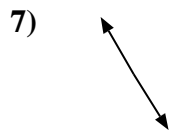
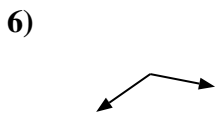
2. \_\_\_\_\_



3. \_\_\_\_\_

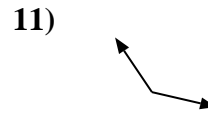
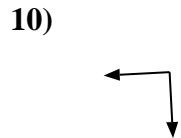
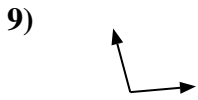
4. \_\_\_\_\_

5. \_\_\_\_\_



6. \_\_\_\_\_

7. \_\_\_\_\_

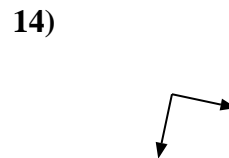
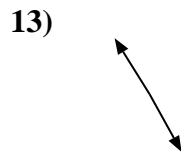


8. \_\_\_\_\_

9. \_\_\_\_\_

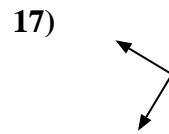
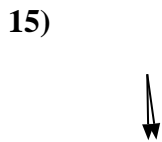
10. \_\_\_\_\_

11. \_\_\_\_\_



12. \_\_\_\_\_

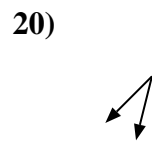
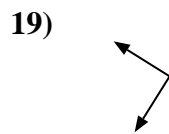
13. \_\_\_\_\_



14. \_\_\_\_\_

15. \_\_\_\_\_

16. \_\_\_\_\_



17. \_\_\_\_\_

18. \_\_\_\_\_

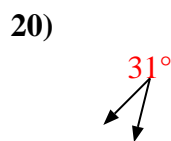
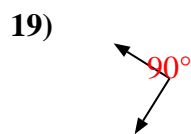
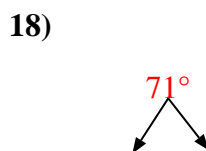
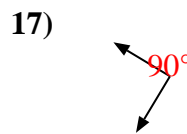
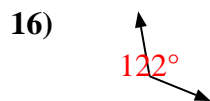
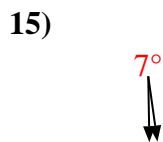
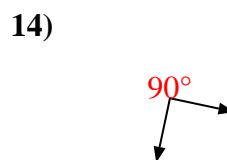
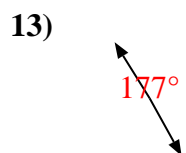
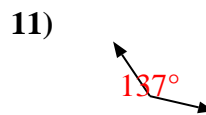
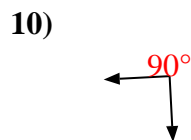
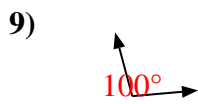
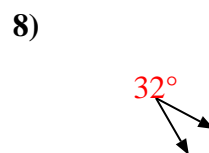
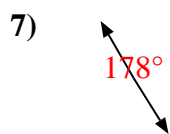
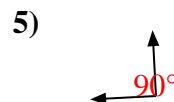
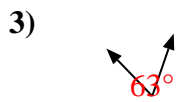
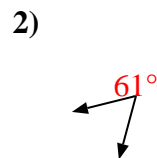
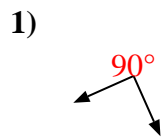
19. \_\_\_\_\_

20. \_\_\_\_\_

1-10	95	90	85	80	75	70	65	60	55	50
11-20	45	40	35	30	25	20	15	10	5	0



Determina si el ángulo mostrado es 'mayor', 'menor' o 'igual' a  $90^\circ$ .



**Respuestas**

- Ej. igual
1. igual
2. menor
3. menor
4. igual
5. igual
6. mayor
7. mayor
8. menor
9. mayor
10. igual
11. mayor
12. menor
13. mayor
14. igual
15. menor
16. mayor
17. igual
18. menor
19. igual
20. menor