



Determina si el ángulo mostrado es 'mayor', 'menor' o 'igual' a 90°.

Respuestas

Ej)



1)



2)



Ej. **menor**

3)



4)

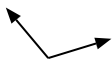


5)



1. _____

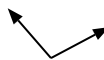
6)



7)

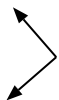


8)



2. _____

9)



10)



11)



3. _____

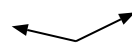
12)



13)



14)



4. _____

15)



16)



17)



5. _____

18)



19)



20)



6. _____

7. _____

8. _____

9. _____

10. _____

11. _____

12. _____

13. _____

14. _____

15. _____

16. _____

17. _____

18. _____

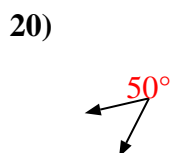
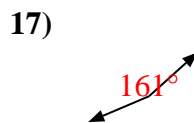
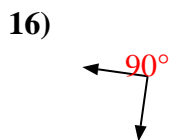
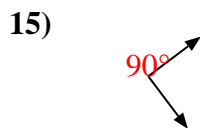
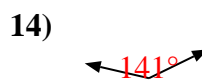
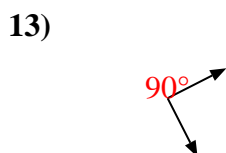
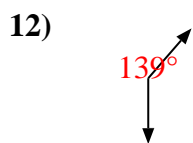
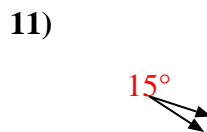
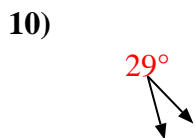
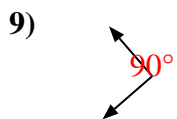
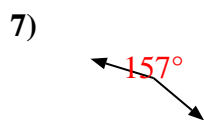
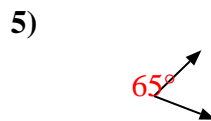
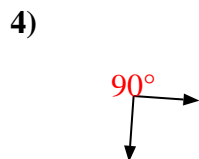
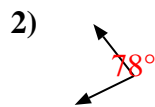
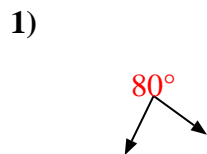
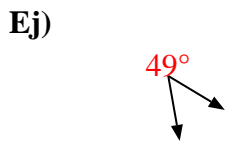
19. _____

20. _____

20. _____



Determina si el ángulo mostrado es 'mayor', 'menor' o 'igual' a 90° .



Respuestas

Ej. menor

1. menor

2. menor

3. mayor

4. igual

5. menor

6. mayor

7. mayor

8. mayor

9. igual

10. menor

11. menor

12. mayor

13. igual

14. mayor

15. igual

16. igual

17. mayor

18. igual

19. igual

20. menor