




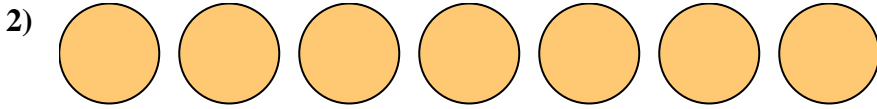
Nombre: _____

Escribe la cantidad sombreada como una fracción.


Respuestas



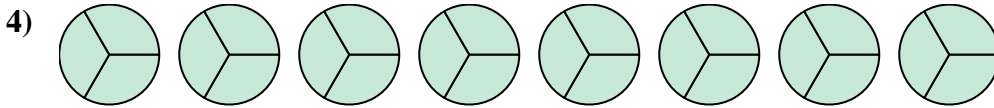
1. _____



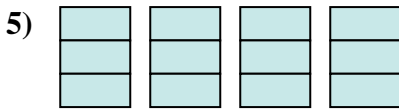
2. _____



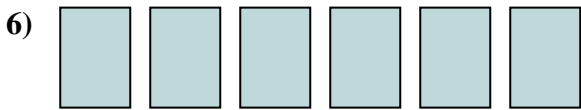
3. _____



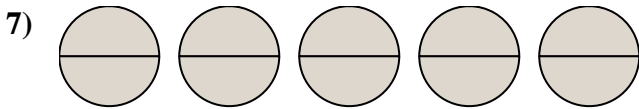
4. _____



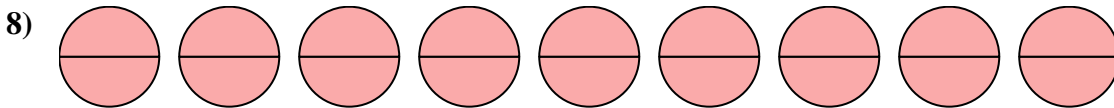
5. _____




6. _____



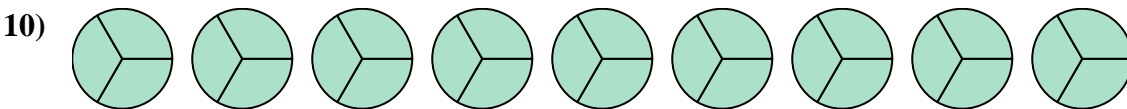
7. _____



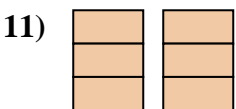
8. _____



9. _____



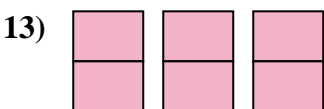
10. _____



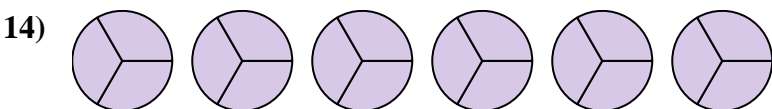
11. _____



12. _____



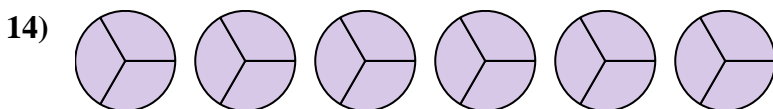
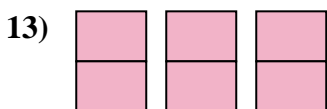
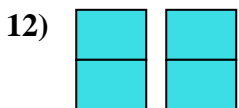
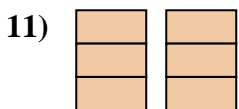
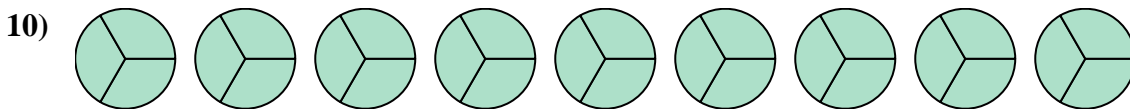

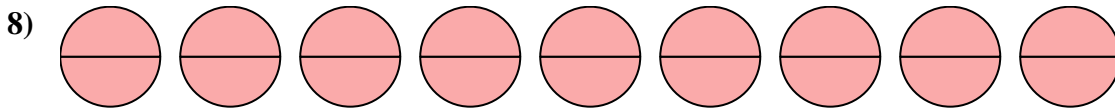
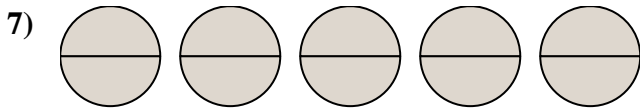
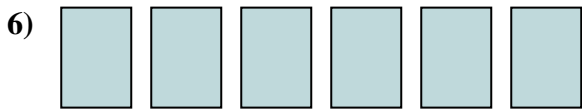
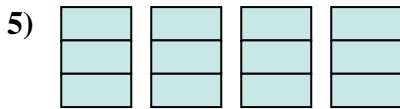
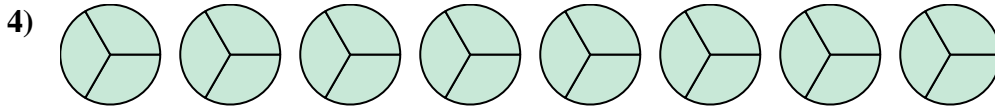

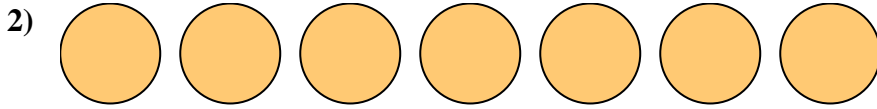

13. _____



14. _____



Escribe la cantidad sombreada como una fracción.

**Respuestas**

1. $\frac{12}{2}$

2. $\frac{7}{1}$

3. $\frac{4}{1}$

4. $\frac{24}{3}$

5. $\frac{12}{3}$

6. $\frac{6}{1}$

7. $\frac{10}{2}$

8. $\frac{18}{2}$

9. $\frac{3}{1}$

10. $\frac{27}{3}$

11. $\frac{6}{3}$

12. $\frac{4}{2}$

13. $\frac{6}{2}$

14. $\frac{18}{3}$