

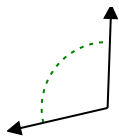


Determina si el ángulo mostrado es agudo, obtuso, recto o llano.

Ej)



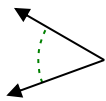
1)



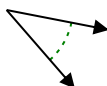
2)



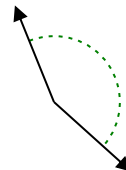
3)



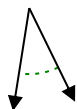
4)



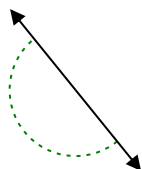
5)



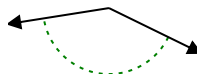
6)



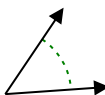
7)



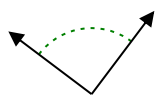
8)



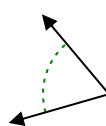
9)



10)



11)



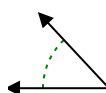
12)



13)



14)



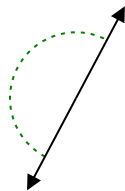
15)



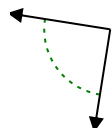
16)



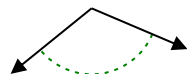
17)



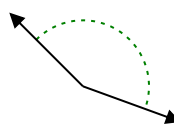
18)



19)



20)



Respuestas

Ej. **derecho**

1. _____

2. _____

3. _____

4. _____

5. _____

6. _____

7. _____

8. _____

9. _____

10. _____

11. _____

12. _____

13. _____

14. _____

15. _____

16. _____

17. _____

18. _____

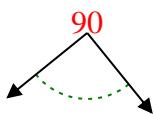
19. _____

20. _____

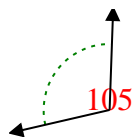


Determina si el ángulo mostrado es agudo, obtuso, recto o llano.

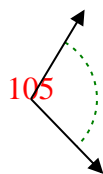
Ej)



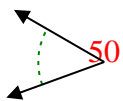
1)



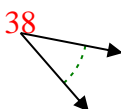
2)



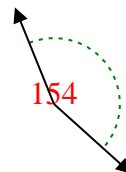
3)



4)



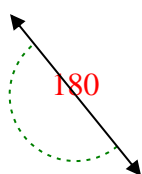
5)



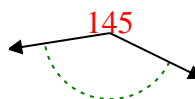
6)



7)



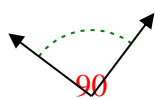
8)



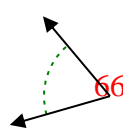
9)



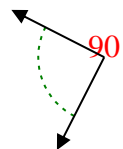
10)



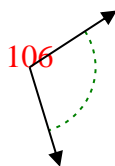
11)



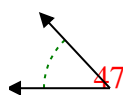
12)



13)



14)



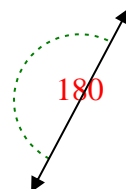
15)



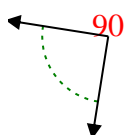
16)



17)



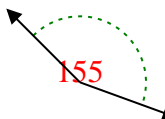
18)



19)



20)



Respuestas

- Ej. derecho
- 1. obtuso
- 2. obtuso
- 3. agudo
- 4. agudo
- 5. obtuso
- 6. agudo
- 7. recto
- 8. obtuso
- 9. agudo
- 10. derecho
- 11. agudo
- 12. derecho
- 13. obtuso
- 14. agudo
- 15. agudo
- 16. agudo
- 17. recto
- 18. derecho
- 19. obtuso
- 20. obtuso