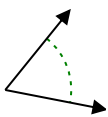




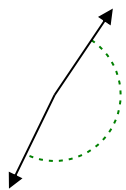
Determina si el ángulo mostrado es agudo, obtuso, recto o llano.

Respuestas

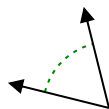
Ej)



1)



2)

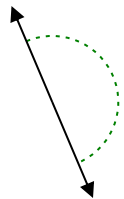


Ej. agudo

1. _____

2. _____

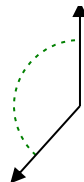
3)



4)



5)

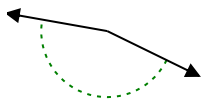


3. _____

4. _____

5. _____

6)



7)



8)

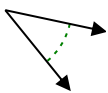


6. _____

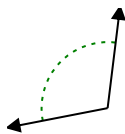
7. _____

8. _____

9)



10)



11)



9. _____

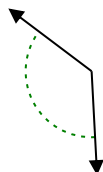
10. _____

11. _____

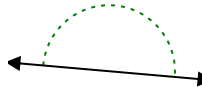
12)



13)



14)

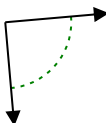


12. _____

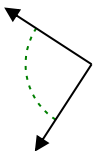
13. _____

14. _____

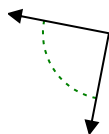
15)



16)



17)

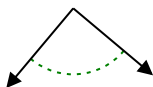


15. _____

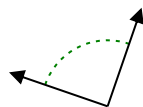
16. _____

17. _____

18)



19)



20)



18. _____

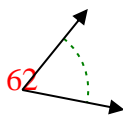
19. _____

20. _____

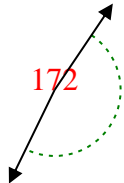


Determina si el ángulo mostrado es agudo, obtuso, recto o llano.

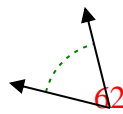
Ej)



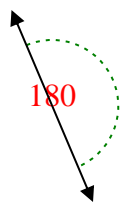
1)



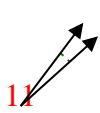
2)



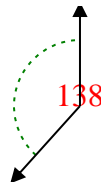
3)



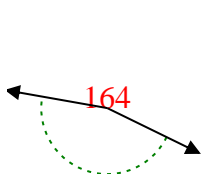
4)



5)



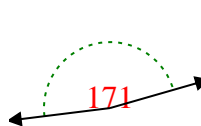
6)



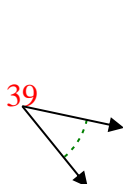
7)



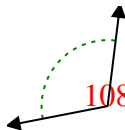
8)



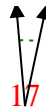
9)



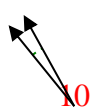
10)



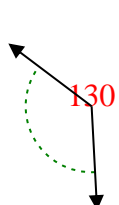
11)



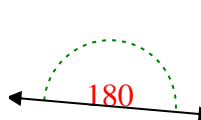
12)



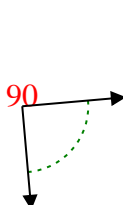
13)



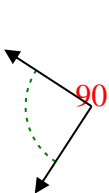
14)



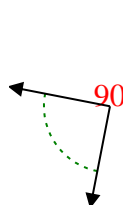
15)



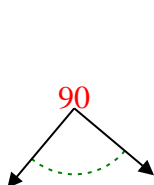
16)



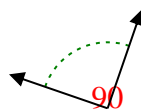
17)



18)



19)



20)



Respuestas

Ej. **agudo**

1. **obtuso**

2. **agudo**

3. **recto**

4. **agudo**

5. **obtuso**

6. **obtuso**

7. **obtuso**

8. **obtuso**

9. **agudo**

10. **obtuso**

11. **agudo**

12. **agudo**

13. **obtuso**

14. **recto**

15. **derecho**

16. **derecho**

17. **derecho**

18. **derecho**

19. **derecho**

20. **agudo**