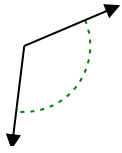




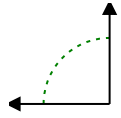
Determina si el ángulo mostrado es agudo, obtuso, recto o llano.

Respuestas

Ej)



1)



2)

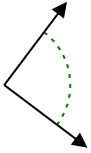


Ej. obtuso

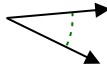
1. _____

2. _____

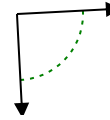
3)



4)



5)



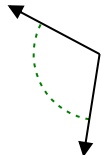
3. _____

4. _____

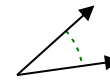
6)



7)



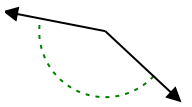
8)



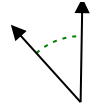
5. _____

6. _____

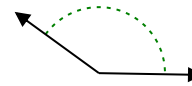
9)



10)



11)



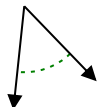
7. _____

8. _____

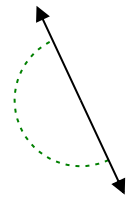
9. _____

10. _____

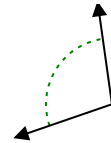
12)



13)



14)

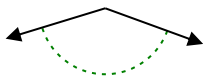


11. _____

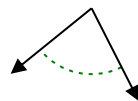
12. _____

13. _____

15)



16)



17)

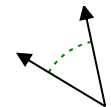


14. _____

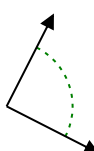
15. _____

16. _____

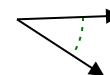
18)



19)



20)



17. _____

18. _____

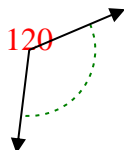
19. _____

20. _____

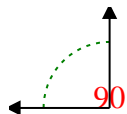


Determina si el ángulo mostrado es agudo, obtuso, recto o llano.

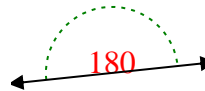
Ej)



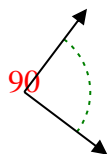
1)



2)



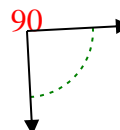
3)



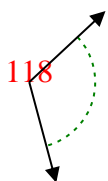
4)



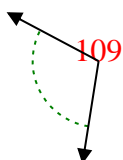
5)



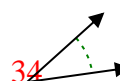
6)



7)



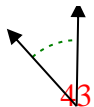
8)



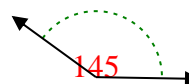
9)



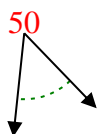
10)



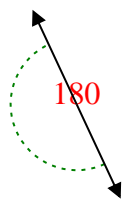
11)



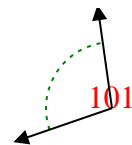
12)



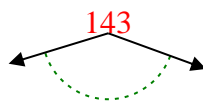
13)



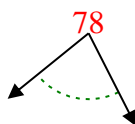
14)



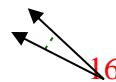
15)



16)



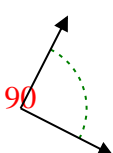
17)



18)



19)



20)



Respuestas

Ej. obtuso

1. derecho

2. recto

3. derecho

4. agudo

5. derecho

6. obtuso

7. obtuso

8. agudo

9. obtuso

10. agudo

11. obtuso

12. agudo

13. recto

14. obtuso

15. obtuso

16. agudo

17. agudo

18. agudo

19. derecho

20. agudo