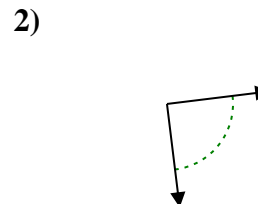
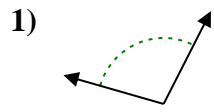
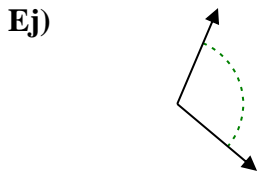




Determina si el ángulo mostrado es agudo, obtuso, recto o llano.

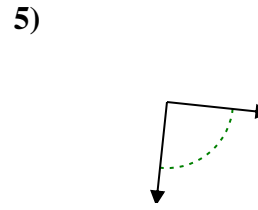
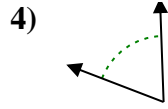
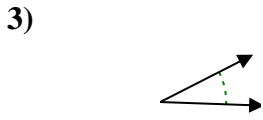
Respuestas



Ej. obtuso

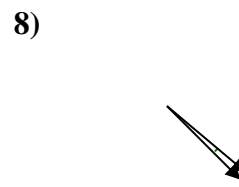
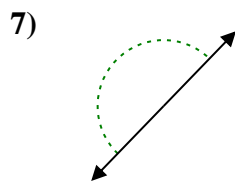
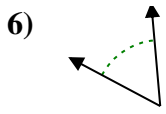
1. _____

2. _____



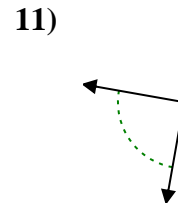
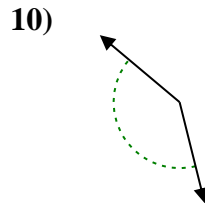
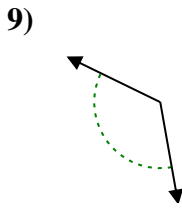
3. _____

4. _____



5. _____

6. _____

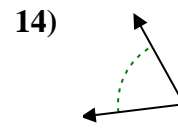
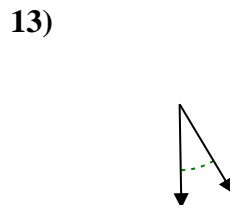
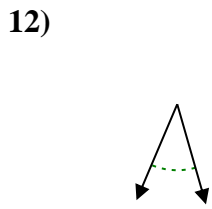


7. _____

8. _____

9. _____

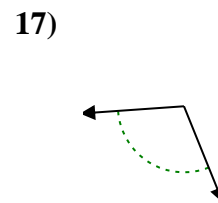
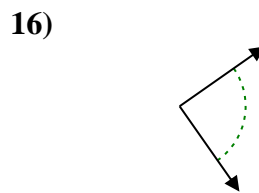
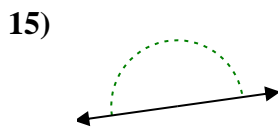
10. _____



11. _____

12. _____

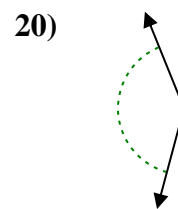
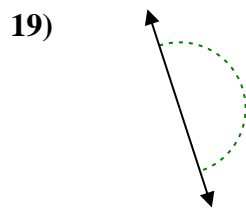
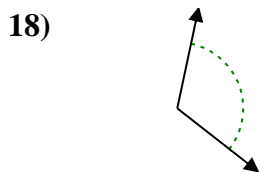
13. _____



14. _____

15. _____

16. _____



17. _____

18. _____

19. _____

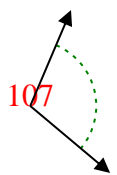
20. _____

1-10	95	90	85	80	75	70	65	60	55	50
11-20	45	40	35	30	25	20	15	10	5	0

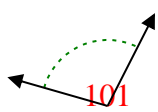


Determina si el ángulo mostrado es agudo, obtuso, recto o llano.

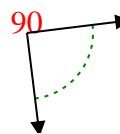
Ej)



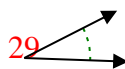
1)



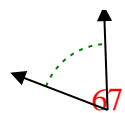
2)



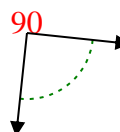
3)



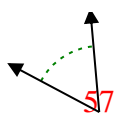
4)



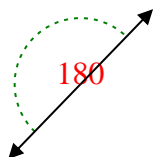
5)



6)



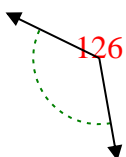
7)



8)



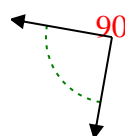
9)



10)



11)



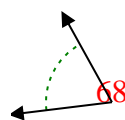
12)



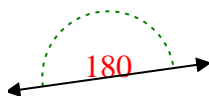
13)



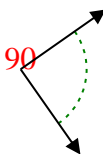
14)



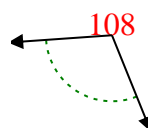
15)



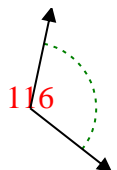
16)



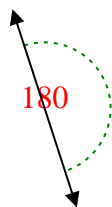
17)



18)



19)



20)



Respuestas

Ej. obtuso

1. obtuso

2. derecho

3. agudo

4. agudo

5. derecho

6. agudo

7. recto

8. agudo

9. obtuso

10. obtuso

11. derecho

12. agudo

13. agudo

14. agudo

15. recto

16. derecho

17. obtuso

18. obtuso

19. recto

20. obtuso