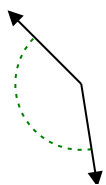


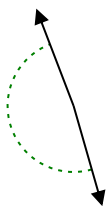


Determina si el ángulo mostrado es agudo, obtuso, recto o llano.

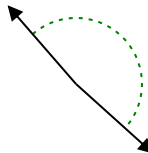
Ej)



1)

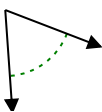


2)

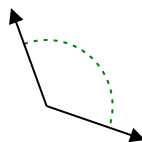


Ej. **obtuso**

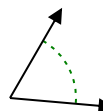
3)



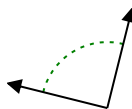
4)



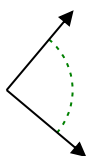
5)



6)



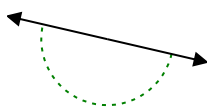
7)



8)



9)



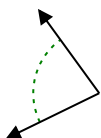
10)



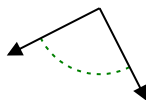
11)



12)



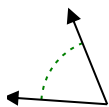
13)



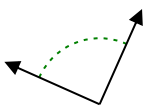
14)



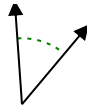
15)



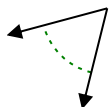
16)



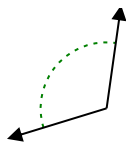
17)



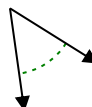
18)



19)



20)



1. _____
2. _____
3. _____
4. _____
5. _____
6. _____
7. _____
8. _____
9. _____
10. _____
11. _____
12. _____
13. _____
14. _____
15. _____
16. _____
17. _____
18. _____
19. _____
20. _____

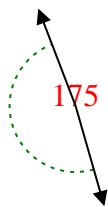


Determina si el ángulo mostrado es agudo, obtuso, recto o llano.

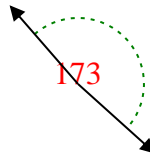
Ej)



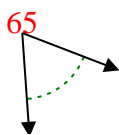
1)



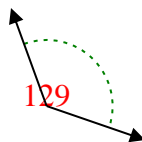
2)



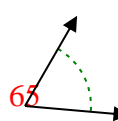
3)



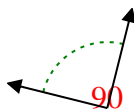
4)



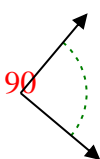
5)



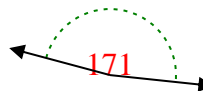
6)



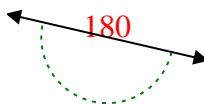
7)



8)



9)



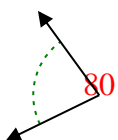
10)



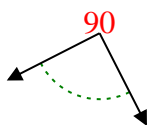
11)



12)



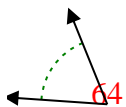
13)



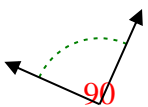
14)



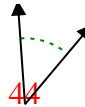
15)



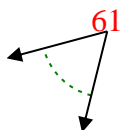
16)



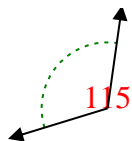
17)



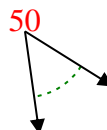
18)



19)



20)



Respuestas

Ej. obtuso

1. obtuso

2. obtuso

3. agudo

4. obtuso

5. agudo

6. derecho

7. derecho

8. obtuso

9. recto

10. agudo

11. recto

12. agudo

13. derecho

14. obtuso

15. agudo

16. derecho

17. agudo

18. agudo

19. obtuso

20. agudo