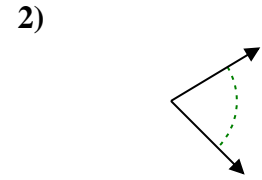
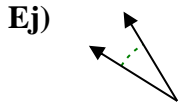




Determina si el ángulo mostrado es agudo, obtuso, recto o llano.

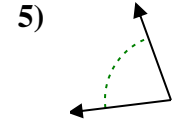
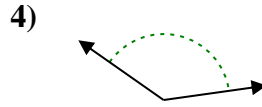
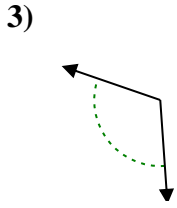
**Respuestas**



Ej. **agudo**

1. \_\_\_\_\_

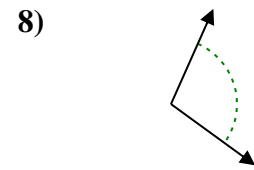
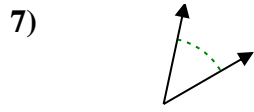
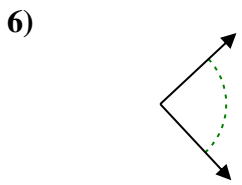
2. \_\_\_\_\_



3. \_\_\_\_\_

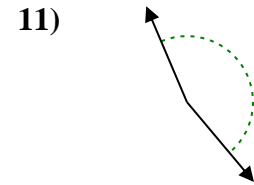
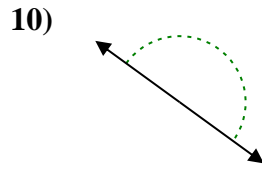
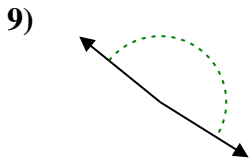
4. \_\_\_\_\_

5. \_\_\_\_\_



6. \_\_\_\_\_

7. \_\_\_\_\_

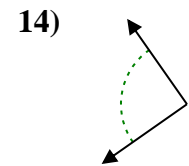
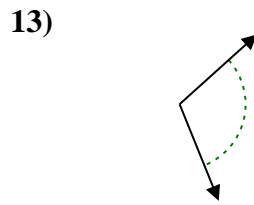
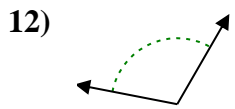


8. \_\_\_\_\_

9. \_\_\_\_\_

10. \_\_\_\_\_

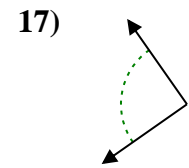
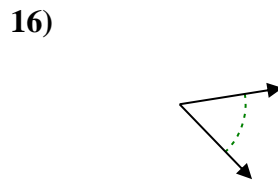
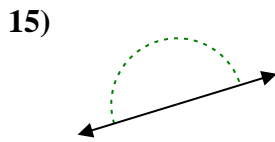
11. \_\_\_\_\_



12. \_\_\_\_\_

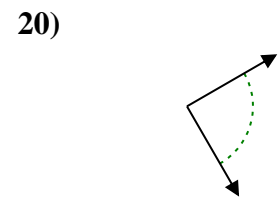
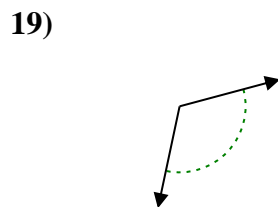
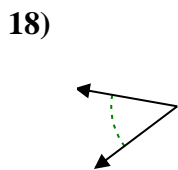
13. \_\_\_\_\_

14. \_\_\_\_\_



15. \_\_\_\_\_

16. \_\_\_\_\_



17. \_\_\_\_\_

18. \_\_\_\_\_

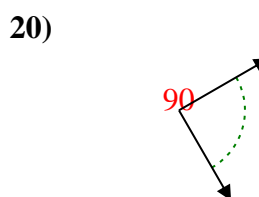
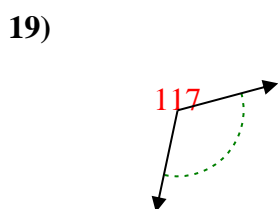
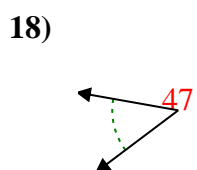
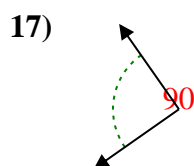
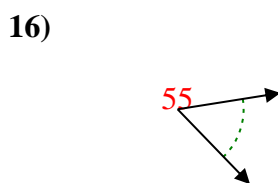
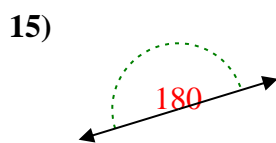
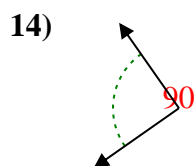
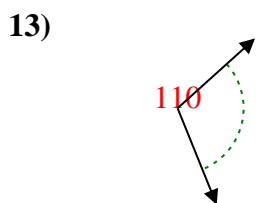
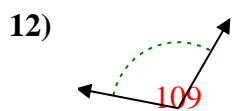
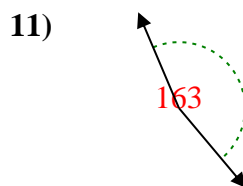
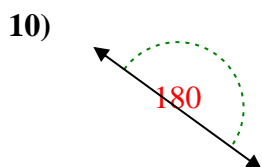
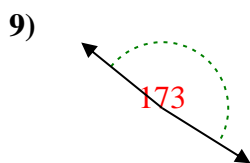
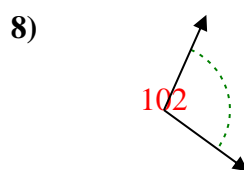
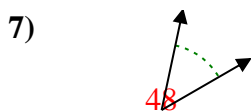
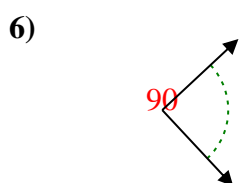
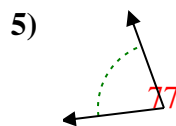
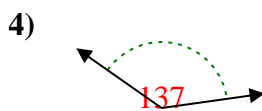
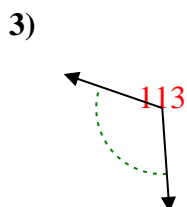
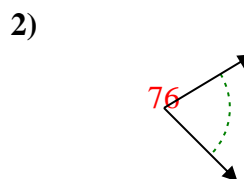
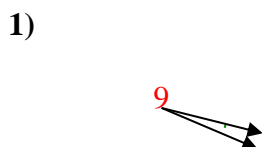
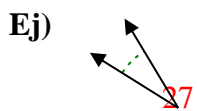
19. \_\_\_\_\_

20. \_\_\_\_\_

1-10	95	90	85	80	75	70	65	60	55	50
11-20	45	40	35	30	25	20	15	10	5	0



Determina si el ángulo mostrado es agudo, obtuso, recto o llano.



**Respuestas**

Ej. agudo

1. agudo

2. agudo

3. obtuso

4. obtuso

5. agudo

6. derecho

7. agudo

8. obtuso

9. obtuso

10. recto

11. obtuso

12. obtuso

13. obtuso

14. derecho

15. recto

16. agudo

17. derecho

18. agudo

19. obtuso

20. derecho