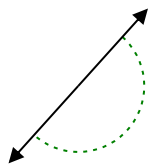




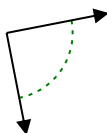
Determina si el ángulo mostrado es agudo, obtuso, recto o llano.

Respuestas

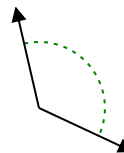
Ej)



1)

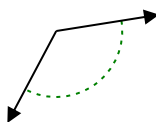


2)

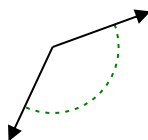


Ej. **recto**

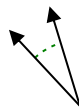
3)



4)



5)



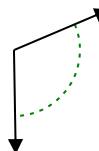
6)



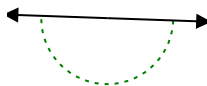
7)



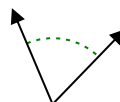
8)



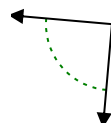
9)



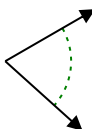
10)



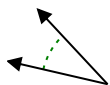
11)



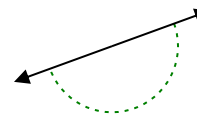
12)



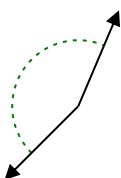
13)



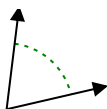
14)



15)



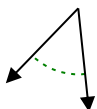
16)



17)



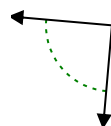
18)



19)



20)



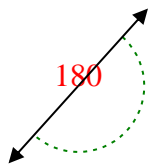
- 1. _____
- 2. _____
- 3. _____
- 4. _____
- 5. _____
- 6. _____
- 7. _____
- 8. _____
- 9. _____
- 10. _____
- 11. _____
- 12. _____
- 13. _____
- 14. _____
- 15. _____
- 16. _____
- 17. _____
- 18. _____
- 19. _____
- 20. _____

1-10	95	90	85	80	75	70	65	60	55	50
11-20	45	40	35	30	25	20	15	10	5	0

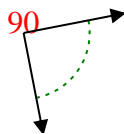


Determina si el ángulo mostrado es agudo, obtuso, recto o llano.

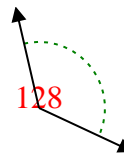
Ej)



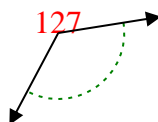
1)



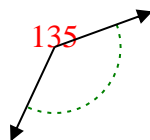
2)



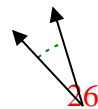
3)



4)



5)



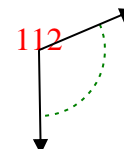
6)



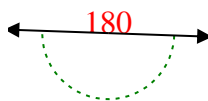
7)



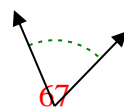
8)



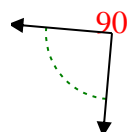
9)



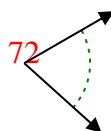
10)



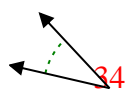
11)



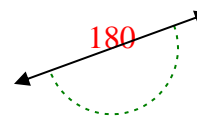
12)



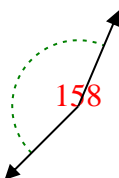
13)



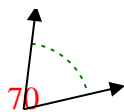
14)



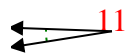
15)



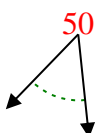
16)



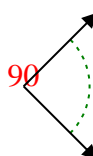
17)



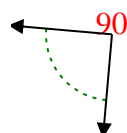
18)



19)



20)



Respuestas

Ej. recto

1. derecho

2. obtuso

3. obtuso

4. obtuso

5. agudo

6. obtuso

7. obtuso

8. obtuso

9. recto

10. agudo

11. derecho

12. agudo

13. agudo

14. recto

15. obtuso

16. agudo

17. agudo

18. agudo

19. derecho

20. derecho