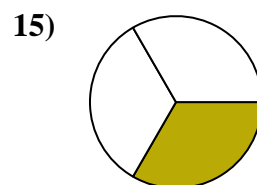
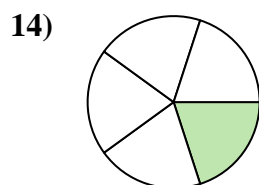
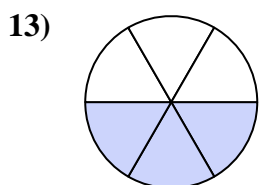
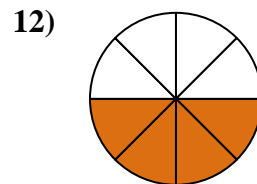
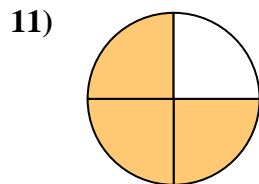
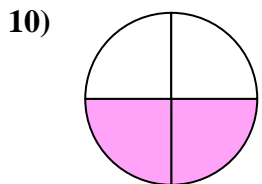
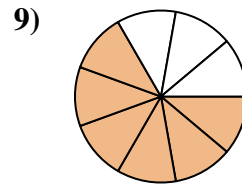
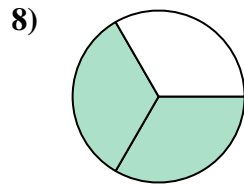
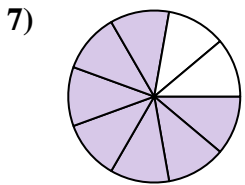
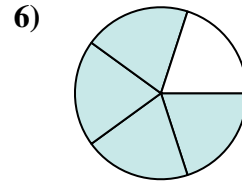
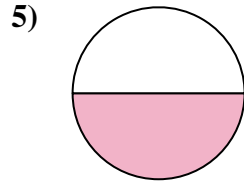
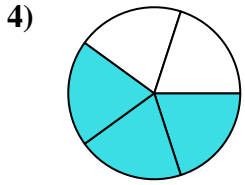
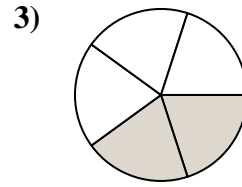
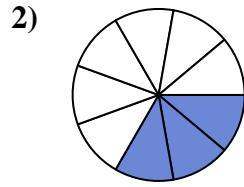
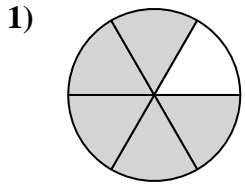




Encuentra el ángulo (en grados) de la parte sombreada del círculo.

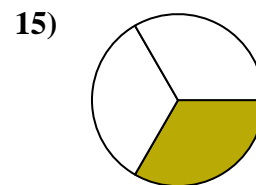
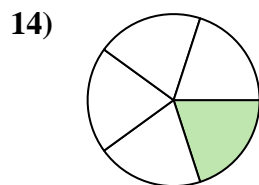
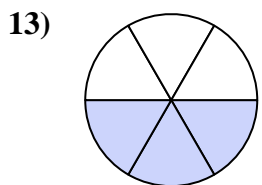
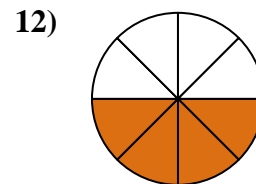
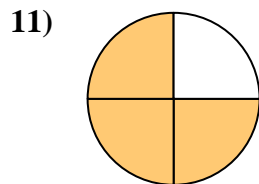
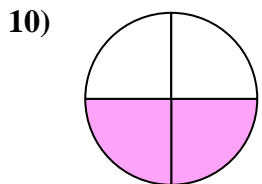
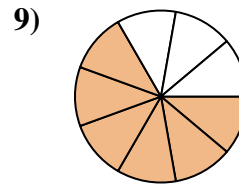
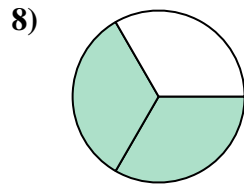
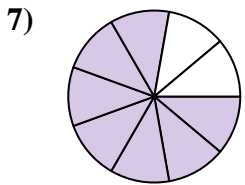
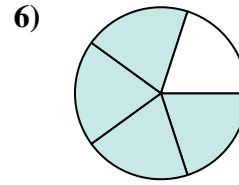
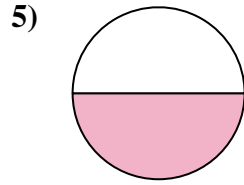
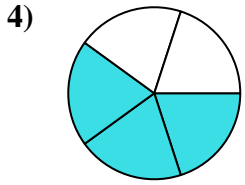
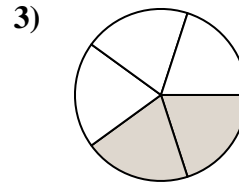
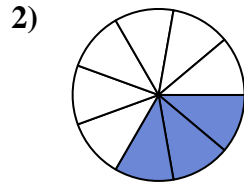
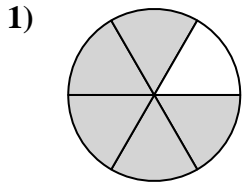
Respuestas



1. _____
2. _____
3. _____
4. _____
5. _____
6. _____
7. _____
8. _____
9. _____
10. _____
11. _____
12. _____
13. _____
14. _____
15. _____



Encuentra el ángulo (en grados) de la parte sombreada del círculo.



Respuestas

1. 300

2. 120

3. 144

4. 216

5. 180

6. 288

7. 280

8. 240

9. 240

10. 180

11. 270

12. 180

13. 180

14. 72

15. 120



Encuentra el ángulo (en grados) de la parte sombreada del círculo.

240

180

180

240

270

120

144

288

280

300

216

180

Respuestas

1. _____

2. _____

3. _____

4. _____

5. _____

6. _____

7. _____

8. _____

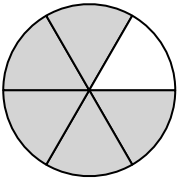
9. _____

10. _____

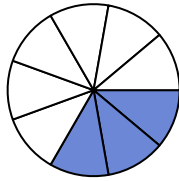
11. _____

12. _____

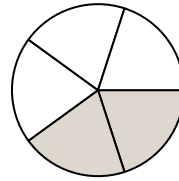
1)



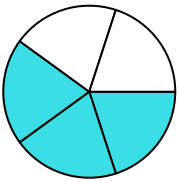
2)



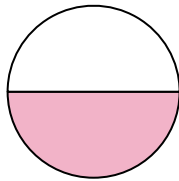
3)



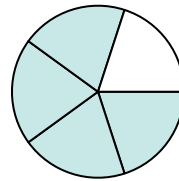
4)



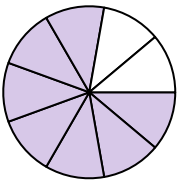
5)



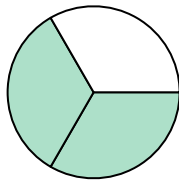
6)



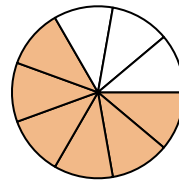
7)



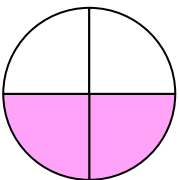
8)



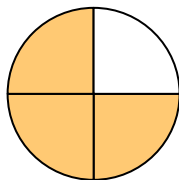
9)



10)



11)



12)

