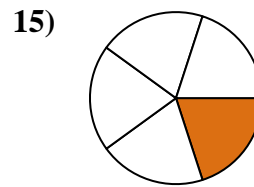
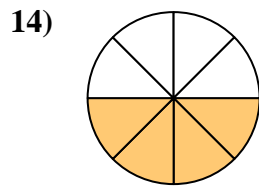
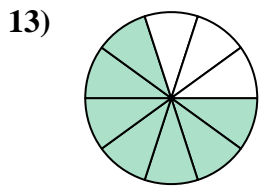
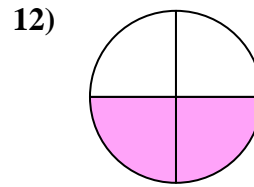
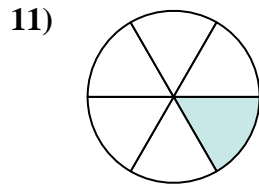
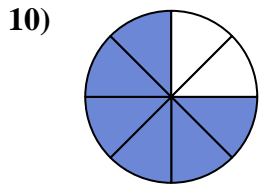
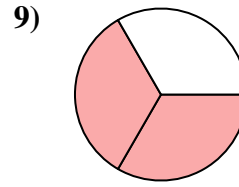
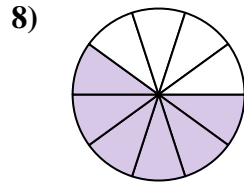
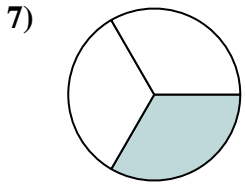
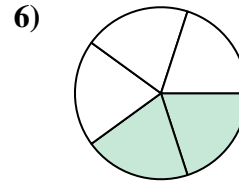
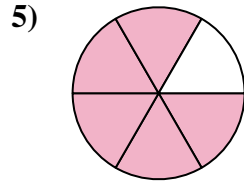
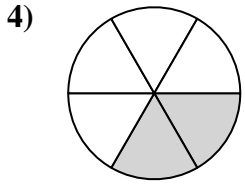
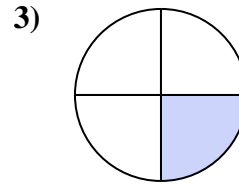
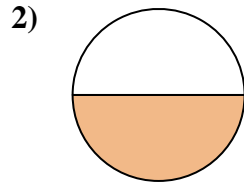
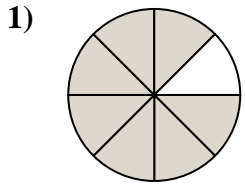




Encuentra el ángulo (en grados) de la parte sombreada del círculo.

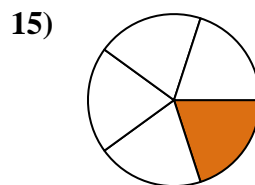
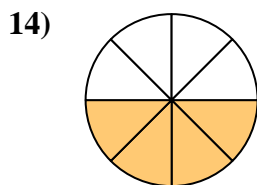
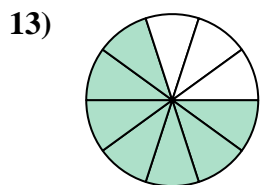
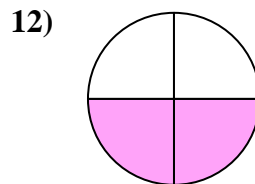
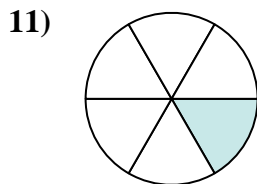
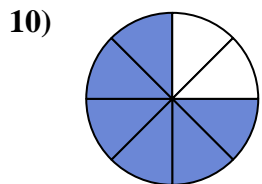
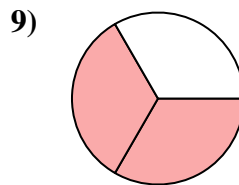
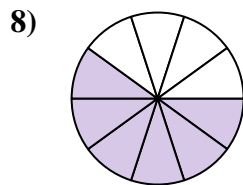
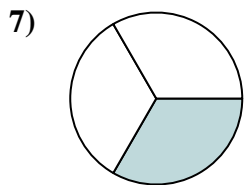
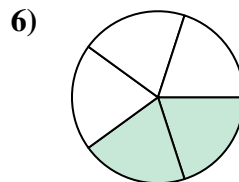
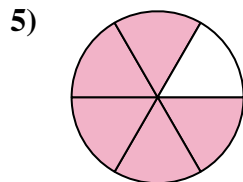
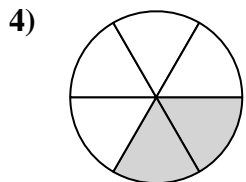
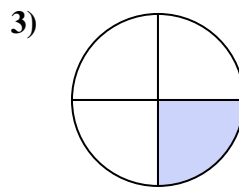
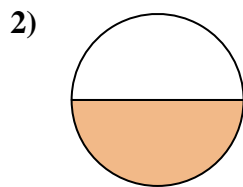
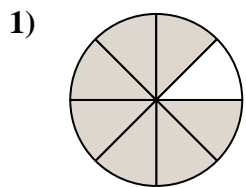


Respuestas

1. _____
2. _____
3. _____
4. _____
5. _____
6. _____
7. _____
8. _____
9. _____
10. _____
11. _____
12. _____
13. _____
14. _____
15. _____



Encuentra el ángulo (en grados) de la parte sombreada del círculo.



Respuestas

1. 315

2. 180

3. 90

4. 120

5. 300

6. 144

7. 120

8. 216

9. 240

10. 270

11. 60

12. 180

13. 252

14. 180

15. 72



Encuentra el ángulo (en grados) de la parte sombreada del círculo.

120

270

90

216

315

180

180

144

240

300

120

60

Respuestas

1. _____

2. _____

3. _____

4. _____

5. _____

6. _____

7. _____

8. _____

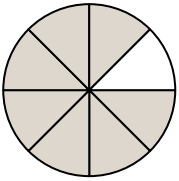
9. _____

10. _____

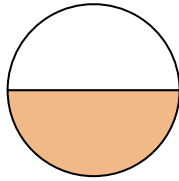
11. _____

12. _____

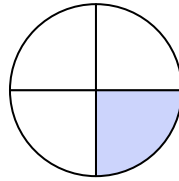
1)



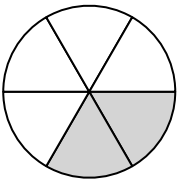
2)



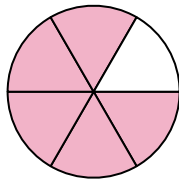
3)



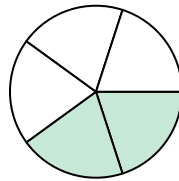
4)



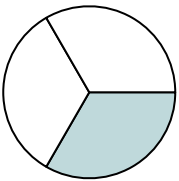
5)



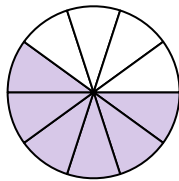
6)



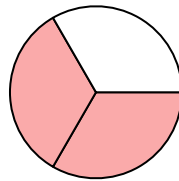
7)



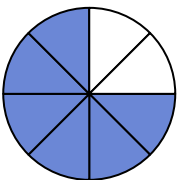
8)



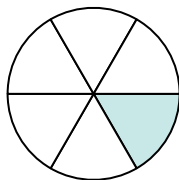
9)



10)



11)



12)

