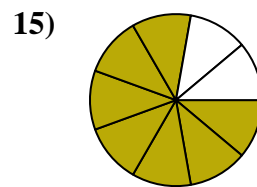
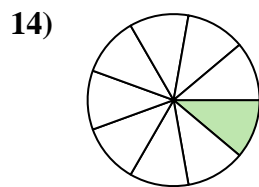
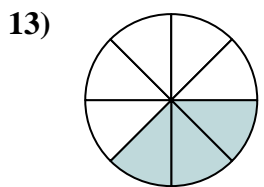
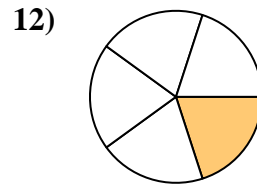
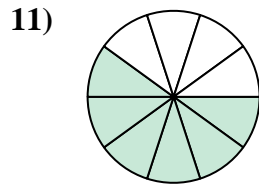
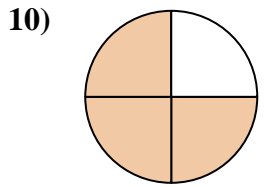
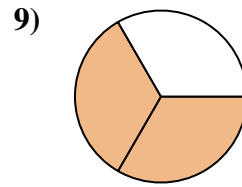
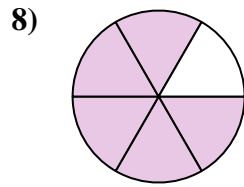
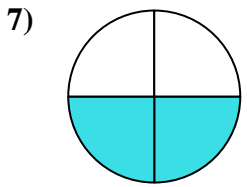
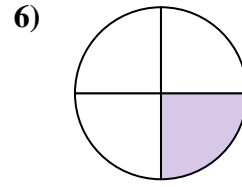
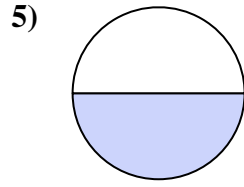
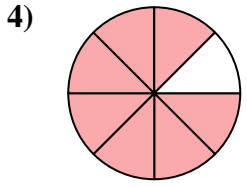
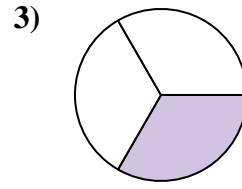
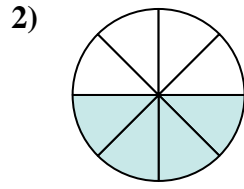
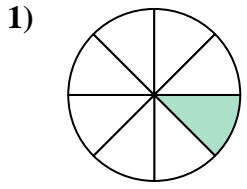




Encuentra el ángulo (en grados) de la parte sombreada del círculo.



**Respuestas**

1. \_\_\_\_\_

2. \_\_\_\_\_

3. \_\_\_\_\_

4. \_\_\_\_\_

5. \_\_\_\_\_

6. \_\_\_\_\_

7. \_\_\_\_\_

8. \_\_\_\_\_

9. \_\_\_\_\_

10. \_\_\_\_\_

11. \_\_\_\_\_

12. \_\_\_\_\_

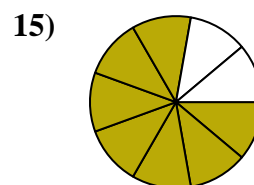
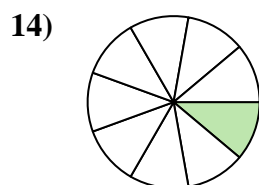
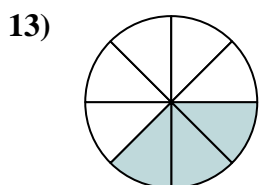
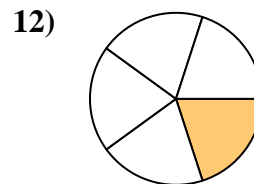
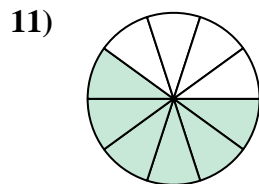
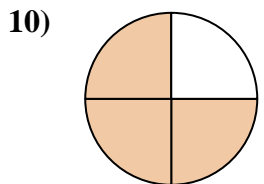
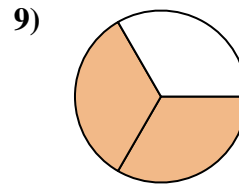
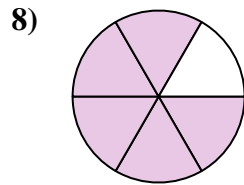
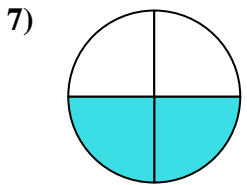
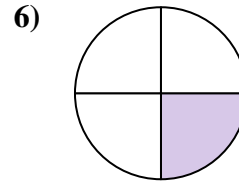
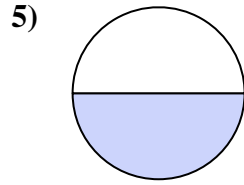
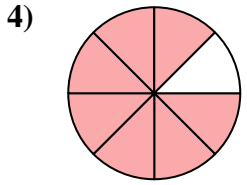
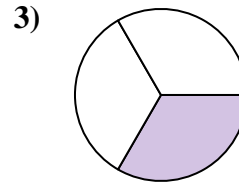
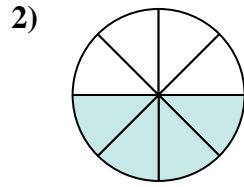
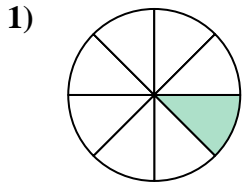
13. \_\_\_\_\_

14. \_\_\_\_\_

15. \_\_\_\_\_



Encuentra el ángulo (en grados) de la parte sombreada del círculo.



**Respuestas**

1. 45

2. 180

3. 120

4. 315

5. 180

6. 90

7. 180

8. 300

9. 240

10. 270

11. 216

12. 72

13. 135

14. 40

15. 280

