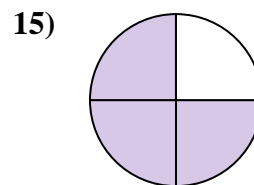
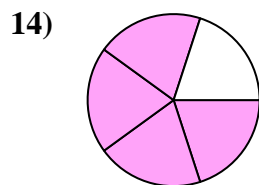
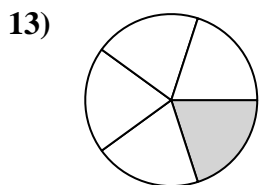
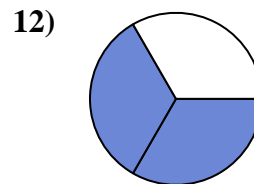
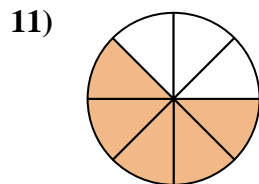
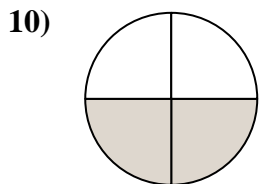
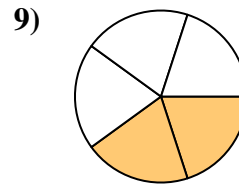
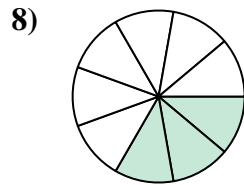
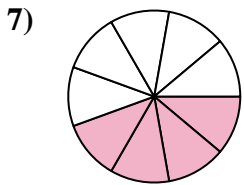
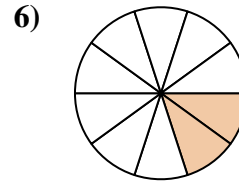
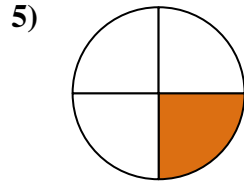
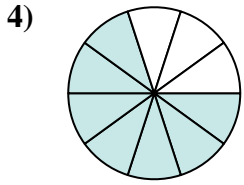
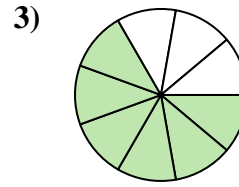
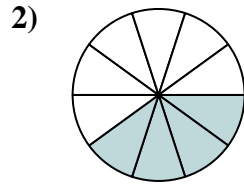
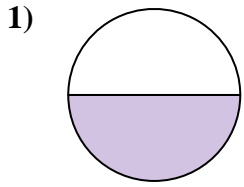




Encuentra el ángulo (en grados) de la parte sombreada del círculo.

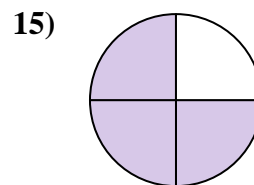
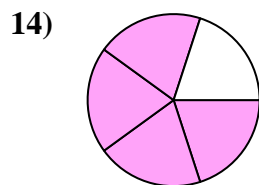
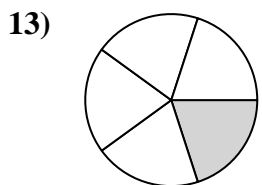
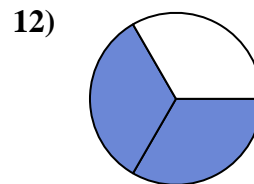
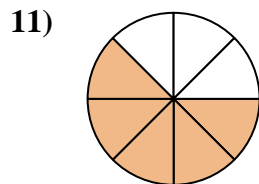
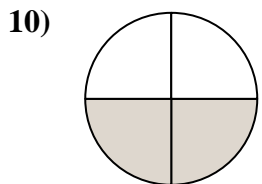
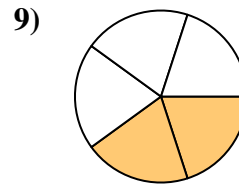
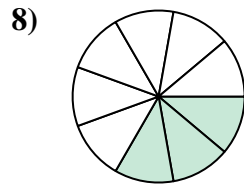
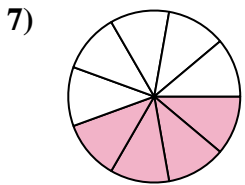
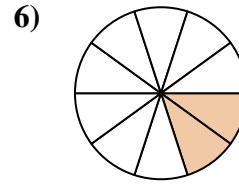
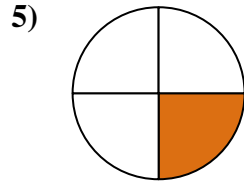
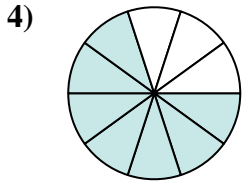
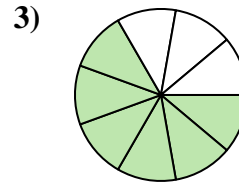
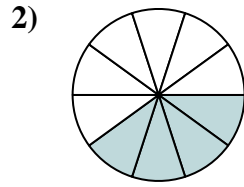
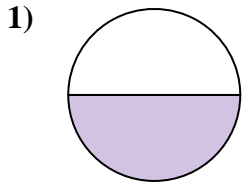


Respuestas

1. _____
2. _____
3. _____
4. _____
5. _____
6. _____
7. _____
8. _____
9. _____
10. _____
11. _____
12. _____
13. _____
14. _____
15. _____



Encuentra el ángulo (en grados) de la parte sombreada del círculo.



Respuestas

1. 180

2. 144

3. 240

4. 252

5. 90

6. 72

7. 160

8. 120

9. 144

10. 180

11. 225

12. 240

13. 72

14. 288

15. 270



Encuentra el ángulo (en grados) de la parte sombreada del círculo.

180

160

144

144

225

252

72

240

240

90

180

120

Respuestas

1. _____

2. _____

3. _____

4. _____

5. _____

6. _____

7. _____

8. _____

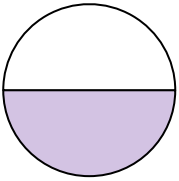
9. _____

10. _____

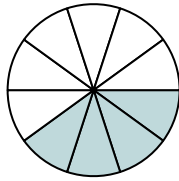
11. _____

12. _____

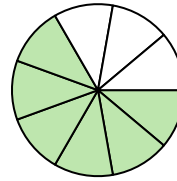
1)



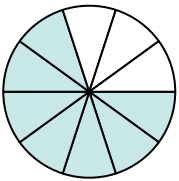
2)



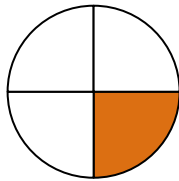
3)



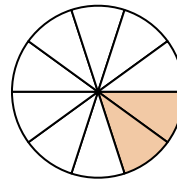
4)



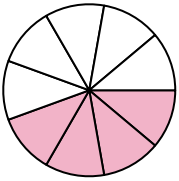
5)



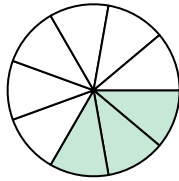
6)



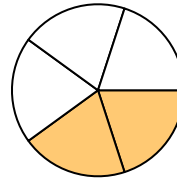
7)



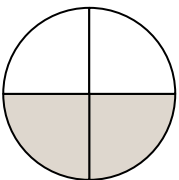
8)



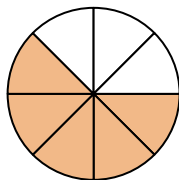
9)



10)



11)



12)

