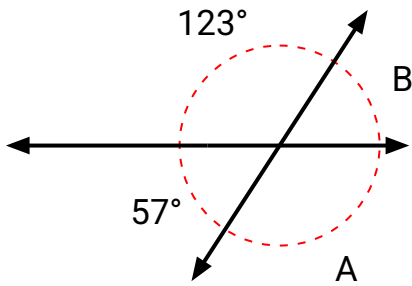




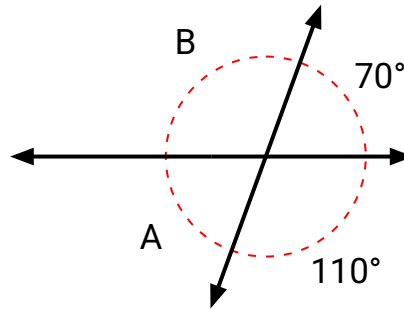
Encuentra el valor del ángulo 'A' y el ángulo 'B'.

**Respuestas**

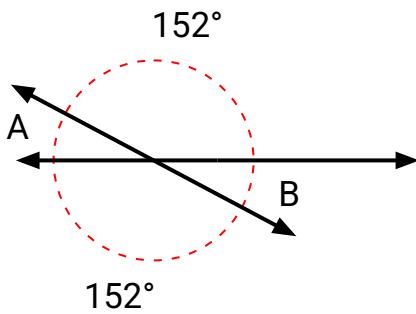
1)



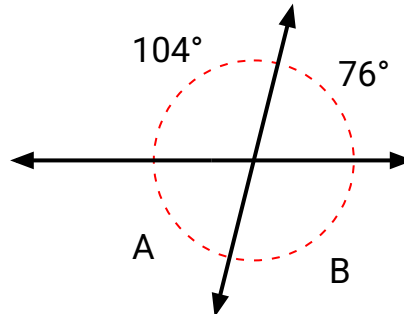
2)



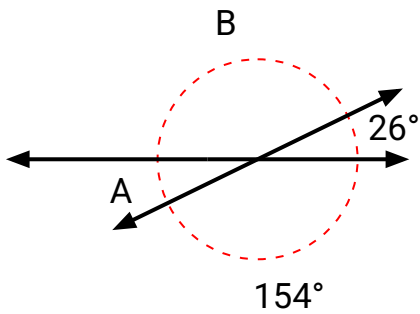
3)



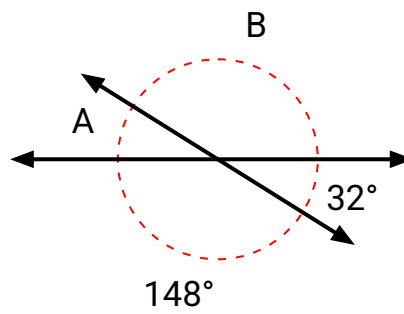
4)



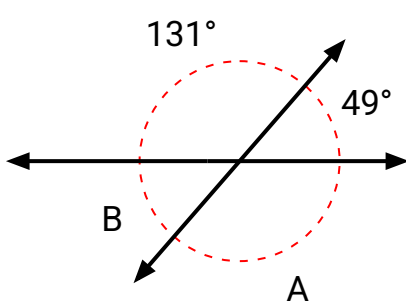
5)



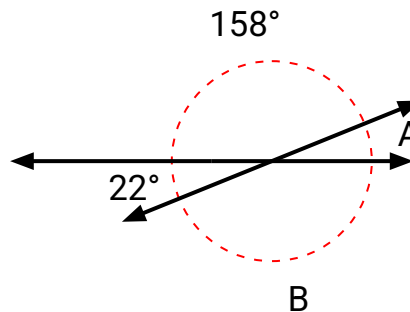
6)



7)



8)

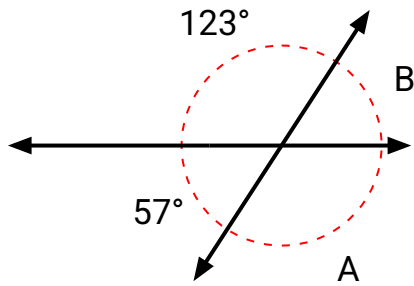


1. \_\_\_\_\_
2. \_\_\_\_\_
3. \_\_\_\_\_
4. \_\_\_\_\_
5. \_\_\_\_\_
6. \_\_\_\_\_
7. \_\_\_\_\_
8. \_\_\_\_\_

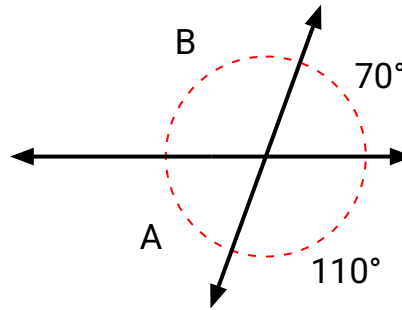


Encuentra el valor del ángulo 'A' y el ángulo 'B'.

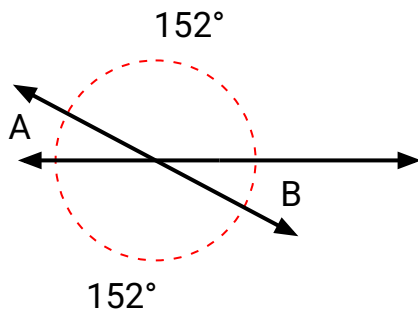
1)



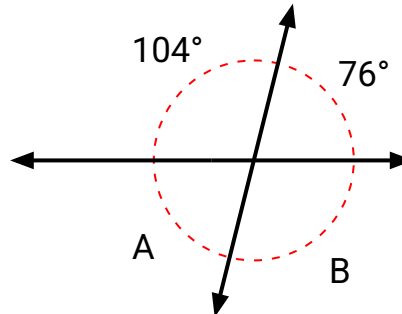
2)



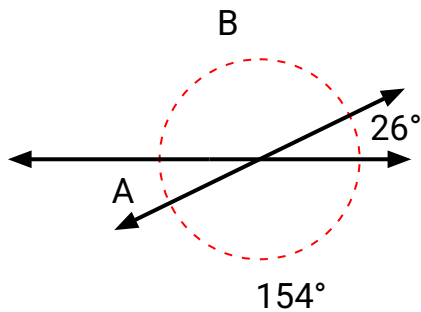
3)



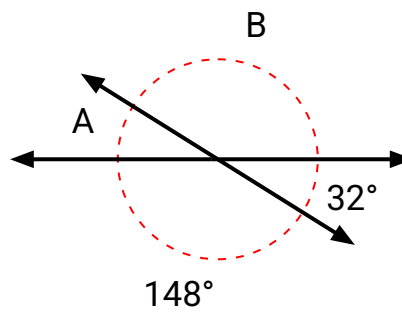
4)



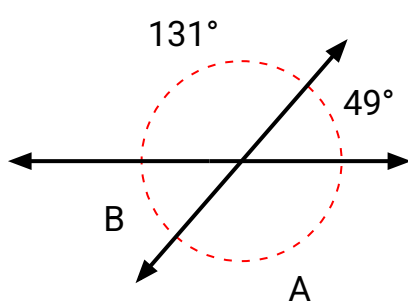
5)



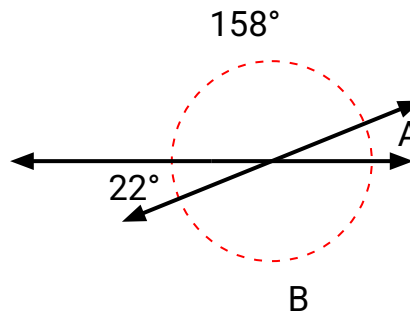
6)



7)



8)

**Respuestas**

1.	<b>123°</b>	<b>57°</b>
2.	<b>70°</b>	<b>110°</b>
3.	<b>152°</b>	<b>152°</b>
4.	<b>104°</b>	<b>76°</b>
5.	<b>154°</b>	<b>26°</b>
6.	<b>148°</b>	<b>32°</b>
7.	<b>131°</b>	<b>49°</b>
8.	<b>22°</b>	<b>158°</b>