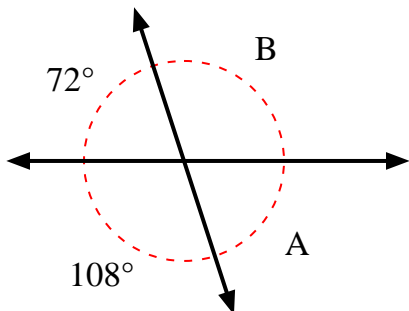


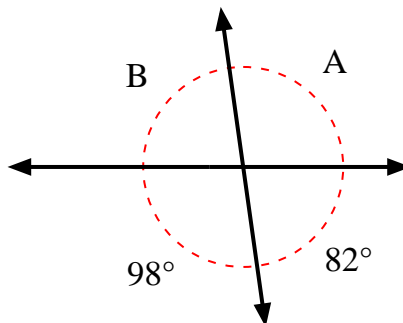


Encuentra el valor del ángulo 'A' y el ángulo 'B'.

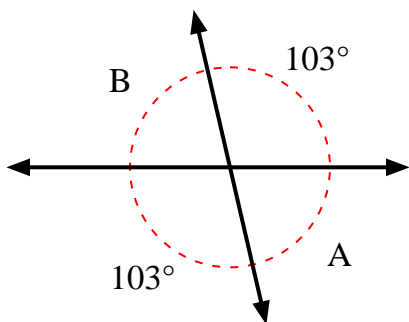
1)



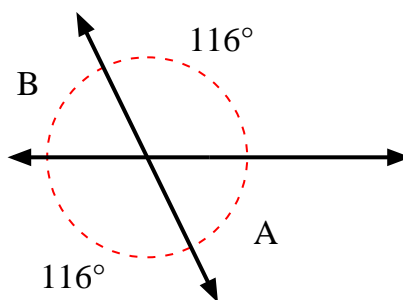
2)



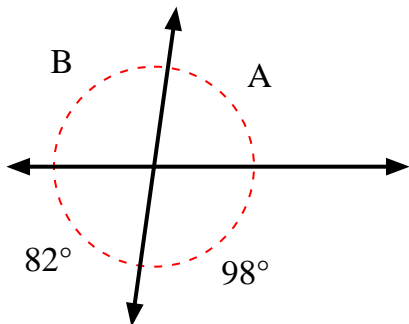
3)



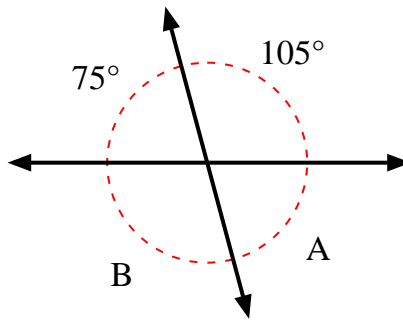
4)



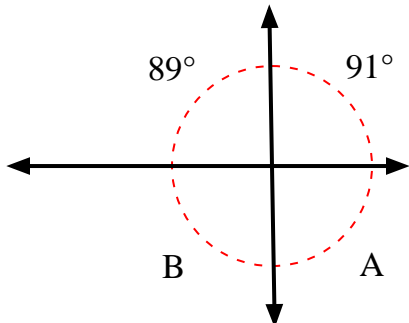
5)



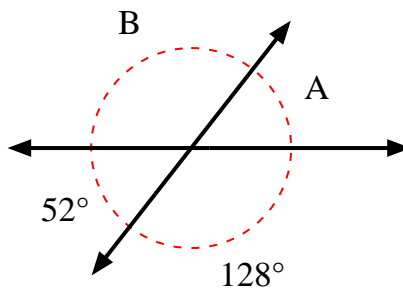
6)



7)



8)



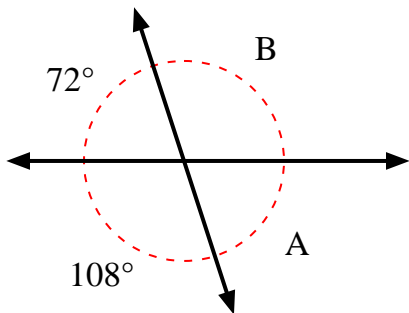
**Respuestas**

1. \_\_\_\_\_
2. \_\_\_\_\_
3. \_\_\_\_\_
4. \_\_\_\_\_
5. \_\_\_\_\_
6. \_\_\_\_\_
7. \_\_\_\_\_
8. \_\_\_\_\_

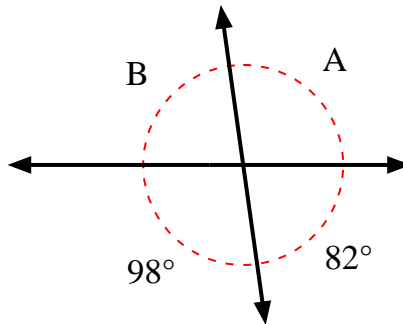


Encuentra el valor del ángulo 'A' y el ángulo 'B'.

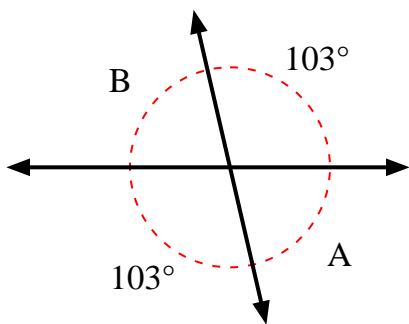
1)



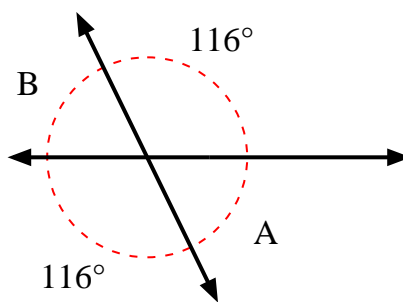
2)



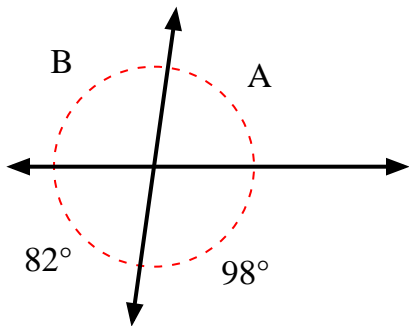
3)



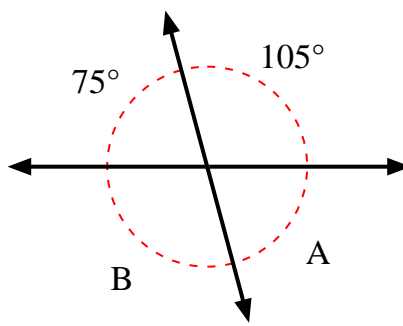
4)



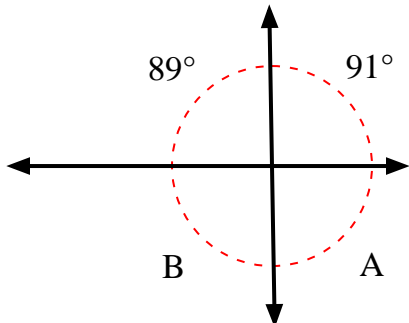
5)



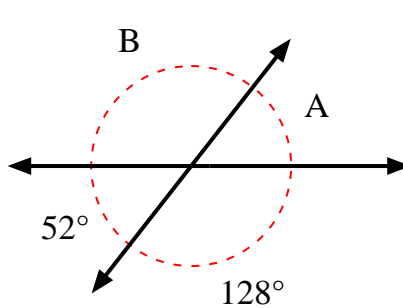
6)



7)



8)



**Respuestas**

1.	<b>72°</b>	<b>108°</b>
2.	<b>98°</b>	<b>82°</b>
3.	<b>77°</b>	<b>77°</b>
4.	<b>64°</b>	<b>64°</b>
5.	<b>82°</b>	<b>98°</b>
6.	<b>75°</b>	<b>105°</b>
7.	<b>89°</b>	<b>91°</b>
8.	<b>52°</b>	<b>128°</b>