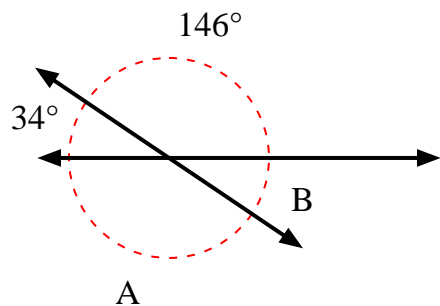


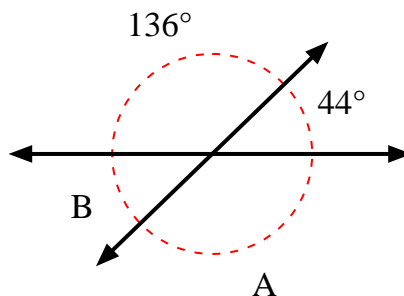


Encuentra el valor del ángulo 'A' y el ángulo 'B'.

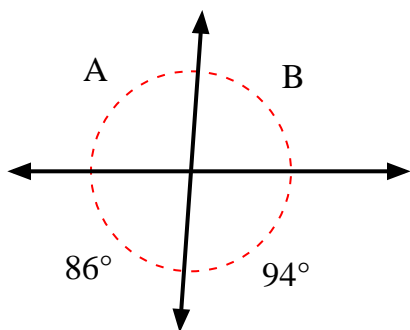
1)



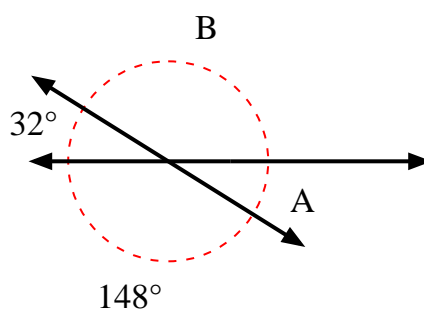
2)



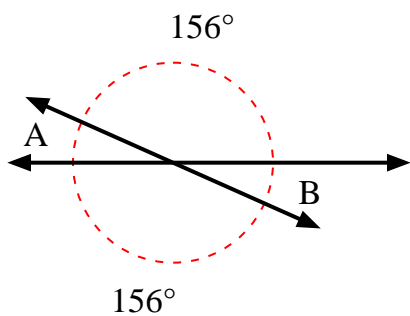
3)



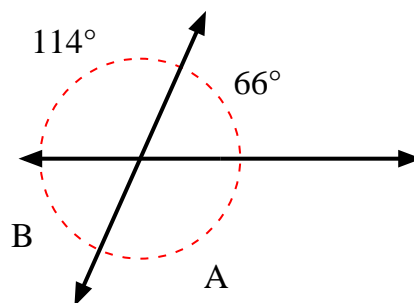
4)



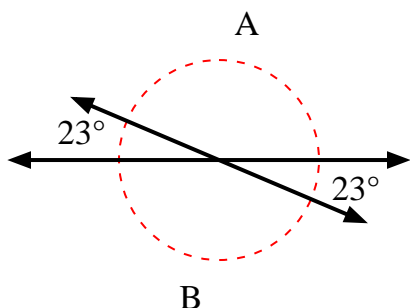
5)



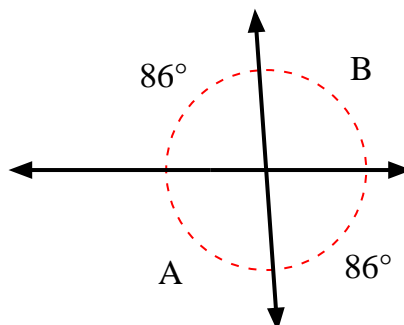
6)



7)



8)



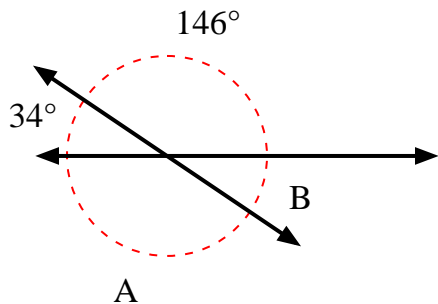
**Respuestas**

1. \_\_\_\_\_
2. \_\_\_\_\_
3. \_\_\_\_\_
4. \_\_\_\_\_
5. \_\_\_\_\_
6. \_\_\_\_\_
7. \_\_\_\_\_
8. \_\_\_\_\_

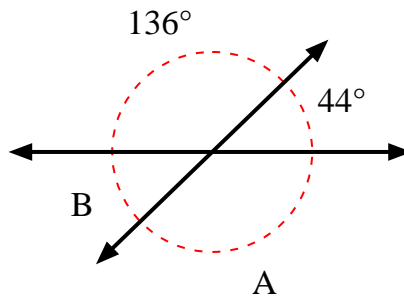


Encuentra el valor del ángulo 'A' y el ángulo 'B'.

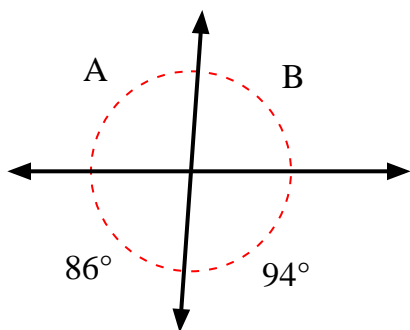
1)



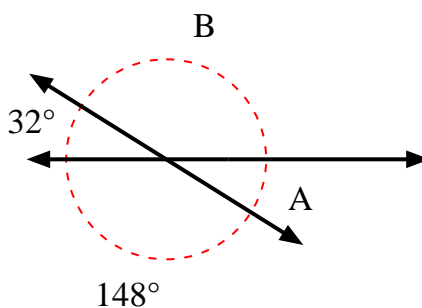
2)



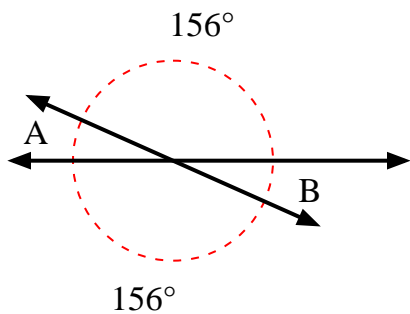
3)



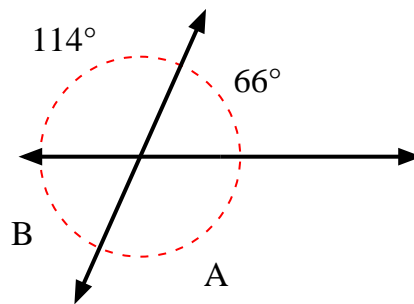
4)



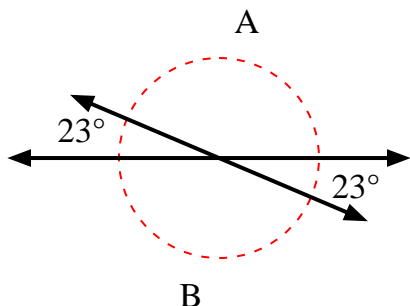
5)



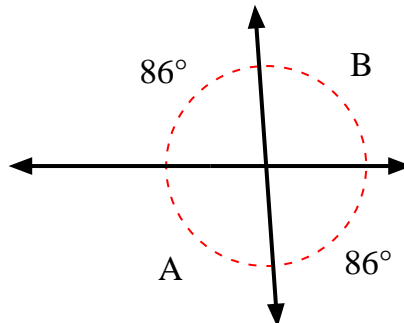
6)



7)



8)



**Respuestas**

1.	<b>146°</b>	<b>34°</b>
2.	<b>136°</b>	<b>44°</b>
3.	<b>94°</b>	<b>86°</b>
4.	<b>32°</b>	<b>148°</b>
5.	<b>24°</b>	<b>24°</b>
6.	<b>114°</b>	<b>66°</b>
7.	<b>157°</b>	<b>157°</b>
8.	<b>94°</b>	<b>94°</b>