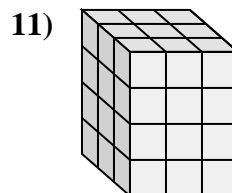
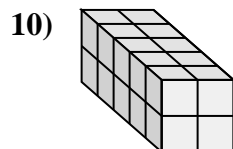
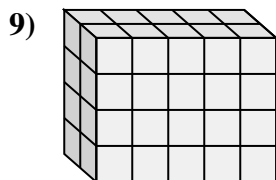
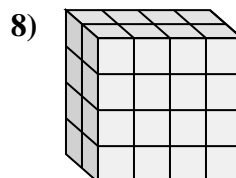
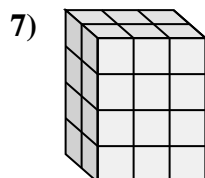
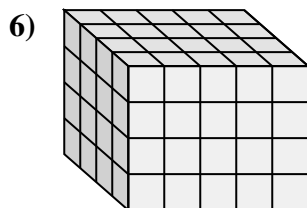
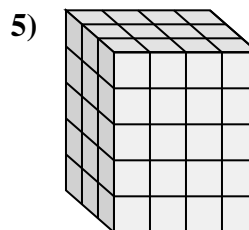
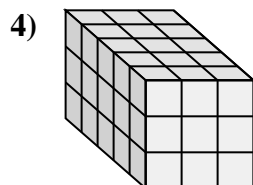
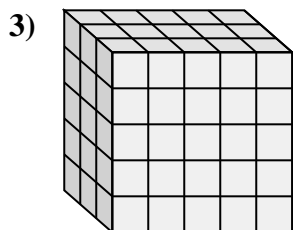
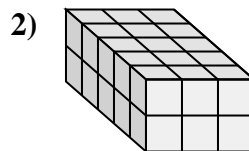
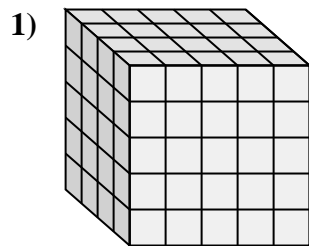
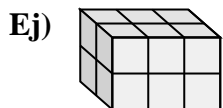




Empareje cada problema con la ecuación que podría representarlo. Responda con el término y la letra que faltan.



A. $3 \times \underline{\quad} \times 5 = 60$

B. $\underline{\quad} \times 3 \times 2 = 12$

C. $2 \times \underline{\quad} \times 4 = 40$

D. $2 \times 3 \times \underline{\quad} = 24$

E. $4 \times 5 \times \underline{\quad} = 80$

F. $\underline{\quad} \times 3 \times 3 = 45$

G. $5 \times 2 \times \underline{\quad} = 20$

H. $3 \times 5 \times 5 = \underline{\quad}$

I. $4 \times 5 \times \underline{\quad} = 100$

J. $\underline{\quad} \times 3 \times 4 = 36$

K. $5 \times 3 \times 2 = \underline{\quad}$

L. $\underline{\quad} \times 4 \times 4 = 32$

Respuestas

Ej. B, 2

1. I, 5

2. K, 30

3. H, 75

4. F, 5

5. A, 4

6. E, 4

7. D, 4

8. L, 2

9. C, 5

10. G, 2

11. J, 3