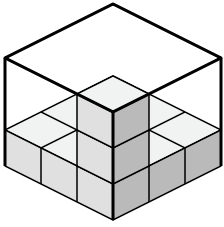


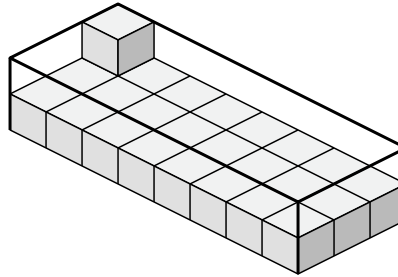


Cree una expresión para determinar el volumen de cada caja.

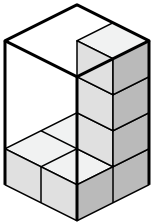
1)



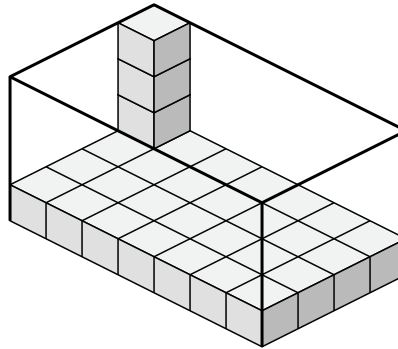
2)



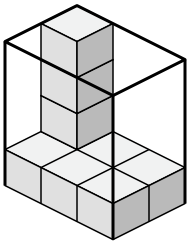
3)



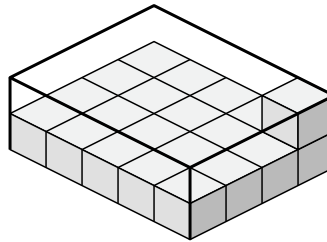
4)



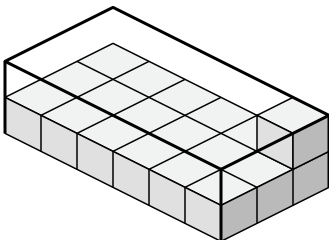
5)



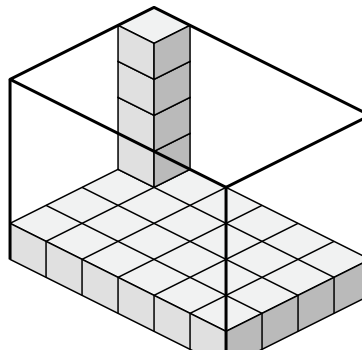
6)



7)



8)



Respuestas

1. _____

2. _____

3. _____

4. _____

5. _____

6. _____

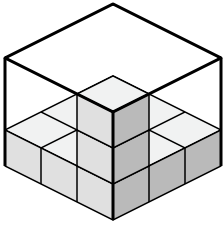
7. _____

8. _____

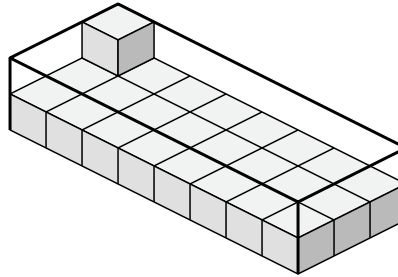


Cree una expresión para determinar el volumen de cada caja.

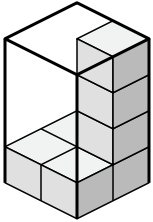
1)



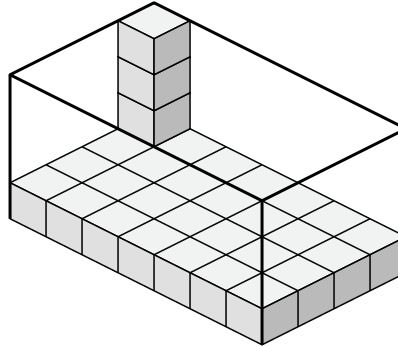
2)



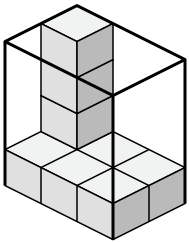
3)



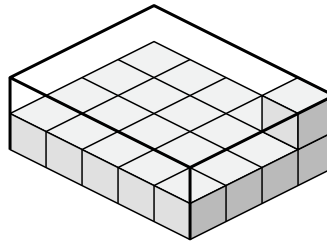
4)



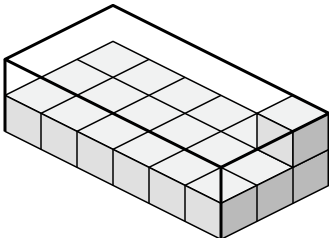
5)



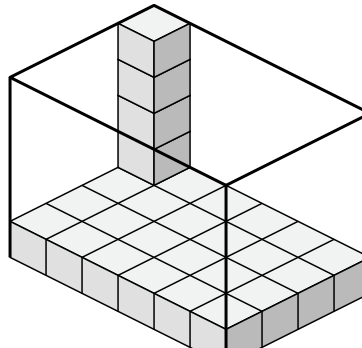
6)



7)



8)



Respuestas

1. 3×3×3

2. 8×3×2

3. 2×2×4

4. 7×4×4

5. 3×2×4

6. 5×4×2

7. 6×3×2

8. 6×4×5