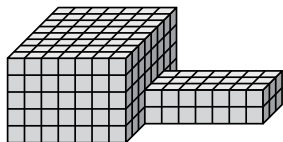




Encuentra el volumen total de cada figura. La medida es en cm (no a escala).

Respuestas

1)



1. _____

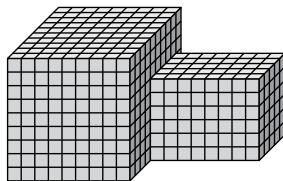
2. _____

3. _____

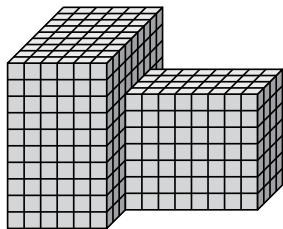
4. _____

5. _____

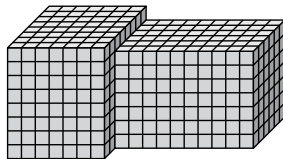
2)



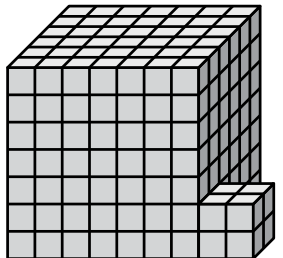
3)



4)



5)

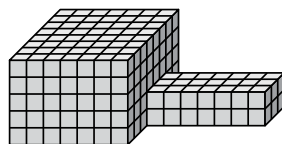




Encuentra el volumen total de cada figura. La medida es en cm (no a escala).

Respuestas

1)



$$7 \times 8 \times 5 = 280$$

$$7 \times 3 \times 2 = 42$$

1. **322 cm^3**

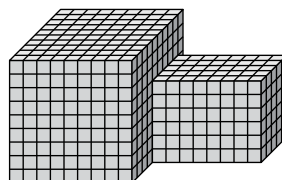
2. **1050 cm^3**

3. **764 cm^3**

4. **868 cm^3**

5. **302 cm^3**

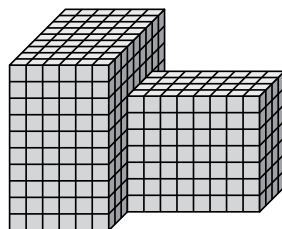
2)



$$9 \times 10 \times 9 = 810$$

$$8 \times 5 \times 6 = 240$$

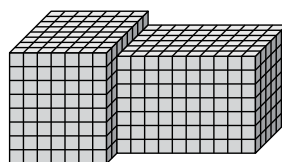
3)



$$6 \times 9 \times 10 = 540$$

$$8 \times 4 \times 7 = 224$$

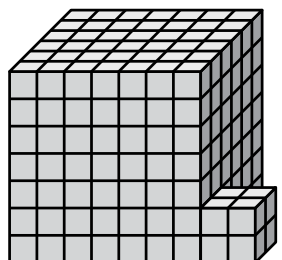
4)



$$7 \times 8 \times 8 = 448$$

$$10 \times 6 \times 7 = 420$$

5)



$$7 \times 6 \times 7 = 294$$

$$2 \times 2 \times 2 = 8$$