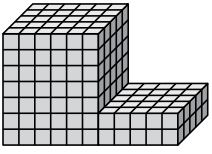




Encuentra el volumen total de cada figura. La medida es en cm (no a escala).

Respuestas

1)



1. _____

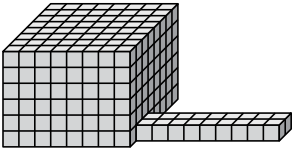
2. _____

3. _____

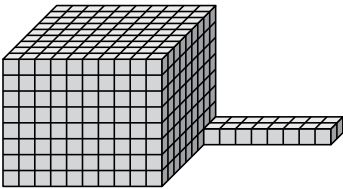
4. _____

5. _____

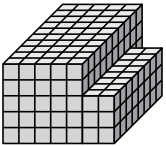
2)



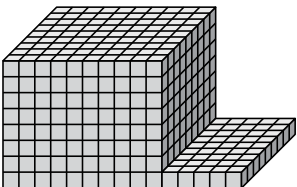
3)



4)



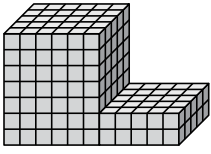
5)





Encuentra el volumen total de cada figura. La medida es en cm (no a escala).

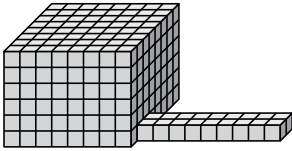
1)



$$6 \times 5 \times 7 = 210$$

$$5 \times 5 \times 2 = 50$$

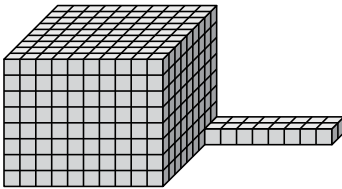
2)



$$8 \times 8 \times 6 = 384$$

$$9 \times 2 \times 1 = 18$$

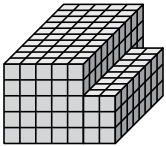
3)



$$10 \times 9 \times 8 = 720$$

$$8 \times 2 \times 1 = 16$$

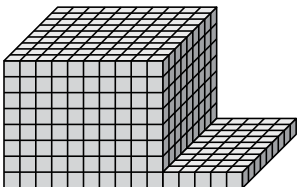
4)



$$5 \times 10 \times 5 = 250$$

$$2 \times 8 \times 3 = 48$$

5)



$$10 \times 9 \times 8 = 720$$

$$5 \times 9 \times 1 = 45$$

Respuestas

1. 260 cm³

2. 402 cm³

3. 736 cm³

4. 298 cm³

5. 765 cm³