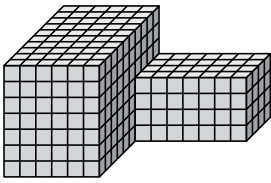




Encuentra el volumen total de cada figura. La medida es en cm (no a escala).

Respuestas

1)



1. _____

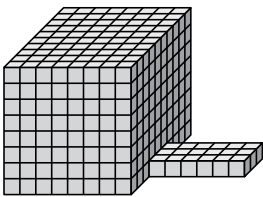
2. _____

3. _____

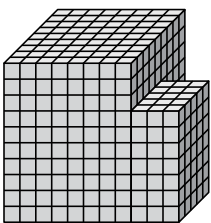
4. _____

5. _____

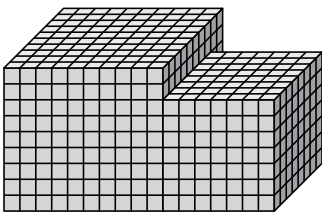
2)



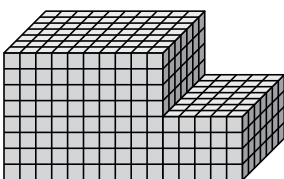
3)



4)



5)

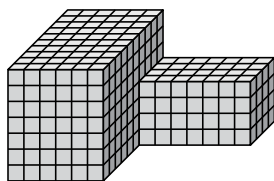




Encuentra el volumen total de cada figura. La medida es en cm (no a escala).

Respuestas

1)

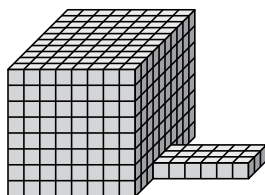


$$6 \times 10 \times 7 = 420$$

$$7 \times 4 \times 4 = 112$$

1. 532 cm³

2)

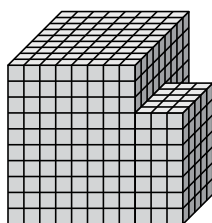


$$8 \times 10 \times 8 = 640$$

$$6 \times 3 \times 1 = 18$$

2. 658 cm³

3)

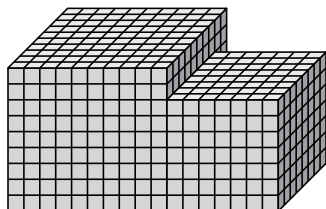


$$8 \times 9 \times 10 = 720$$

$$3 \times 5 \times 7 = 105$$

3. 825 cm³

4)

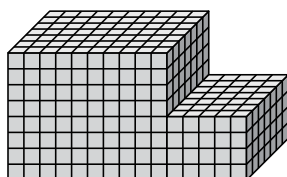


$$10 \times 10 \times 9 = 900$$

$$7 \times 8 \times 7 = 392$$

4. 1292 cm³

5)



$$10 \times 7 \times 8 = 560$$

$$5 \times 7 \times 4 = 140$$

5. 700 cm³