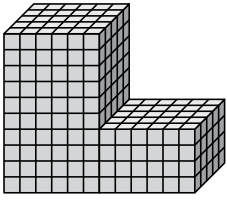




Encuentra el volumen total de cada figura. La medida es en cm (no a escala).

Respuestas

1)



1. _____

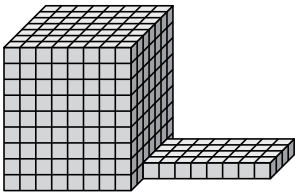
2. _____

3. _____

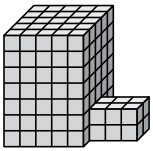
4. _____

5. _____

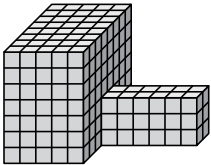
2)



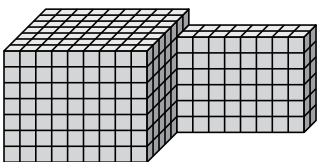
3)



4)



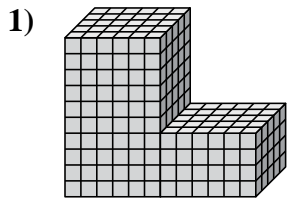
5)





Encuentra el volumen total de cada figura. La medida es en cm (no a escala).

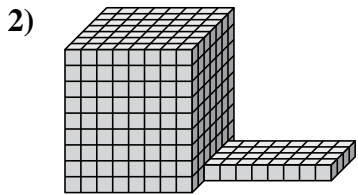
Respuestas



$$6 \times 5 \times 10 = 300$$

$$6 \times 5 \times 4 = 120$$

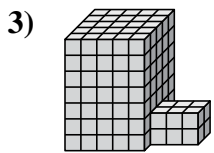
1. 420 cm³



$$8 \times 7 \times 9 = 504$$

$$8 \times 4 \times 1 = 32$$

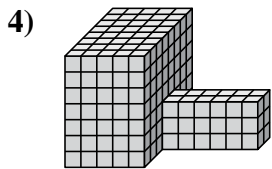
2. 536 cm³



$$5 \times 5 \times 7 = 175$$

$$3 \times 2 \times 2 = 12$$

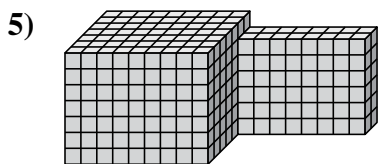
3. 187 cm³



$$5 \times 8 \times 7 = 280$$

$$6 \times 2 \times 3 = 36$$

4. 316 cm³



$$9 \times 7 \times 7 = 441$$

$$8 \times 2 \times 6 = 96$$

5. 537 cm³