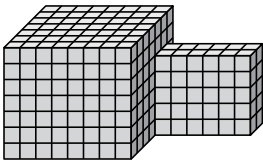




Encuentra el volumen total de cada figura. La medida es en cm (no a escala).

Respuestas

1)



1. _____

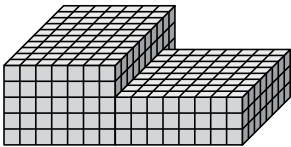
2. _____

3. _____

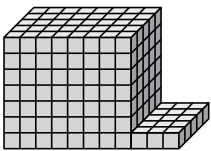
4. _____

5. _____


2)



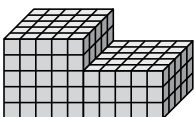
3)



4)



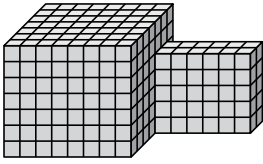
5)





Encuentra el volumen total de cada figura. La medida es en cm (no a escala).

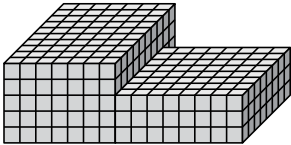
1)



$$8 \times 7 \times 7 = 392$$

$$6 \times 2 \times 5 = 60$$

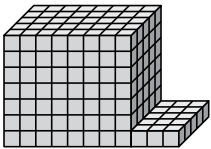
2)



$$7 \times 10 \times 5 = 350$$

$$8 \times 8 \times 3 = 192$$


3)



$$8 \times 5 \times 7 = 280$$

$$3 \times 5 \times 1 = 15$$

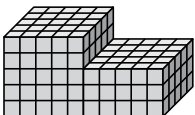
4)



$$7 \times 10 \times 5 = 350$$

$$10 \times 4 \times 4 = 160$$

5)



$$5 \times 5 \times 5 = 125$$

$$5 \times 5 \times 3 = 75$$

Respuestas

1. 452 cm³

2. 542 cm³

3. 295 cm³

4. 510 cm³

5. 200 cm³