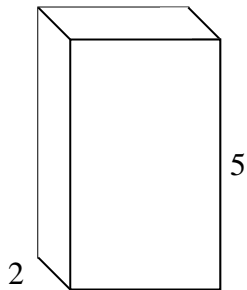


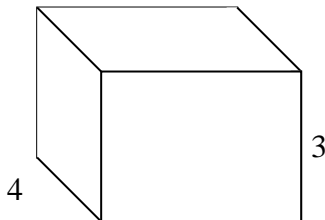


Rellenar cada prisma rectangular con cubos para determinar el volumen. Cada unidad de prisma es medida en cm (no a escala).

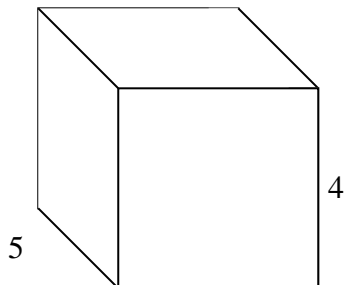
Ej) $3 \frac{2}{3}$



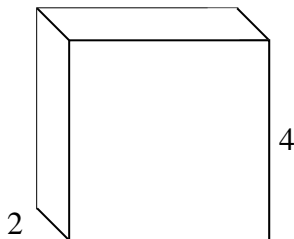
1) $4 \frac{1}{5}$



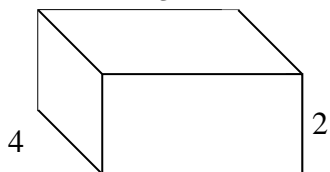
2) $4 \frac{2}{3}$



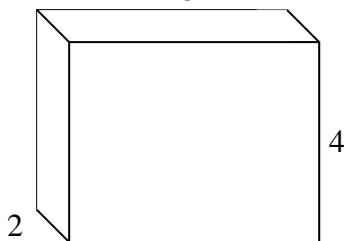
3) $4 \frac{2}{3}$




4) $4 \frac{1}{3}$




5) $5 \frac{2}{3}$



6) $5 \frac{2}{4}$



7) $5 \frac{2}{4}$



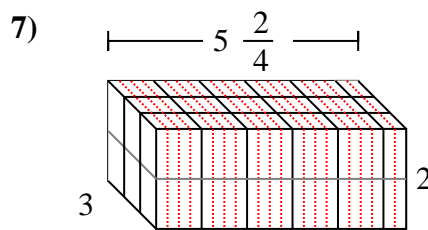
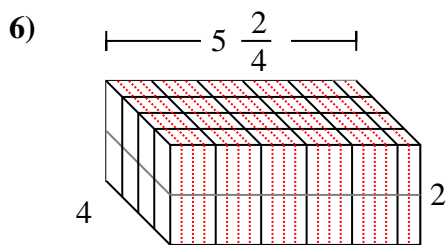
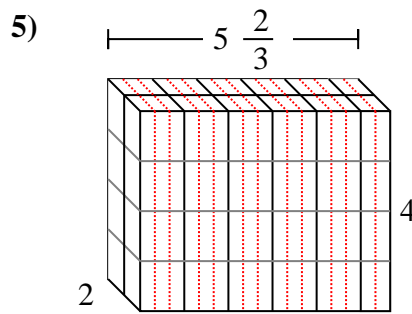
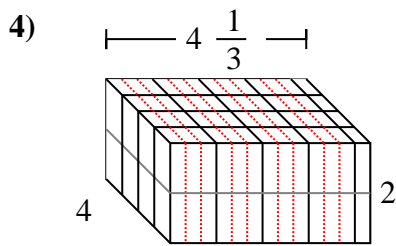
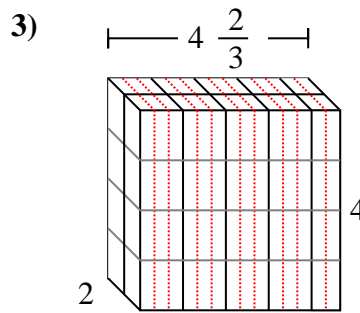
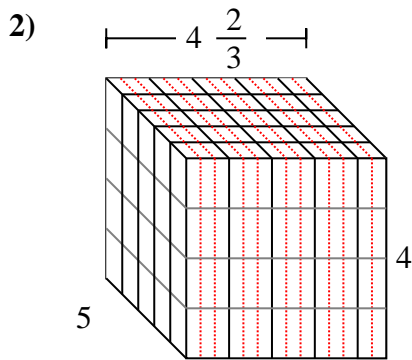
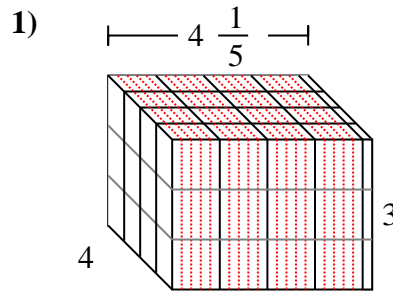
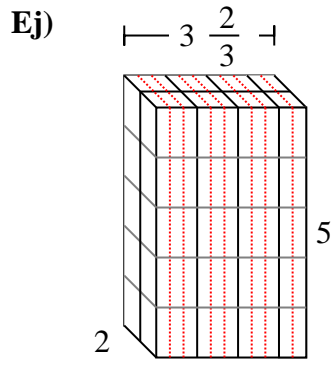
Respuestas

Ej. $36 \frac{2}{3}$ cm

1. _____
2. _____
3. _____
4. _____
5. _____
6. _____
7. _____



Rellenar cada prisma rectangular con cubos para determinar el volumen. Cada unidad de prisma es medida en cm (no a escala).



Respuestas

- Ej. $36 \frac{2}{3}$ cm
1. $50 \frac{2}{5}$ cm
2. $93 \frac{1}{3}$ cm
3. $37 \frac{1}{3}$ cm
4. $34 \frac{2}{3}$ cm
5. $45 \frac{1}{3}$ cm
6. **44 cm**
7. **33 cm**