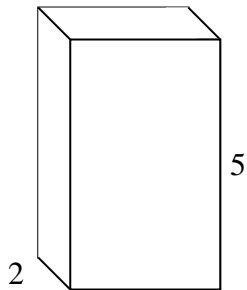


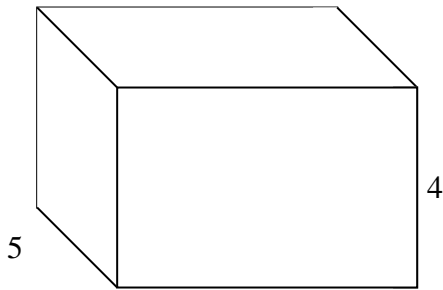


Rellenar cada prisma rectangular con cubos para determinar el volumen. Cada unidad de prisma es medida en cm (no a escala).

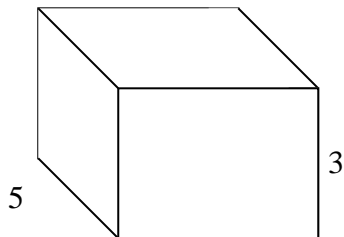
Ej) $3 \frac{1}{2}$



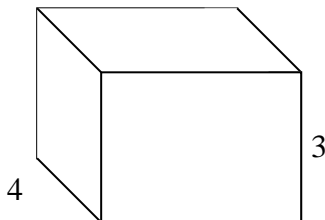
1) $6 \frac{1}{2}$



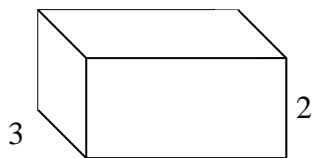
2) $4 \frac{2}{3}$



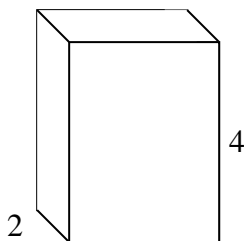
3) $4 \frac{3}{4}$



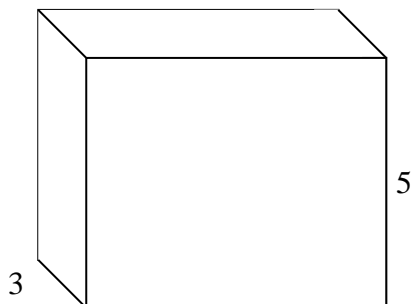
4) $4 \frac{2}{4}$



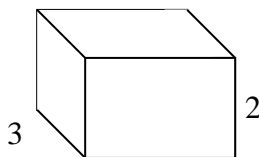
5) $3 \frac{1}{2}$



6) $6 \frac{2}{4}$



7) $3 \frac{1}{2}$



Respuestas

Ej. **35 cm**

1. _____

2. _____

3. _____

4. _____

5. _____

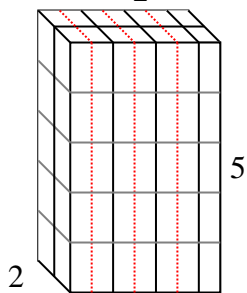
6. _____

7. _____

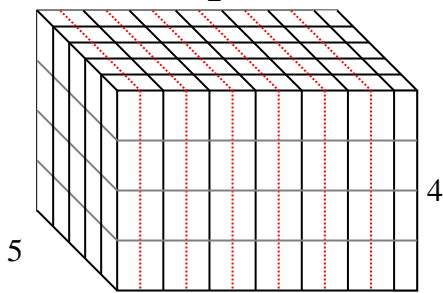


Rellenar cada prisma rectangular con cubos para determinar el volumen. Cada unidad de prisma es medida en cm (no a escala).

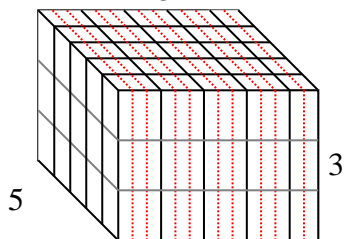
Ej) $3 \frac{1}{2}$



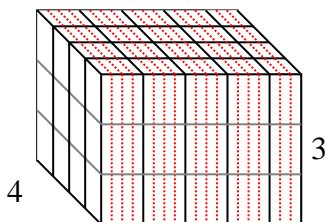
1) $6 \frac{1}{2}$



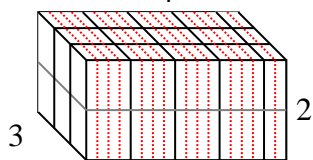
2) $4 \frac{2}{3}$



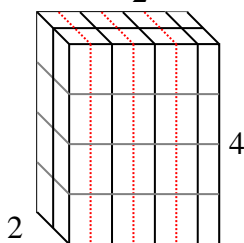
3) $4 \frac{3}{4}$



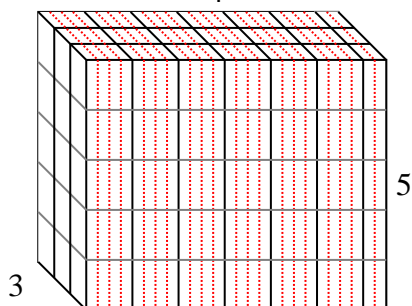
4) $4 \frac{2}{4}$



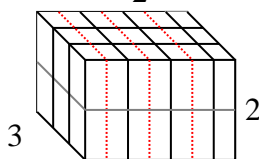
5) $3 \frac{1}{2}$



6) $6 \frac{2}{4}$



7) $3 \frac{1}{2}$



Respuestas

Ej. 35 cm

1. 130 cm

2. 70 cm

3. 57 cm

4. 27 cm

5. 28 cm

6. 97 2/4 cm

7. 21 cm