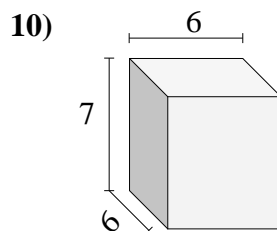
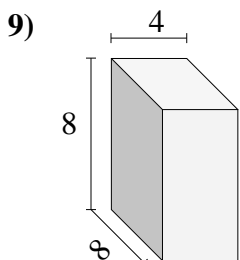
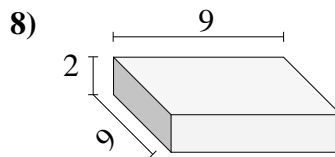
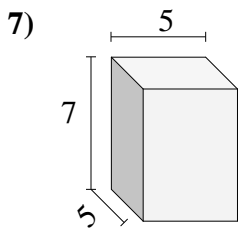
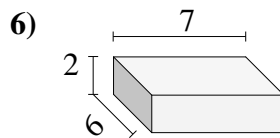
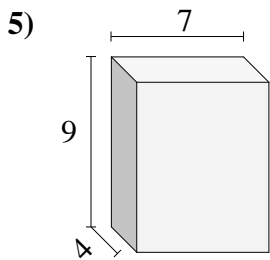
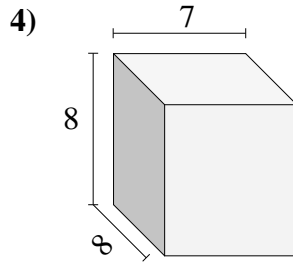
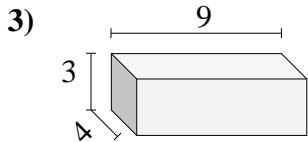
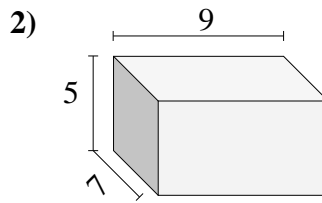
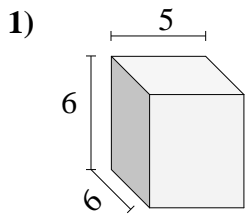




Encuentra el volumen de cada prisma rectangular. Mide en cm (no estan en escala).

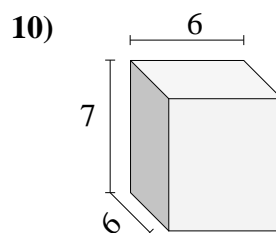
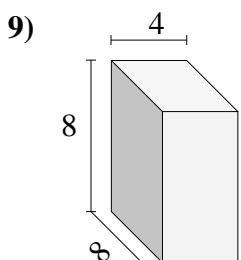
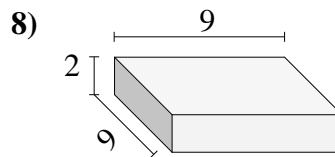
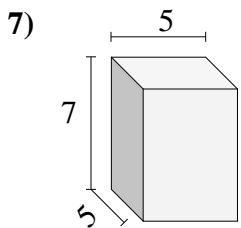
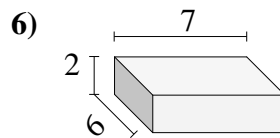
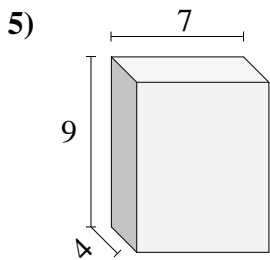
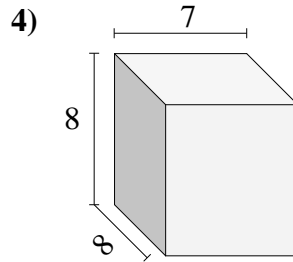
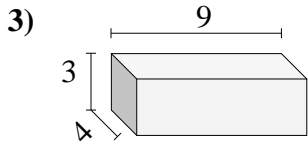
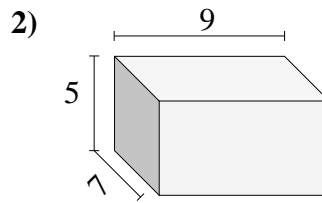
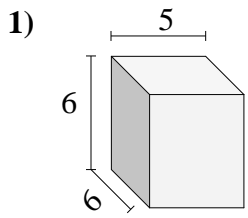


**Respuestas**

- 1. \_\_\_\_\_
- 2. \_\_\_\_\_
- 3. \_\_\_\_\_
- 4. \_\_\_\_\_
- 5. \_\_\_\_\_
- 6. \_\_\_\_\_
- 7. \_\_\_\_\_
- 8. \_\_\_\_\_
- 9. \_\_\_\_\_
- 10. \_\_\_\_\_



Encuentra el volumen de cada prisma rectangular. Mide en cm (no estan en escala).

**Respuestas**1. **180**2. **315**3. **108**4. **448**5. **252**6. **84**7. **175**8. **162**9. **256**10. **252**