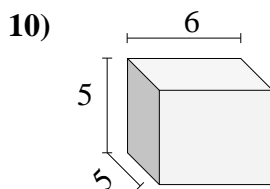
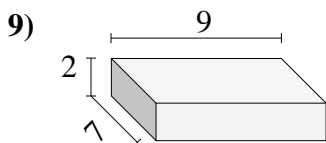
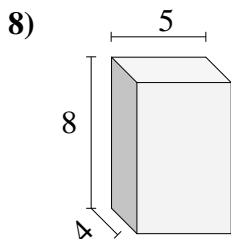
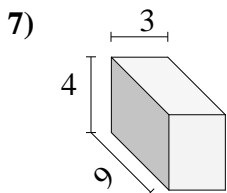
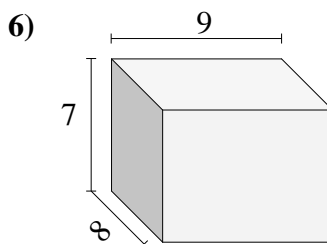
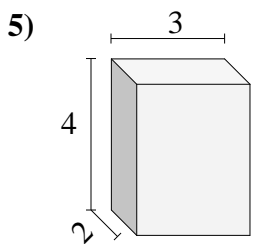
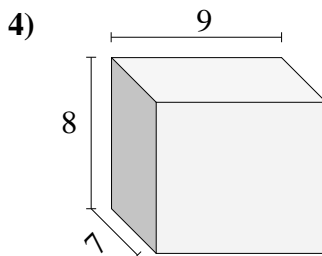
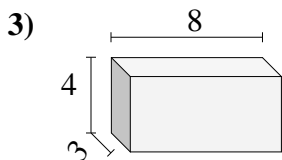
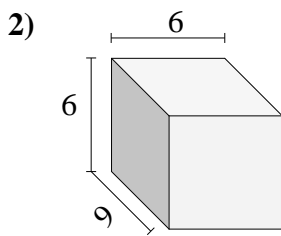
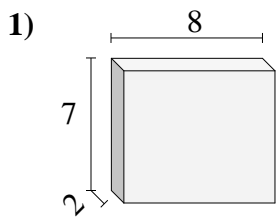




Encuentra el volumen de cada prisma rectangular. Mide en cm (no estan en escala).

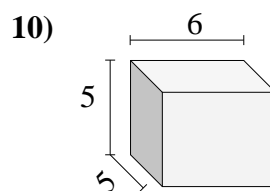
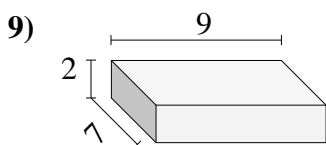
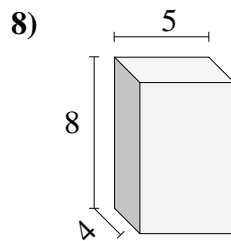
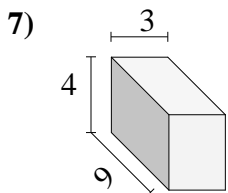
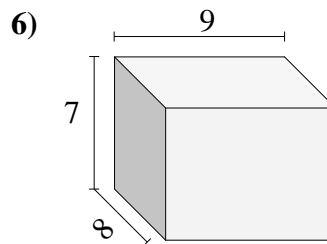
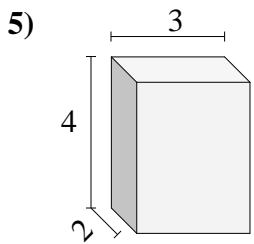
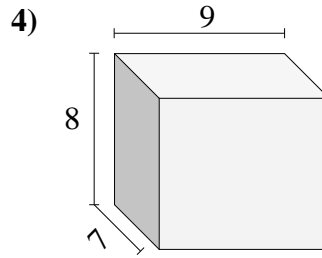
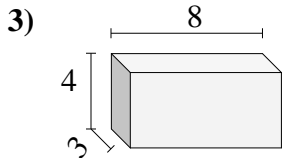
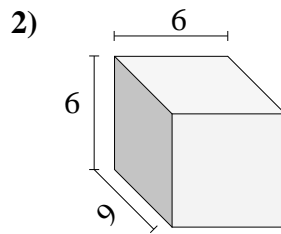
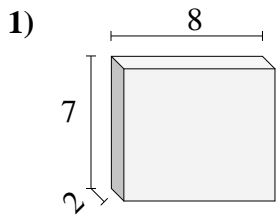


Respuestas

- 1. _____
- 2. _____
- 3. _____
- 4. _____
- 5. _____
- 6. _____
- 7. _____
- 8. _____
- 9. _____
- 10. _____



Encuentra el volumen de cada prisma rectangular. Mide en cm (no estan en escala).

**Respuestas**1. **112**2. **324**3. **96**4. **504**5. **24**6. **504**7. **108**8. **160**9. **126**10. **150**